

OES Exam		Search <input type="text"/>	PDF
GPSC0320210806 Pre Screening of Junior Scale Officer_6 Completed 2021-07-25 <input type="text"/>			
Select OES Exam			

1	Comprehension	<p>Read the following passage and answer the questions given below:</p> <p>Speech is great blessings but it can also be great curse, for while it helps us to make our intentions and desires known to our fellows, it can also if we use it carelessly, make our attitude completely misunderstood. A slip of the tongue, the use of unusual word, or of an ambiguous word, and so on, may create an enemy where we had hoped to win a friend. Again, different classes of people use different vocabularies, and the ordinary speech of an educated may strike an uneducated listener as pompous. Unwittingly, we may use a word which bears a different meaning to our listener from what it does to men of our own class. Thus, speech is not a gift to use lightly without thought, but one which demands careful handling. Only a fool will express himself alike to all kinds and conditions to men.</p>
	Question Description	The best way to win a friend is to avoid
	A	irony in speech.
	B	pomposity in speech.
	C	verbosity in speech.
	D	ambiguity in speech.
	Correct Answer	D
	Marks	1

2	Comprehension	<p>Read the following passage and answer the questions given below:</p> <p>Speech is great blessings but it can also be great curse, for while it helps us to make our intentions and desires known to our fellows, it can also if we use it carelessly, make our attitude completely misunderstood. A slip of the tongue, the use of unusual word, or of an ambiguous word, and so on, may create an enemy where we had hoped to win a friend. Again, different classes of people use different vocabularies, and the ordinary speech of an educated may strike an uneducated listener as pompous. Unwittingly, we may use a word which bears a different meaning to our listener from what it does to men of our own class. Thus, speech is not a gift to use lightly without thought, but one which demands careful handling. Only a fool will express himself alike to all kinds and conditions to men.</p>
	Question Description	While talking to an uneducated person, we should use
	A	ordinary speech.
	B	his vocabulary.
	C	simple words.
	D	polite language.
	Correct Answer	B
	Marks	1

3	Comprehension	<p>Read the following passage and answer the questions given below:</p> <p>Speech is great blessings but it can also be great curse, for while it helps us to make our intentions and desires known to our fellows, it can also if we use it carelessly, make our attitude completely misunderstood. A slip of the tongue, the use of unusual word, or of an ambiguous word, and so on, may create an enemy where we had hoped to win a friend. Again, different classes of people use different vocabularies, and the ordinary speech of an educated may strike an uneducated listener as pompous. Unwittingly, we may use a word which bears a different meaning to our listener from what it does to men of our own class. Thus, speech is not a gift to use lightly without thought, but one which demands careful handling. Only a fool will express himself alike to all kinds and conditions to men.</p>
	Question Description	If one used the same style of language with everyone, one would sound
	A	flat
	B	boring
	C	foolish
	D	democratic
	Correct Answer	C
	Marks	1

4	Comprehension	<p>Read the following passage and answer the questions given below:</p> <p>Speech is great blessings but it can also be great curse, for while it helps us to make our intentions and desires known to our fellows, it can also if we use it carelessly, make our attitude completely misunderstood. A slip of the tongue, the use of unusual word, or of an ambiguous word, and so on, may create an enemy where we had hoped to win a friend. Again, different classes of people use different vocabularies, and the ordinary speech of an educated may strike an uneducated listener as pompous. Unwittingly, we may use a word which bears a different meaning to our listener from what it does to men of our own class. Thus, speech is not a gift to use lightly without thought, but one which demands careful handling. Only a fool will express himself alike to all kinds and conditions to men.</p>
	Question Description	A 'slip of the tongue' means something said
	A	wrongly by choice.
	B	unintentionally.
	C	without giving proper thought.
	D	to hurt another person.
	Correct Answer	C
	Marks	1

5	Comprehension	<p>Read the following passage and answer the questions given below:</p> <p>Speech is great blessings but it can also be great curse, for while it helps us to make our intentions and desires known to our fellows, it can also if we use it carelessly, make our attitude completely misunderstood. A slip of the tongue, the use of unusual word, or of an ambiguous word, and so on, may create an enemy where we had hoped to win a friend. Again, different classes of people use different vocabularies, and the ordinary speech of an educated may strike an uneducated listener as pompous. Unwittingly, we may use a word which bears a different meaning to our listener from what it does to men of our own class. Thus, speech is not a gift to use lightly without thought, but one which demands careful handling. Only a fool will express himself alike to all kinds and conditions to men.</p>
	Question Description	Speech can be curse, because it can

A	hurt others.
B	lead to carelessness.
C	create misunderstanding.
D	reveal our intentions.
Correct Answer	C
Marks	1

6	Comprehension	<p>Read the following passage and answer the questions given below:</p> <p>Nevertheless, there is a type of literature in which the writer becomes the centre of what he writes. About the end of Middle ages men all over Europe began to awaken to a new fact-that they need no longer go on telling the old stories, preaching the same sermons, singing the same battle-songs. A new sense of freedom and liberty had come to them. The song became the expression of the singer's own feeling, his joy, or sorrow, or love, or hate. History and story had often been put down, strangely and superstitiously often, without a comment or opinion on the part of him who wrote them. Now the writer began to express his own ideas and thought on the matter</p>
	Question Description	The passage implies that at the end of the Middle Ages, writing of songs became more -----than before.
	A	objective
	B	subjective
	C	emotional
	D	spontaneous
	Correct Answer	B
	Marks	1

7	Comprehension	<p>Read the following passage and answer the questions given below:</p> <p>Nevertheless, there is a type of literature in which the writer becomes the centre of what he writes. About the end of Middle ages men all over Europe began to awaken to a new fact-that they need no longer go on telling the old stories, preaching the same sermons, singing the same battle-songs. A new sense of freedom and liberty had come to them. The song became the expression of the singer's own feeling, his joy, or sorrow, or love, or hate. History and story had often been put down, strangely and superstitiously often, without a comment or opinion on the part of him who wrote them. Now the writer began to express his own ideas and thought on the matter</p>
	Question Description	<p>“History and story had often been put down, strangely and superstitiously often, without a comment or opinion on the part of him who wrote them. Now the writer began to express his own ideas and thought on the matter”.</p> <p>The above statement implies that the writing of history and story was now</p>
	A	revolutionized
	B	revised
	C	repealed
	D	reprised
	Correct Answer	A
	Marks	1

8	Comprehension	<p>Read the following passage and answer the questions given below:</p> <p>Nevertheless, there is a type of literature in which the writer becomes the centre of what he writes. About the end of Middle ages men all over Europe began to awaken to a new fact-that they need no longer go on telling the old stories, preaching the same sermons, singing the same battle-songs. A new sense of freedom and liberty had come to them. The song became the expression of the singer's own feeling, his joy, or sorrow, or love, or hate. History and story had often been put down, strangely and superstitiously often, without a comment or opinion on the part of him who wrote them. Now the writer began to express his own ideas and thought on the matter</p>
	Question Description	The passage implies that earlier the writing of history and story was
	A	strange and superstitious
	B	opinionated
	C	commentary like
	D	none of the above
	Correct Answer	D
	Marks	1

9	Comprehension	<p>Read the following passage and answer the questions given below:</p> <p>Nevertheless, there is a type of literature in which the writer becomes the centre of what he writes. About the end of Middle ages men all over Europe began to awaken to a new fact-that they need no longer go on telling the old stories, preaching the same sermons, singing the same battle-songs. A new sense of freedom and liberty had come to them. The song became the expression of the singer's own feeling, his joy, or sorrow, or love, or hate. History and story had often been put down, strangely and superstitiously often, without a comment or opinion on the part of him who wrote them. Now the writer began to express his own ideas and thought on the matter</p>
	Question Description	The shift that came in the world of literature, as detailed in the passage, can be best described as the
	A	reformation
	B	restriction
	C	renaissance
	D	revival
	Correct Answer	C
	Marks	1

10	Comprehension	<p>Read the following passage and answer the questions given below:</p> <p>Nevertheless, there is a type of literature in which the writer becomes the centre of what he writes. About the end of Middle ages men all over Europe began to awaken to a new fact-that they need no longer go on telling the old stories, preaching the same sermons, singing the same battle-songs. A new sense of freedom and liberty had come to them. The song became the expression of the singer's own feeling, his joy, or sorrow, or love, or hate. History and story had often been put down, strangely and superstitiously often, without a comment or opinion on the part of him who wrote them. Now the writer began to express his own ideas and thought on the matter</p>
	Question Description	It can be deduced from the passage that the main subject matter of literary activity in the Middle Ages was
	A	history story and poetry

	lore, poetry and history
B	lore, religious sermons and war
C	history, literature and story
D	lore, poetry and history
Correct Answer	B
Marks	1

11	<p>Question Description</p> <p>In the questions below is given four statements followed by four conclusions numbered I,II,III and IV. You have to take the given statements to be true even if they seem to be at variance from commonly known facts. Read all the conclusions and then decide which of the given conclusion logically from the given statements disregarding commonly known facts.</p> <p>Statements:</p> <p>Some chairs are tunnels Some tunnels are keys All keys are boxes All boxes are houses</p> <p>Conclusions</p> <p>I. Some houses are tunnels II. Some boxes are chairs III. Some boxes are tunnels IV. Some houses are chairs.</p>
A	Only I and II follows.
B	Only I, II and III follows.
C	Only I, and III follows.
D	Only I, III and IV follows
Correct Answer	C
Marks	1

12	<p>Question Description</p> <p>In a queue, the rank of Sanjay is 10th from the front while the rank of Ajay is 25th from behind. Meera is present in the middle of the two. It is given that the total number of persons is 50. Then determine the rank of Meera from the front.</p>
A	17
B	18
C	19
D	20
Correct Answer	B
Marks	1

13	<p>Question Description</p> <p>Statement: Should there be students union in university campus?</p> <p>Arguments:</p> <p>I. No. This will create a political atmosphere in the campus. II. Yes, it is very necessary Students are future political leaders.</p>
A	Only argument I is strong
B	Only argument II is strong
C	Either I or II is strong
D	Both I and II are strong
Correct Answer	D
Marks	1

14	<p>Question Description</p> <p>Which word does NOT belong with the others?</p>
A	unique
B	beautiful
C	rare
D	exceptional
Correct Answer	B
Marks	1

15	<p>Question Description</p> <p>Find the missing character?</p> <table border="1" style="margin-left: auto; margin-right: auto;"> <tr> <td>A</td> <td>D</td> <td>G</td> </tr> <tr> <td>D</td> <td>I</td> <td>N</td> </tr> <tr> <td>I</td> <td>P</td> <td>?</td> </tr> </table>	A	D	G	D	I	N	I	P	?
A	D	G								
D	I	N								
I	P	?								
A	V									
B	X									
C	W									
D	Y									
Correct Answer	C									
Marks	1									

16	<p>Question Description</p> <p>Here are some words translated from an artificial language.</p> <p>morpirat means birdhouse beelmorpir means bluebird beelclak means bluebell</p> <p>Which word could mean "houseguest"?</p>
A	morpirat

	morpirnunae
B	beelmoki
C	quathunde
D	clakquat
Correct Answer	C
Marks	1

17	Question Description	Ayesha's father was 38 years of age when she was born while her mother was 36 years old when her brother four years younger to her was born. What is the difference between the ages of her parents?
	A	2 years
	B	4 years
	C	6 years
	D	8 years
	Correct Answer	C
	Marks	1

18	Question Description	Determine which of the following doesn't belong to the below list
	A	Focaccia
	B	Pumpernickel
	C	French loaf
	D	Caraway seeds
	Correct Answer	D
	Marks	1

19	Question Description	If all the consonants starting from B are given sequentially the value of even numbers such as B=2, C=4, and all the vowels are given the value of 5 each then what will be the value of the letters of the word CUSTOM ?
	A	92
	B	86
	C	82
	D	96
	Correct Answer	D
	Marks	1

20	Question Description	R is the father of P, who is a son-in-law of M and S is the mother of G. S is a sister of K, who is a brother-in-law of P and H is the daughter of T, who is a grandmother of G. How is G related to P?
	A	Son
	B	Daughter
	C	Granddaughter
	D	Cannot be determined
	Correct Answer	D
	Marks	1

21	Question Description	A thief hides his loot in a house. As the police chase him, he runs 2 kms to the west before taking a right turn and running for another 2 kms. He then takes a right turn and runs for another 7 kms. Finally, he takes two right turns and runs 2 kms after taking each turn and defeat the police. How far must he walk in order to reach the house in which he had hidden the loot?
	A	2 kms
	B	3 kms
	C	4 kms
	D	1 kms
	Correct Answer	B
	Marks	1

22	Question Description	In the Maple Hill school district, a Five-Day Suspension occurs when a student is not permitted to attend school for five days for (1) physically assaulting another student, a teacher, or a school employee or (2) willfully destructing or defacing school property. Which situation below is the best example of a Five-Day Suspension?
	A	Lillian gets caught cheating on a math test for the second time and is suspended from school.
	B	Marc is asked to leave the classroom due to his constant disruptions.
	C	Franny uses spray paint to write derogatory comments on the locker room wall and she is given a suspension.
	D	Ms. Farmer tells her class that students who fail the midterm exam will be expected to stay after school for tutoring help.
	Correct Answer	C
	Marks	1

23	Question Description	Select a suitable figure from the four alternatives that would complete the figure matrix.
	A	1

	1
B	2
C	3
D	4
Correct Answer	A
Marks	1

24	Question Description	In the following question, two statements numbered I and II are given. There may be cause and effect relationship between the two statements. These two statements may be the effect of the same cause or independent causes. These statements may be independent causes without having any relationship. Read both the statements in the question and mark your answer Statements: I. The prices of petrol and diesel in the domestic market have remained unchanged for the past few months. II. The crude oil prices in the international market have gone up substantially in the last few months.
	A	Statement I is the cause and statement II is its effect
	B	Statement II is the cause and statement I is its effect
	C	Both the statements I and II are independent causes
	D	Both the statements I and II are effects of independent causes
	Correct Answer	D
	Marks	1

25	Question Description	P, Q, R, S, T, U, V & W are sitting round the circle and are facing the centre. i. P is second to the right of T who is the neighbor of R & V. ii. S is not the neighbor of P. iii. V is the neighbor of U iv. Q is not between S & W and W is not between U & S. What is the position of S?
	A	Between U & V
	B	Second to the right of P
	C	To the immediate right of P
	D	Data inadequate
	Correct Answer	D
	Marks	1

26	Question Description	Four statements are given. Three of them are related in some way. Identify the "Odd man" and mark its letter as your answer.
	A	My sister likes to watch the TV during her free time.
	B	I prefer reading novels.
	C	My father goes to the club for a game of bridge.
	D	My brother works hard for his exams.
	Correct Answer	D
	Marks	1

27	Question Description	In a certain code DESIRABLE is written as JTFEQFMCB, how is DIMENSION written in that code?
	A	FNJEMTJPO
	B	FNJEOPJT
	C	FNJEMOPJT
	D	EJNFMOPJT
	Correct Answer	C
	Marks	1

28	Question Description	In the questions below is given four statements followed by four conclusions numbered I,II,III and IV. You have to take the given statements to be true even if they seem to be at variance from commonly known facts. Read all the conclusions and then decide which of the given conclusion logically from the given statements disregarding commonly known facts. Statements : All nails are boards. Some boards are desks. All desks are sticks Some sticks are ropes. Conclusions: I. Some ropes are desks II. Some sticks are boards III. Some desks are nails IV. Some boards are nails
	A	Only I and II follows.
	B	Only II and III follows.
	C	Only I,II and III follows.
	D	Only II and IV follows
	Correct Answer	D
	Marks	1

29	Question Description	In the following questions a number series is given. After the series a number is given followed by (a), (b), (c), and (d). You have to complete the series starting with the given number, following the sequence of original series and answer the question that follows the series. What will come in the place of (B)? 3 19 103 439 1381 2887 5 A B C D
	A	139

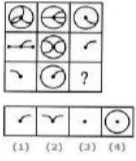
	B	163
	C	161
	D	157
	Correct Answer	B
	Marks	1
30	Question Description	What should come in the place of question mark (?) in the following number series? 13, 14, 30, 93, 376, 1885, ?
	A	10818
	B	10316
	C	11316
	D	11318
	Correct Answer	C
	Marks	1
31	Question Description	If BAG is written as ACZBFH then what will be the code for PENCIL
	A	OQDFMOBEHJKM
	B	OQDGMODHJKM
	C	OQDFMOBDHJKM
	D	OQDFMOBDHKKM
	Correct Answer	C
	Marks	1
32	Question Description	A family consists of six members P, Q, R, X, Y and Z. Q is the son of R but R is not mother of Q. P and R are a married couple. Y is the brother of R. X is the daughter of P. Z is the brother of P. How many female members are there in the family ?
	A	two
	B	three
	C	one
	D	four
	Correct Answer	A
	Marks	1
33	Question Description	Complete the series 20, 32, 45, 59, 74, ?
	A	95
	B	90
	C	85
	D	79
	Correct Answer	B
	Marks	1
34	Question Description	Choose the statement which indicates the specific form of the given statement. If making art is solitary thing and it tries to find some positivity in all the negativity then it needs to be encouraged. (' \rightarrow ' – Implication, ' \wedge '- conjunction)
	A	$(P \rightarrow Q)$
	B	$(P \wedge Q) \rightarrow R$
	C	$P \wedge (Q \rightarrow R)$
	D	P
	Correct Answer	B
	Marks	1
35	Question Description	Read the following information carefully and answer the questions below. 1. In a family of six persons, L, M, N, F, P, Q, there are two married couples. 2. F is grandmother of L and mother of M. 3. N is wife of M and mother of Q. 4. Q is the grand-daughter of P. Who among the following is one of the couples?
	A	N-F
	B	F-P
	C	P-M
	D	None of these
	Correct Answer	B
	Marks	1

36	Question Description	Choose the correct water - image of the fig. (x) from the given four figures.

A	a
B	b
C	c
D	d
Correct Answer	A
Marks	1

37	Question Description	The integers 1, 2, ..., 40 are written on a blackboard. The following operation is then repeated 39 times: In each repetition, any two numbers say a and b, currently on the blackboard are erased and a new number $a+b-1$ is written. What will be the number left on the board at the end?
A	820	
B	821	
C	781	
D	819	
Correct Answer	C	
Marks	1	

38	Question Description	Which of the following will come in place of the question mark (?) in the following sequence? PRODUCTIVITY, RODUCTIVIT, ODUCTIVI, ?
A	DUCTIV	
B	DUCTLY	
C	UCTIV	
D	DUCTI	
Correct Answer	A	
Marks	1	

39	Question Description	Select a suitable figure from the four alternatives that would complete the figure matrix. 
A	1	
B	2	
C	3	
D	4	
Correct Answer	C	
Marks	1	

40	Question Description	Yoga has become a very popular type of exercise, but it may not be for everyone. Before you sign yourself up for a yoga class, you need to examine what it is you want from your fitness routine. If you're looking for a high-energy, fast-paced aerobic workout, a yoga class might not be your best choice. This paragraph best supports the statement that
A	Yoga is more popular than high-impact aerobics.	
B	Before embarking on a new exercise regimen, you should think about your needs and desires.	
C	Yoga is changing the world of fitness in major ways	
D	Yoga benefits your body and mind	
Correct Answer	B	
Marks	1	

41	Question Description	Here are some words translated from an artificial language. <i>haplesh</i> means cloudburst <i>srenchoch</i> means pinball <i>resbosrench</i> means ninepin Which word could mean "cloud nine"?
A	leshsrench	
B	ochhapl	
C	haploch	
D	hapresbo	
Correct Answer	D	
Marks	1	

42	Question Description	Mary's Parents complaint to the principal about bullying her in the school. He wants to investigate and end this situation as soon as possible, so he checked the security cameras of whole school. What did he find in the cameras?
A	A group of girls sitting in canteen and having lunch.	
B	A group of girls and boys in a library talking each other and making noises.	
C	Few girls murmuring outside the door of the washroom and locked the door of the washroom and ran away.	

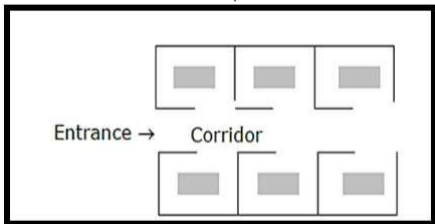
D	Two Boys using phone in the classroom.
Correct Answer	C
Marks	1
43	<p>Question Description</p> <p>Complete the number series given below? 13 19 37 ? 141 243</p>
A	58
B	67
C	75
D	96
Correct Answer	C
Marks	1
44	<p>Question Description</p> <p>A train running at the speed of 100 km/hr crosses a pole in 2 seconds. What is the length of the train?</p>
A	65.73 metres
B	87.36 metres
C	55.55 metres
D	50.66 metres
Correct Answer	C
Marks	1
45	<p>Question Description</p> <p>In the following questions two rows of number are given. The resultant number in each row is to be worked out separately based on the following rules and the question below the row is to be answered. The operations of number progress from the left to right.</p> <p>Rules:</p> <ol style="list-style-type: none"> If an even number is followed by another even number they are to be added. If an even number is followed by a prime number, they are to be multiplied. If an odd number is followed by an even number, even number is to be subtracted from the odd number. If an odd number is followed by another odd number the first number is to be added to the square of the second number. If an even number is followed by a composite odd number, the even number is to be divided by odd number. <p>What is half of the sum of the resultants of the two rows given below?</p> <ol style="list-style-type: none"> 84 21 13 15 11 44
A	116
B	132
C	232
D	236
Correct Answer	A
Marks	1
46	<p>Question Description</p> <p>Statement: A train derailed near a station while moving over a bridge and fell into a river, resulting in the death of 65 people.</p> <p>Courses of Action:</p> <ol style="list-style-type: none"> The Railway Authorities should clarify the reason of the accident to the Government. The Government should allocate funds to compensate the destruction caused. The protection walls of the bridge should be made strong enough to avoid such accidents.
A	Only I and II follow
B	Only II and III follow
C	Only III follows
D	All follow
Correct Answer	C
Marks	1
47	<p>Question Description</p> <p>9 is related to 27 in the same way as 18 is related to –</p>
A	45
B	54
C	50
D	58
Correct Answer	B
Marks	1
48	<p>Question Description</p> <p>A person has to travel from point B in certain time. Travelling at a speed of 5 kmph he reaches 48 minutes late and while travelling at a speed of 8 kmph he reaches 15 minutes early. What is the distance from point A to point B?</p>
A	15 kms
B	91 kms
C	12 kms
D	14 kms
Correct Answer	D
Marks	1
49	<p>Question Description</p> <p>Four jumbled words are given. Rearrange them and identify the word, which is the "Odd Man". Mark its option given below as your answer:</p>
A	eohrs
B	enodky
C	knmoey
D	raprot

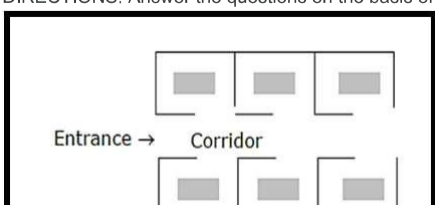
		4
	Correct Answer	D
	Marks	1
50	Question Description	18 litres of pure water was added to a vessel containing 80 litres of pure milk. 49 litres of the resultant mixture was then sold and some more quantity of pure milk and pure water was added to the vessel in the respective ratio of 2:1. If the resultant respective ratio of milk and water in the vessel was 4:1, what was the quantity of pure milk added in the vessel ? (in litres)
	A	4
	B	8
	C	10
	D	12
	Correct Answer	A
	Marks	1
51	Question Description	Pick the odd man out :
	A	Honey
	B	Pearl
	C	Coral
	D	Resin
	Correct Answer	D
	Marks	1
52	Question Description	Rahim plans to drive from city A to station C, at the speed of 70km per hour, to catch a train arriving there from B. He must reach C at least 15 minutes before the arrival of the train. The train leaves B, located 500 km south of A, at 8:00 am and travels at a speed of 50 km per hour. It is known that C is located between west and northwest of B, with BC at 60° to AB. Also, C is located between south and southwest of A with AC at 30° to AB. The latest time by which Rahim must leave A and still catch the train is closest to:
	A	6 : 15 am
	B	6 : 30 am
	C	6 : 45 am
	D	7 : 00 am
	Correct Answer	B
	Marks	1
53	Question Description	Fact 1: Ram has four vehicles. Fact 2: Two of the vehicles are red. Fact 3: One of the vehicles is a minivan. If the first three statements are facts, which of the following statements must also be a fact? I: Ram has a red minivan. II: Ram has three cars. III: Ram's favorite color is red.
	A	I only
	B	II only
	C	II and III only
	D	None of the statements
	Correct Answer	D
	Marks	1
54	Question Description	Find the odd man out. 41, 43, 47, 53, 61, 71, 73, 81
	A	41
	B	61
	C	71
	D	81
	Correct Answer	D
	Marks	1
55	Question Description	Find the odd number of the series 363, 572, 474, 561
	A	363
	B	572
	C	474
	D	561
	Correct Answer	C
	Marks	1
56	Question Description	Choose the conclusions which logically follow from the given statements. Statements: All the locks are keys. All the keys are bats. Some watches are bats. Conclusions: 1. Some bats are locks. 2. Some watches are keys.

	3. All the keys are locks.
A	Only (1) and (2)
B	Only (1)
C	Only (2)
D	Only (1) and (3)
Correct Answer	B
Marks	1

57	Comprehension	<p>Study the following information carefully and answer the given question</p> <p>A word and number arrangement machine when given an input line of words and numbers rearranges them following a particular rule in each step. The following is an illustration of input and rearrangement.</p> <p>Input: One for road 36 87 29 now 17 Step I: 17 one for road 36 87 29 now Step II: 17 road one for 36 87 29 now Step III: 17 road 29 one for 36 87 now Step IV: 17 road 29 one 36 for 87 now Step V: 17 road 29 one 36 now for 87 Step VI: 17 road 29 one 36 now 87 for Step VI is the last step of the rearrangement of the above input.</p> <p>As per the rules followed in the above steps, find out in each of the following question the appropriate step of the given input.</p>
	Question Description	<p>Input : gas 80 fire 73 16 32 old water Which of the following steps will be the last but one of the rearrangements?</p>
	A	V
	B	VII
	C	VI
	D	IV
	Correct Answer	D
	Marks	1

58	Comprehension	<p>Study the following information carefully and answer the given question</p> <p>A word and number arrangement machine when given an input line of words and numbers rearranges them following a particular rule in each step. The following is an illustration of input and rearrangement.</p> <p>Input: One for road 36 87 29 now 17 Step I: 17 one for road 36 87 29 now Step II: 17 road one for 36 87 29 now Step III: 17 road 29 one for 36 87 now Step IV: 17 road 29 one 36 for 87 now Step V: 17 road 29 one 36 now for 87 Step VI: 17 road 29 one 36 now 87 for Step VI is the last step of the rearrangement of the above input.</p> <p>As per the rules followed in the above steps, find out in each of the following question the appropriate step of the given input.</p>
	Question Description	<p>Step III of an input is : 23 sky 37 95 87 blue clear red. Which of the following steps will be the last?</p>
	A	IX
	B	VIII
	C	VII
	D	VI
	Correct Answer	D
	Marks	1

59	Comprehension	<p>DIRECTIONS: Answer the questions on the basis of the following information.</p>  <p>The plan above shows an office block for six officers, A, B, C, D, E, and F. Both B and C occupy offices to the right of the corridor (as one enters the office block) and A occupies an office to the left of the corridor. E and F occupy offices on opposite sides of the corridor but their offices do not face each other. The offices of C and D face each other. E does not have a corner office. F's office is further down the corridor than A's, but on the same side.</p>
	Question Description	<p>If E sits in his office and faces the corridor, whose office is to his left?</p>
	A	A
	B	B
	C	C
	D	D
	Correct Answer	C
	Marks	1

60	Comprehension	<p>DIRECTIONS: Answer the questions on the basis of the following information.</p> 
----	---------------	--



The plan above shows an office block for six officers, A, B, C, D, E, and F. Both B and C occupy offices to the right of the corridor (as one enters the office block) and A occupies an office to the left of the corridor. E and F occupy offices on opposite sides of the corridor but their offices do not face each other. The offices of C and D face each other. E does not have a corner office. F's office is further down the corridor than A's, but on the same side.

Question Description	Whose office faces A's office?
A	B
B	C
C	D
D	E
Correct Answer	D
Marks	1

