

Computer Based Examination System

Exported On *	2021/12/04 18:48:12
Title *	Question Paper Answer Key
OES Exam *	GPSC0720210603 Pre Screening of Block Development Officer_3 Completed 2021-12-04

1

Comprehension

Answer following questions on the basis of the passage below.

How quickly things change in the technology business! A decade ago, IBM was the awesome and undisputed king of computer trade, universally feared and respected. A decade ago, two little companies called *Intel* and *Microsoft* were mere blips on the radar screen of the industry, upstart start-ups that had signed on to make the chips and software for IBM's new line of personal computers, the two companies remained protected children of the market leader. What happened since is a startling reversal of fortune. IBM is being ravaged by the worst crisis in the company's 79-year history. It is undergoing its fifth re-structuring in the past seven years as well as seemingly endless rounds of job-cuts and firings that have eliminated 1,00,000 since 1985. Recently, IBM announced to its shell-shocked investors that it lost \$ 4.97 billion last year, the biggest loss in American corporate history.

Question Description

The phrase "reversal of fortune" in the passage indicates that within a decade of its leading global presence in the technology business

A IBM no longer remained singly in the prime position as *Intel* and *Microsoft* also rose to it

B IBM no longer remained in the prime position where as *Intel* and *Microsoft* rose to it

C IBM no longer remained singly in the prime position while *Intel* and *Microsoft* shared it

D IBM no longer remained in the prime position but *Intel* and *Microsoft* replaced it

E None of the above

Correct Answer

B

Marks

1

2

Comprehension

Answer following questions on the basis of the passage below.

How quickly things change in the technology business! A decade ago, IBM was the awesome and undisputed king of computer trade, universally feared and respected. A decade ago, two little companies called *Intel* and *Microsoft* were mere blips on the radar screen of the industry, upstart start-ups that had signed on to make the chips and software for IBM's new line of personal computers, the two companies remained protected children of the market leader. What happened since is a startling reversal of fortune. IBM is being ravaged by the worst crisis in the company's 79-year history. It is undergoing its fifth re-structuring in the past seven years as well as seemingly endless rounds of job-cuts and firings that have eliminated 1,00,000 since 1985. Recently, IBM announced to its shell-shocked investors that it lost \$ 4.97 billion last year, the biggest loss in American corporate history.

Question Description

From the options provided below, identify the phrase that is closest in meaning to the sense of the phrase "awesome and undisputed king", as used in the passage

A

admirable and unanimous leader

B

breath taking and unchallenged monarch

C

extremely impressive and uncontested leader

D

amazing and undoubted ruler

E

None of the above

Correct Answer

C

Marks

1

3

Comprehension

Answer following questions on the basis of the passage below.

How quickly things change in the technology business! A decade ago, IBM was the awesome and undisputed king of computer trade, universally feared and respected. A decade ago, two little companies called *Intel* and *Microsoft* were mere blips on the radar screen of the industry, upstart start-ups that had signed on to make the chips and software for IBM's new line of personal computers, the two companies remained protected children of the market leader. What happened since is a startling reversal of fortune. IBM is being ravaged by the worst crisis in the company's 79-year history. It is undergoing its fifth re-structuring in the past seven years as well as seemingly endless rounds of job-cuts and firings that have eliminated 1,00,000 since 1985. Recently, IBM announced to its shell-shocked investors that it lost \$ 4.97 billion last year, the biggest loss in American corporate history.

Question Description

Identify the figure of speech in the statement “*Intel* and *Microsoft* were mere blips on the radar screen of the industry”

A

metaphor, pun, hyperbole

B

simile, pun, hyperbole

C

metaphor, synecdoche, pun

D

synecdoche, simile, hyperbole

E

None of the above

Correct Answer

A

Marks

1

4

Comprehension

Answer following questions on the basis of the passage below.

How quickly things change in the technology business! A decade ago, IBM was the awesome and undisputed king of computer trade, universally feared and respected. A decade ago, two little companies called *Intel* and *Microsoft* were mere blips on the radar screen of the industry, upstart start-ups that had signed on to make the chips and software for IBM's new line of personal computers, the two companies remained protected children of the market leader. What happened since is a startling reversal of fortune. IBM is being ravaged by the worst crisis in the company's 79-year history. It is undergoing its fifth re-structuring in the past seven years as well as seemingly endless rounds of job-cuts and firings that have eliminated 1,00,000 since 1985. Recently, IBM announced to its shell-shocked investors that it lost \$ 4.97 billion last year, the biggest loss in American corporate history.

Question Description

The erstwhile subordinate status of Intel and Microsoft to IMB is indicated by the phrase

A

upstart start ups

B

mere blips on the radar screen of the industry

C

two little companies

D

protected children of the market leader

E

None of the above

Correct Answer

D

Marks

1

5

Comprehension

Answer following questions on the basis of the passage below.

How quickly things change in the technology business! A decade ago, IBM was the awesome and undisputed king of computer trade, universally feared and respected. A decade ago, two little companies called *Intel* and *Microsoft* were mere blips on the radar screen of the industry, upstart start-ups that had signed on to make the chips and software for IBM's new line of personal computers, the two companies remained protected children of the market leader. What happened since is a startling reversal of fortune. IBM is being ravaged by the worst crisis in the company's 79-year history. It is undergoing its fifth re-structuring in the past seven years as well as seemingly endless rounds of job-cuts and firings that have eliminated 1,00,000 since 1985. Recently, IBM announced to its shell-shocked investors that it lost \$ 4.97 billion last year, the biggest loss in American corporate history.

Question Description

Identify the term or phrase from the passage which means “stunned or confused due to a sudden alarming situation”

A

startling reversal of fortune

B

shell-shocked

C

ravaged by worst crisis

D

awesome and undisputed

E

None of the above

Correct Answer

B

Marks

1

6

Comprehension

Answer following questions on the basis of the passage below.

To teach is to create a space in which obedience to truth is practised. Space may sound like a vague, poetic metaphor until we realise that it describes experiences of everyday life. We know what it means to be in a green and open field. We know what it means on a crowded rush hour bus. These experiences of physical space have parallels in our relationships with others. On our job we know what it is to be pressed and crowded, our working space diminished by the urgency of deadlines and competitiveness of colleagues. But there are times when deadlines disappear and colleagues co-operate, when everyone has space to move, invent, produce with energy and enthusiasm. With family and friends, we know how it feels to have unreasonable demands placed on us, to be boxed in by the expectations of those nearest to us. But then, there are times when we feel accepted as who we are (or forgiven for who we are not), what at times a spouse or a child or a friend gives us the space both to be and to become.

Question Description

With the help of the options provided, match the following phrases so as to convey the sense they represent in the passage as closely as possible

- | | |
|---|--|
| (i) space as a vague, poetic metaphor | (a) representconstraining working space |
| (ii) a green and open field | (b)is akin to space both to be and to become |
| (iii) too many deadlines and competitions | (c)capture everyday experiences |
| (iv) emotion ofacceptance and enthusiasm | (d)show theabsence of feeling of space |
| | (e) indicates soothing and expansive space |

A

(i)-(c);(ii)-(e);(iii)-(a);(iv)-(b)

B

(i)-(d);(ii)-(e);(iii)-(a);(iv)-(b)

C

(i)-(c);(ii)-(b);(iii)-(d);(iv)-(e)

D

(i)-(c);(ii)-(b);(iii)-(d);(iv)-(e)

E

None of the above

Correct Answer

A

Marks

1

7

Comprehension

Answer following questions on the basis of the passage below.

To teach is to create a space in which obedience to truth is practised. Space may sound like a vague, poetic metaphor until we realise that it describes experiences of everyday life. We know what it means to be in a green and open field. We know what it means on a crowded rush hour bus. These experiences of physical space have parallels in our relationships with others. On our job we know what it is to be pressed and crowded, our working space diminished by the urgency of deadlines and competitiveness of colleagues. But there are times when deadlines disappear and colleagues co-operate, when everyone has space to move, invent, produce with energy and enthusiasm. With family and friends, we know how it feels to have unreasonable demands placed on us, to be boxed in by the expectations of those nearest to us. But then, there are times when we feel accepted as who we are (or forgiven for who we are not), what at times a spouse or a child or a friend gives us the space both to be and to become.

Question Description

In the passage, “space” is precisely defined as -----

A

a vague, poetic metaphor

B

a vague sounding metaphor for life

C

descriptive of everyday experiences

D

physical, mental and emotional states

E

None of the above

Correct Answer

C

Marks

1

8

Comprehension

Answer following questions on the basis of the passage below.

To teach is to create a space in which obedience to truth is practised. Space may sound like a vague, poetic metaphor until we realise that it describes experiences of everyday life. We know what it means to be in a green and open field. We know what it means on a crowded rush hour bus. These experiences of physical space have parallels in our relationships with others. On our job we know what it is to be pressed and crowded, our working space diminished by the urgency of deadlines and competitiveness of colleagues. But there are times when deadlines disappear and colleagues co-operate, when everyone has space to move, invent, produce with energy and enthusiasm. With family and friends, we know how it feels to have unreasonable demands placed on us, to be boxed in by the expectations of those nearest to us. But then, there are times when we feel accepted as who we are (or forgiven for who we are not), what at times a spouse or a child or a friend gives us the space both to be and to become.

Question Description

By using the metaphors of “crowded, rush hour bus” as indicating physical space, the passage tries to throw up a parallel with

A

constrictive office space

B

demanding emotional space

C

diminishing working space

D

being boxed in by expectations

E

None of the above

Correct Answer

C

Marks

1

9

Comprehension

Answer following questions on the basis of the passage below.

To teach is to create a space in which obedience to truth is practised. Space may sound like a vague, poetic metaphor until we realise that it describes experiences of everyday life. We know what it means to be in a green and open field. We know what it means on a crowded rush hour bus. These experiences of physical space have parallels in our relationships with others. On our job we know what it is to be pressed and crowded, our working space diminished by the urgency of deadlines and competitiveness of colleagues. But there are times when deadlines disappear and colleagues co-operate, when everyone has space to move, invent, produce with energy and enthusiasm. With family and friends, we know how it feels to have unreasonable demands placed on us, to be boxed in by the expectations of those nearest to us. But then, there are times when we feel accepted as who we are (or forgiven for who we are not), what at times a spouse or a child or a friend gives us the space both to be and to become.

Question Description

The use of phrases like, “unreasonable demands” or “boxed in by expectations”, or “being accepted” or “forgiven for being what we are”, in the passage

A

favourable and unfavourable relationships

B

the emotional space of an individual

C

mental turmoil followed by peace

D

the struggle to find calmness after strife

E

None of the above

Correct Answer

B

Marks

1

10

Comprehension

Answer following questions on the basis of the passage below.

To teach is to create a space in which obedience to truth is practised. Space may sound like a vague, poetic metaphor until we realise that it describes experiences of everyday life. We know what it means to be in a green and open field. We know what it means on a crowded rush hour bus. These experiences of physical space have parallels in our relationships with others. On our job we know what it is to be pressed and crowded, our working space diminished by the urgency of deadlines and competitiveness of colleagues. But there are times when deadlines disappear and colleagues co-operate, when everyone has space to move, invent, produce with energy and enthusiasm. With family and friends, we know how it feels to have unreasonable demands placed on us, to be boxed in by the expectations of those nearest to us. But then, there are times when we feel accepted as who we are (or forgiven for who we are not), what at times a spouse or a child or a friend gives us the space both to be and to become.

Question Description

“To teach is to create a space in which obedience to truth is practised”.

Select from the options given, the one that is closest to the sense of the above statement.

A Teaching is the physical, mental and emotional preparation for everyday experiences

B Teaching gives rise to a physical and emotional readiness to face the truth of life.

C Teaching makes one aware of the physical and emotional dimensions of everyday life.

D Teaching is the practical preparation to face the reality of everyday experiences of life.

E None of the above

Correct Answer

D

Marks

1

11

Question Description

In the question, a number series is given. Only one number is wrong in series. You have to find out the wrong number
2, 8, 32, 148, 765, 4626, 32431

A

765

B

148

C

8

D

32

E

None of the above

Correct Answer

D

Marks

1

12

Question Description

In the question below is given a statement followed by two courses of action numbered I and II. You have to assume everything in the statement to be true and on the basis of the information given in the statement, decide which of the suggested courses of action logically follow(s) for pursuing.

Statement: Most of those who study in premier engineering colleges in India migrate to developed nations for better prospects in their professional pursuits.

Courses of Action:

- I. All the students joining these colleges should be asked to sign a bond at the time of admission to the effect that they will remain in India at least for ten years after they complete education.
- II. All those students who desire to settle in the developed nations should be asked to pay entire cost of their education which the government subsidises.

A

Only I follows

B

Only II follows

C

Either I or II follows

D

Neither I nor II follows

E

None of the above

Correct Answer

B

Marks

1

13

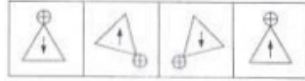
Question Description	Embellishing the Truth occurs when a person adds fictitious details or exaggerates facts or true stories. Which situation below is the best example of Embellishing the Truth?
A	Isabel goes to the theater, and the next day, she tells her co-workers she thought the play was excellent.
B	The realtor describes the house, which is eleven blocks away from the ocean, as prime waterfront property.
C	During the job interview, Fred, who has been teaching elementary school for ten years, describes himself as a very experienced teacher.
D	The basketball coach says it is likely that only the most talented players will get a college scholarship.
E	None of the above
Correct Answer	B
Marks	1

14

Question Description

In each item, there are two sets of figures; first four figures named Problem figures and next four figures named Answer figures indicated as (a), (b), (c) and (d). The problem figures follow a particular sequence. In accordance with the same, which one of the four answer figures should appear as the fifth figure?

Problem figures:



Answer figures:



(a)

(b)

(c)

(d)

A

a

B

b

C

c

D

d

E

None of the above

Correct Answer

C

Marks

1

15

Question Description

Fill the missing number or letter in the given series

ay ,bz , cw , dx ,__

A

gu

B

ev

C

fv

D

eu

E

None of the above

Correct Answer

D

Marks

1

16

Question Description**A****B****C****D****E**

None of the above

Correct Answer

A

Marks

1

17

Question Description	Oar is to rowboat as foot is to
A	Running.
B	Sneaker.
C	Skateboard.
D	Jumping
E	None of the above
Correct Answer	C
Marks	1

18

Question Description

Three teams X,Y and Z of four students each are to be formed for a college quiz. The twelve available students are P,Q,R,S and T from Science stream, B,C and D from Arts stream and J,K,L and M from commerce stream, P,R,S, B and M are boys and the rest are girls. Each team must have at least one student from each stream and at least one boy. P is in team X.

If L and M are in team X and J, R and S are in team Z, then which of the following is not in team Y?

A

K

B

T

C

C

D

Q

E

None of the above

Correct Answer

C

Marks

1

19	Question Description	39, 79, 394, 789, ?
	A	2149
	B	3542
	C	2862
	D	3944
	E	None of the above
	Correct Answer	D
	Marks	1

20	Question Description	The tank-full petrol in Arun's motor-cycle lasts for 10 days. If he starts using 25% more every day, how many days will the tank-full petrol last?
	A	5
	B	6
	C	7
	D	8
	E	None of the above
	Correct Answer	D
	Marks	1

21	Question Description	If a meaningful English word has to be formed using 1st, 3rd, 5th and 8th letters of the word (each letter to be used once only) “SOUVENIR” then which of the following will be third letter of such word? If more than one such words can be formed then mark ‘M’ as your answer and if no meaningful English word can be formed then mark “P” as your answer.
	A	E
	B	S
	C	R
	D	M
	E	None of the above
	Correct Answer	D
	Marks	1

22	Question Description	Which of the following is the third letter of the meaningful English word which can be formed using (each letter once) first, third, fourth, sixth, eighth and ninth letters of “ASTRONAUT”?
	A	T
	B	U
	C	R
	D	N
	E	None of the above
	Correct Answer	B
	Marks	1

23

Question Description	25 45 95 185 375 ?
A	745
B	755
C	635
D	645
E	None of the above
Correct Answer	A
Marks	1

24

Question Description

In the question below are given three statements followed by three conclusions numbered I, II and III. You have to take the given statements to be true even if they seem to be at variance from commonly known facts. Read all the conclusions and then decide which of the given conclusions logically follows from the given statements disregarding commonly known facts.

Statements:

Some walls are doors.

Some doors are cots.

Some cots are chairs.

Conclusions:

I. Some chairs are doors.

II. Some cots are walls.

III. No chair is door.

A Only II follows

B Only III follows

C Only either I or III follows

D Only I follows

E None of the above

Correct Answer C

Marks 1

25

Question Description

Fill the blank in the middle of the series or end of the series.
DEF, DEF2, DE2F2, _____, D2E2F3

A

DEF3

B

D3EF3

C

D2E3F

D

D2E2F2

E

None of the above

Correct Answer

D

Marks

1

26

Question Description

One day I left my home at 7 : 00 AM and assumed that if I run at uniform speed then I will reach my school at 12 : 00 AM. If my brother left the school for home at 8 : 00 AM with his uniform speed then at what time will he meet me?

Statement I : The uniform speed of my brother is 14 km per hour.

Statement II : He can reach home at 11:30 AM.

A

The data in statements I alone is sufficient to answer the question, while the data in statement II alone is not sufficient to answer the question.

B

The data in statements II alone is sufficient to answer the question, while the data in statement I alone is not sufficient to answer the question.

C

Either Statement I or Statement II alone is sufficient to answer the question.

D

Neither statement I nor statement II is sufficient to answer the questions.

E

None of the above

Correct Answer**B****Marks****1**

27

Question Description	A driver of a auto rickshaw sees a lorry 60 meters ahead of him. After 30 seconds the lorry is 90 meters behind. If the speed of the auto rickshaw is 38 kmph, then what is the speed of the lorry?
A	23 kmph
B	25 kmph
C	20 kmph
D	18 kmph
E	None of the above
Correct Answer	C
Marks	1

28

Question Description	MAD : JXA :: RUN : ?
A	OSQ
B	PRJ
C	UXQ
D	ORK
E	None of the above
Correct Answer	D
Marks	1

29

Question Description

Salman was travelling on one side of the Yamuna express way with a constant speed of 120 kmph in his car. Govinda was travelling with a constant speed of 80 kmph in the opposite direction. When they crossed each other, Salman decided to take a U-turn and meet him. But before taking a U turn, Salman had to travel for another 3 minutes. How long will it take for Salman to meet Govinda? [Assume time taken by Salman to take U turn is negligible]

A

29 minutes

B

28 minutes

C

30 minutes

D

33 minutes

E

None of the above

Correct Answer

E

Marks

1

30

Question Description

A train started from point A at a speed of 60 km/hr and after 2 hours another train of same length started from A at a speed of 80 km/hr in the same direction as the first one. After how much time the second train will meet the first train?

A

5 hours

B

3 hours

C

6 hours

D

8 hours

E

None of the above

Correct Answer

C

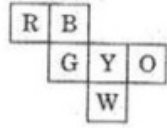
Marks

1

31

Question Description

Six squares are coloured, front and back, red(R), blue(B), yellow (Y), green (G), white (W), orange (O) and are hinged together as shown in the figure given below. If they were folded to form a cube what would be the face opposite to white face?

**A**

R

B

G

C

B

D

O

E

None of the above

Correct Answer

C

Marks

1

Question Description

Read both the statements/events and decide which of the following options depicts the relationship between these two statements/events

Statement (A): A disease called conjunctivitis (also called Madras eye) prevailed in the state of Andhra Pradesh where one in every five people were affected.

Statement (B): A large number of people from Madras migrated to Andhra Pradesh.

A

if statement (A) is the cause and statement (B) is its effect.

B

if statement (B) is the cause and statement (A) is its effect.

C

if both the statements (A) and (B) are independent causes.

D

if both the statements (A) and (B) are effects of independent causes.

E

None of the above

Correct Answer

D

Marks

1

33

Question Description

Amit, Anil and Ajit ride from home to their common office with speeds in the ratio 5 : 4 : 3. If in total they take 94 minutes (sum of the individual time taken) to cover the individual distance(which is same for all), then find the time taken by 'Anil' to cover his distance.

A

30 min

B

48 min

C

24 min

D

40 min

E

None of the above

Correct Answer

A

Marks

1

34

Question Description

If second, fifth, seventh and ninth letters of the given word are changed to their second next letter as per alphabet series then all the letters are arranged as per alphabetical order within the letter, then how many letters in english alphabet series are there between the fourth letter from left end and sixth letter from right end?

PROPHYLACTIC

A

3

B

4

C

6

D

5

E

None of the above

Correct Answer

D

Marks

1

35

Question Description

In the question below given a statement followed by two Conclusion numbered I and II. Decide which of the suggested option follow(s).

Statement: A large majority of the work force in India is unorganized. Most of them earn either the minimum or uncertain wages while others are engaged in sundry jobs.

Conclusions: I. The workers in the organized sector get better facilities and stay longer in their jobs.

II. Some workers in the unorganized sector of the work force have a regular and fixed income.

A if only conclusion I Follows

B if only conclusion II Follows

C if either I or II follows

D if neither I nor II follows

E None of the above

Correct Answer B

Marks 1

36

Question Description

Read both the statements/events and decide which of the following options depicts the relationship between these two statements/events

Statement (A): An earthquake of magnitude 8.2 rocked the islands of Maldives.

Statement (B): A devastating Tsunami struck the coastal belt of Maldives.

A

if statement (A) is the cause and statement (B) is its effect.

B

if statement (B) is the cause and statement (A) is its effect.

C

if both the statements (A) and (B) are independent causes.

D

if both the statements (A) and (B) are effects of independent causes.

E

None of the above

Correct Answer

A

Marks

1

37

Question Description

The lengths of trains A and B are in the ratio 2:3. Which of them takes less time to cross the same platform?

Statement I : The time taken by train A to cross train B when they are moving in opposite directions is half the time taken by it to cross train B, when moving in the same direction.

Statement II : The ratio of the length of train B to that of the platform is 4 : 3.

A

If the data in statement I alone is sufficient to answer the question, while the data in statement II alone is not sufficient to answer the question

B

If the data in statement II alone is sufficient to answer the question, while the data in statement I alone is not sufficient to answer the question

C

If the data either in statement I alone or in statement II alone is sufficient to answer the question

D

If the data in both statements I and II together are necessary to answer the question

E

None of the above

Correct Answer**A****Marks****1**

38

Question Description

During the summer vacation Ankit went to a summer camp where he took part in hiking, swimming and boating. This summer, he is looking forward to a music camp where he hopes to sing, dance and learn to play the guitar.

Based on the above information four conclusions as given below, have been made. Which one of these logically follows from the information given above?

A

Ankit's parents want him to play guitar.

B

Ankit prefers music to outdoor activities.

C

Ankit goes to some type of camp every summer.

D

Ankit likes to sing and dance

E

None of the above

Correct Answer

D

Marks

1

39

Question Description	13 24 92 546 4360 ?
A	43600
B	44100
C	43580
D	43590
E	None of the above
Correct Answer	D
Marks	1

40

Question Description

Here are some words translated from an artificial language.

Lelibroon means yellow hat

Plekafroti means flower garden

Froti mix means garden salad

Which word could mean “yellow flower”?

A

Lelifroti

B

Lelipleka

C

Plekabroon

D

Frotibroon

E

None of the above

Correct Answer

B

Marks

1

41

Question Description

Only six roads A, B, C, P, Q and R connect a military camp to the rest of the country. Only one out of A, P, and R are open at any one time. If B is closed so is Q. Only one of A & B is open during storms. P is closed during floods. In the context, which one of the following statements is correct?

A

Under normal conditions only three roads are open.

B

During storms at least one road is open.

C

During floods only three roads are open

D

During calamities all roads are closed

E

None of the above

Correct Answer

B

Marks

1

42

Question Description

In the question below is given a statement followed by two courses of action numbered I and II. You have to assume everything in the statement to be true and on the basis of the information given in the statement, decide which of the suggested courses of action logically follow(s) for pursuing.

Statement: Four districts in State A have been experiencing severe drought for the last three years resulting into exodus of people from these districts.

Courses of Action:

- I. The government should immediately start food for work programme in the district to put a halt to the exodus.
- II. The government should make sincere efforts to provide drinking/potable water to these districts

A

Only II follows

B

Either I or II follows

C

Neither I nor II follows

D

Both I and II follow

E

None of the above

Correct Answer

D

Marks

1

43

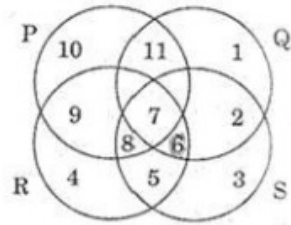
Question Description

Find missing Number

28	5	2	46
35	8	5	?
22	?	7	112

A 135,6**B** 126,4**C** 124,8**D** 135,5**E** None of the above**Correct Answer** A**Marks** 1

44

Question Description

In the above figure, circle P represents hardworking people, circle Q represents intelligent people, Circle R represents truthful people and circle S represents honest people. Which region represents the people who are intelligent, honest and truthful but not hardworking?

A	6
B	7
C	8
D	11
E	None of the above
Correct Answer	A
Marks	1

45

Question Description**A****B****C****D****E**

None of the above

Correct Answer

D

Marks

1

46

Question Description

Three truck drivers, Amar, Akbar and Anthony stop at a road side eating joint. Amar orders 10 rotis, 4 plates of tadka, and a cup of tea. Akbar orders 7 rotis, 3 plates of tadka, and a cup of tea. Amar pays Rs. 80 for the meal and Akbar pays Rs.60. Meanwhile, Anthony orders 5 rotis, 5 plates of tadka and 5 cups of tea. How much (in Rs.) will Anthony pay?

A

75

B

80

C

95

D

100

E

None of the above

Correct Answer

D

Marks

1

47

Question Description

Read the definition and all four choices carefully, and find the answer that provides the best example of the given definition. Answer the question *solely* on the basis of the definition given.

Violating an Apartment Lease occurs when a tenant does something prohibited by the legally binding document that he or she has signed with a landlord. Which situation below is the best example of Violating an Apartment Lease?

A

Tim has decided to move to another city, so he calls his landlord to tell him that he is not interested in renewing his lease when it expires next month.

B

Valerie recently lost her job and, for the last three months, has neglected to pay her landlord the monthly rent they agreed upon in writing when she moved into her apartment eight months ago.

C

Mark writes a letter to his landlord that lists numerous complaints about the apartment he has agreed to rent for two years.

D

Leslie thinks that her landlord is neglecting the building in which she rents an apartment. She calls her attorney to ask for advice.

E

None of the above

Correct Answer

B

Marks

1

48	Question Description	Which word does NOT belong with the others?
	A	Branch
	B	Dirt
	C	Leaf
	D	Root
	E	None of the above
	Correct Answer	B
	Marks	1

49	Question Description	7, 9, 12, 48, ?, 890
	A	128
	B	190
	C	172
	D	168
	E	None of the above
	Correct Answer	C
	Marks	1

50

Question Description Fill the missing number or letter in the given series
___, ayw, gec, mki, sqo

A awx

B usq

C prs

D lmn

E None of the above

Correct Answer B

Marks 1

51

Question Description PULSATE : THROB::?

A Walk : run

B Tired : sleep

C Examine : scrutinize

D Ballet : dancer

E None of the above

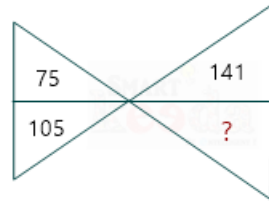
Correct Answer C

Marks 1

52

Question Description

Find missing number

**A**

75°

B

39°

C

45°

D

120°

E

None of the above

Correct Answer

B

Marks

1

53

Question Description	47 58 71 79 95 ?
A	108
B	107
C	105
D	109
E	None of the above
Correct Answer	D
Marks	1

54

Question Description	Fill the missing number or letter in the given series JAK KBL LCM MDN _____
A	QEP
B	NEO
C	MEN
D	PFQ
E	None of the above
Correct Answer	B
Marks	1

55

Question Description

In the question below is given a statement followed by two courses of action numbered I and II. You have to assume everything in the statement to be true and on the basis of the information given in the statement, decide which of the suggested courses of action logically follow(s) for pursuing.

Statement: Since its launching in 1981, Vayudoot has so far accumulated losses amounting to Rs 153 crore.

Courses of Action:

- I. Vayudoot should be directed to reduce wasteful expenditure and to increase passenger fare.
- II. An amount of about Rs 300 crore should be provided to Vayudoot to make the airliner economically viable.

A

Only I follows

B

Only II follows

C

Either I or II follows

D

Neither I nor II follows

E

None of the above

Correct Answer

A

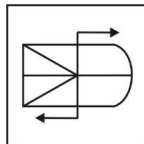
Marks

1

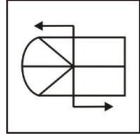
56

Question Description

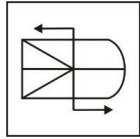
Find the mirror image



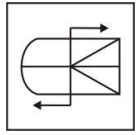
A



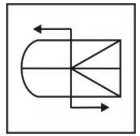
B



C



D



E

None of the above

Correct Answer

D

Marks

1

57	Question Description	A software engineer has the capability of thinking 100 lines of code in five minutes and can type 100 lines of code in 10 minutes. He takes a break for five minutes after every ten minutes. How many lines of codes will he complete typing after an hour?
	A	250
	B	220
	C	150
	D	200
	E	None of the above
	Correct Answer	A
	Marks	1

58	Question Description	Careful is to cautious as boastful is to
	A	Arrogant.
	B	Humble.
	C	Joyful.
	D	Suspicious
	E	None of the above
	Correct Answer	A
	Marks	1

59

Comprehension

Answer questions on the basis of the information below.

Some groups want to outlaw burning the flag. They say that people have fought and died for the flag and that citizens of the United States ought to respect that. But I say that respect cannot be legislated. Also, most citizens who have served in the military did not fight for the flag, they fought for what the flag represents. Among the things the flag represents is freedom of speech, which includes, I believe, the right for a citizen to express displeasure with the government by burning the flag in protest.

Question Description

Which of the following best expresses the main point of the passage?

A

Only veterans care about the flag-burning issue.

B

Flag burning almost never happens, so outlawing it is a waste of time.

C

Flag burning will be a very important issue in the next election.

D

To outlaw flag burning is to outlaw what the flag represents.

E

None of the above

Correct Answer

D

Marks

1

60

Comprehension

Answer questions on the basis of the information below.

Some groups want to outlaw burning the flag. They say that people have fought and died for the flag and that citizens of the United States ought to respect that. But I say that respect cannot be legislated. Also, most citizens who have served in the military did not fight for the flag, they fought for what the flag represents. Among the things the flag represents is freedom of speech, which includes, I believe, the right for a citizen to express displeasure with the government by burning the flag in protest.

Question Description

Which of the following, if true, would weaken the speaker's argument?

A

An action is not considered a part of freedom of speech.

B

People who burn the flag usually commit other crimes as well.

C

The flag was not recognized by the government until 1812.

D

State flags are almost never burned.

E

None of the above

Correct Answer

A

Marks

1