


Computer Based Examination System

Exported On *	2022/01/29 15:02:52
Title *	Question Paper Answer Key
OES Exam *	GPSC0820211408 / Repeat Pre Screening of Junior Scale Officer / Completed / 2022-01-29

1	<div> <div>Question Description</div> <div>Find the number of triangles in the given figure?</div> <div>  </div> </div>
A	24
B	22
C	28
D	26
E	None of the above
Correct Answer	C
Marks	1

Question Description	Study the following Statements carefully and choose which of the assumptions is implicit. Choose your answer accordingly: Statement : If degrees are delinked from jobs, boys will think twice before joining college Assumptions: I. Boys join college education to get jobs II. A degree is of no use in getting a job.
A	if only assumption I is implicit
B	if only assumption II is implicit
C	if either I or II is implicit
D	if neither I nor II is implicit
E	None of the above
Correct Answer	A
Marks	1

3

Question Description

Which Answer Figure will complete the pattern in the figure?

**A****B****C****D****E**

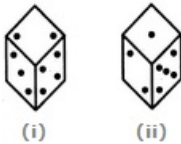
None of the above

Correct Answer

D

Marks

1

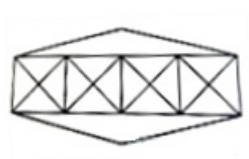
Question Description	<p>A dice is rolled twice and the two positions are shown in the figure below. What is the number of dots at the bottom face when the dice is in position (i)?</p> <div><p>(i) (ii)</p></div>
A	1
B	5
C	6
D	Cannot be determined
E	None of the above
Correct Answer	C
Marks	1

Question Description	Find the missing Numbers <table><tr><td>36</td><td>6</td><td>9</td><td>15</td></tr><tr><td>88</td><td>11</td><td>9</td><td>?</td></tr><tr><td>120</td><td>?</td><td>6</td><td>18</td></tr></table>	36	6	9	15	88	11	9	?	120	?	6	18
36	6	9	15										
88	11	9	?										
120	?	6	18										
A	54,41												
B	17,82												
C	17,10												
D	96,13												
E	None of the above												
Correct Answer	C												
Marks	1												

6

Question Description

Count the number of triangles and squares in the given figure.



A

36 triangles, 7 Squares

B

38 triangles, 9 Squares

C

40 triangles, 7 Squares

D

42 triangles, 9 Squares

E

None of the above

Correct Answer

C

Marks

1

Question Description	<p>Each question given below consists of a statement, followed by three or four arguments numbered I, II, III and IV. You have to decide which of the arguments is/are 'strong' arguments) and which is/are 'weak' arguments) and accordingly choose your answer from the alternatives given below each question.</p> <p>Statement: Should trade unions be banned completely?</p> <p>Arguments:</p> <p>I. Yes. Workers can concentrate on production.</p> <p>II. No. This is the only way through which employees can put their demands before the management.</p> <p>III. Yes. Employees get their illegal demands fulfilled through these unions.</p> <p>IV. No. Trade unions are not banned in other economically advanced countries.</p>
A	Only I is strong
B	Only II is strong
C	Only I and II are strong
D	Only I, II and III are strong
E	None of the above
Correct Answer	B
Marks	1

8

Question Description	Two trains of equal length are running on parallel lines in the same direction at 46 km/hr and 36 km/hr. The faster train passes the slower train in 36 seconds. The length of each train is:
A	50 m
B	72 m
C	80 m
D	82 m
E	None of the above
Correct Answer	A
Marks	1

9

Question Description	January 1, 2007 was Monday. What day of the week lies on Jan. 1, 2008?
A	Monday
B	Tuesday
C	Wednesday
D	Sunday
E	None of the above
Correct Answer	B
Marks	1

10

Question Description

In each of the following questions, the relationship between different elements is shown in the statements followed by two conclusions. Find the conclusion which logically follows.

Statements:

$R \leq G > W = Y$; $P < F \leq G = Q$; $Y > E$

Conclusions:

I) $R < F$

II) $Q > E$

A

If only conclusion I follow.

B

If only conclusion II is true.

C

If either conclusion I or II is true.

D

If neither conclusion I nor II is true.

E

None of the above

Correct Answer**B****Marks****1**

11

Question Description

In each of the following questions, the relationship between different elements is shown in the statements followed by two conclusions. Find the conclusion which logically follows.

Statements:

$$X < W \leq F = Q \geq P = T \geq O \geq S = R$$

Conclusions:

I) $Q > R$

II) $Q = R$

A

If only conclusion I is true.

B

If only conclusion II is true.

C

If either conclusion I or II is true.

D

If neither conclusion I nor II is true.

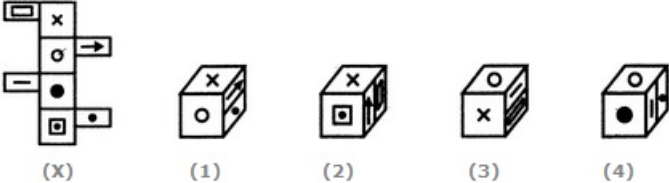
E

None of the above

Correct Answer**C****Marks****1**

12

Question Description	<p>There is a certain relationship between two given pair on both side of '::' . One word is given on another side of '::' while another word is to be found from the given options, having the same relation with this word as the words of the given pair . Choose the correct word from the following options.</p> <p>Tectonics : Building : : Taxidermy : ?</p>
A	Classification
B	Conserving
C	Stuffing
D	Collecting
E	None of the above
Correct Answer	C
Marks	1

Question Description	<p>Choose the box that is similar to the box formed from the given sheet of paper (X).</p> <div data-bbox="544 172 1211 355"><p>The net (X) consists of six squares arranged in a cross shape. The top square has an 'x', the middle square has an 'o', and the bottom square has a square with a dot. The left square has a horizontal line, and the right square has a horizontal line with an arrow pointing right. The four options are: (1) a cube with 'x' on top, 'o' on front, and a dot on right; (2) a cube with 'x' on top, a square with a dot on front, and a vertical line on right; (3) a cube with 'o' on top, 'x' on front, and a vertical line on right; (4) a cube with 'o' on top, a dot on front, and a vertical line on right.</p></div>
A	1 and 2 only
B	1 and 3 only
C	3 and 4 only
D	1, 2, 3 and 4
E	None of the above
Correct Answer	B
Marks	1

14

Question Description

If first and third digits of each number are interchanged and then numbers are arranged in ascending order then which of the following will be the second number from right end?

2764 7983 9862 5493 6278

A

2764

B

9862

C

7983

D

5493

E

None of the above

Correct Answer

C

Marks

1

15

Question Description

Select the related word/letters/number from the given alternatives.

225: 12: 435:?

A

12

B

20

C

25

D

19

E

None of the above

Correct Answer

D

Marks

1

16

Question Description

Garv is the son of Sashi. Heer is the father of Manu. Garv is married to Devi. Garv and Manu are siblings. Prem is the brother of Devi. Sashi has only one son. Riya is the son of Garv. Prem is the father of Kaka. Joshi is the daughter of Manu. Prem has no daughters.

How is Heer related to Prem?

A

Father

B

Mother in law

C

Mother

D

Aunt

E

None of the above

Correct Answer

E

Marks

1

17

Question Description

Find out the wrong number in the given sequence of numbers.

46080, 3840, 384, 48, 24, 2, 1

A

1

B

2

C

24

D

384

E

None of the above

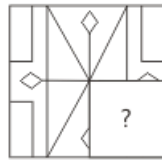
Correct Answer

C

Marks

1

18 **Question Description** Which Answer Figure will complete the pattern in the figure?



A



B



C



D



E

None of the above

Correct Answer

C

Marks

1

19

Question Description

Directions: Read the following information carefully and answer the questions given beside.

Certain numbers of persons sit around a square table such that nobody sits at the corner and not more than 4 persons sit around each of the sides. Information about few persons is given and all the persons face towards the centre. Only 4 persons sit between P and T, who is on the immediate left of Q. S is sixth to the right of U. R is at a gap of two persons from U, who is adjacent to T. Only one person sits between R and V, who is third to the right of S.

What is the position of R with respect to Q?

A

Immediate right

B

Fifth to the right

C

Fifth to the left

D

Immediate left

E

None of the above

Correct Answer

C

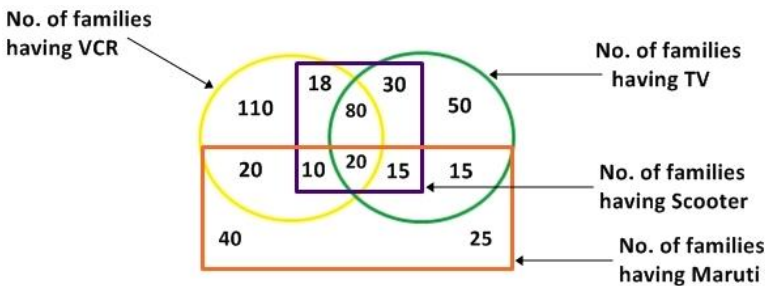
Marks

1

20	<table> <tr> <td>Question Description</td><td>A wheel that has 6 cogs is meshed with a larger wheel of 14 cogs. When the smaller wheel has made 21 revolutions, then the number of revolutions mad by the larger wheel is:</td></tr> <tr> <td>A</td><td>4</td></tr> <tr> <td>B</td><td>9</td></tr> <tr> <td>C</td><td>12</td></tr> <tr> <td>D</td><td>49</td></tr> <tr> <td>E</td><td>None of the above</td></tr> <tr> <td>Correct Answer</td><td>B</td></tr> <tr> <td>Marks</td><td>1</td></tr> </table>	Question Description	A wheel that has 6 cogs is meshed with a larger wheel of 14 cogs. When the smaller wheel has made 21 revolutions, then the number of revolutions mad by the larger wheel is:	A	4	B	9	C	12	D	49	E	None of the above	Correct Answer	B	Marks	1
Question Description	A wheel that has 6 cogs is meshed with a larger wheel of 14 cogs. When the smaller wheel has made 21 revolutions, then the number of revolutions mad by the larger wheel is:																
A	4																
B	9																
C	12																
D	49																
E	None of the above																
Correct Answer	B																
Marks	1																
21	<table> <tr> <td>Question Description</td><td>Select the related word/letters/number from the given alternatives 343 : 678 :: 512 : ?</td></tr> <tr> <td>A</td><td>1024</td></tr> <tr> <td>B</td><td>1536</td></tr> <tr> <td>C</td><td>1000</td></tr> <tr> <td>D</td><td>1016</td></tr> <tr> <td>E</td><td>None of the above</td></tr> <tr> <td>Correct Answer</td><td>D</td></tr> <tr> <td>Marks</td><td>1</td></tr> </table>	Question Description	Select the related word/letters/number from the given alternatives 343 : 678 :: 512 : ?	A	1024	B	1536	C	1000	D	1016	E	None of the above	Correct Answer	D	Marks	1
Question Description	Select the related word/letters/number from the given alternatives 343 : 678 :: 512 : ?																
A	1024																
B	1536																
C	1000																
D	1016																
E	None of the above																
Correct Answer	D																
Marks	1																
22																	

Question Description

Study the diagram given below and answer the questions.



Find out the number of families which have TV and scooter both but have neither VCR nor Maruti.

- A 30
- B 15
- C 50
- D 8
- E None of the above

Correct Answer A


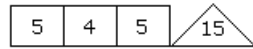
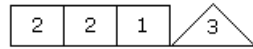
Marks 1

23	Question Description	A train 800 metres long is running at a speed of 78 km/hr. If it crosses a tunnel in 1 minute, then the length of the tunnel (in meters) is:
	A	130
	B	360
	C	500
	D	540
	E	None of the above
	Correct Answer	C
	Marks	1
24	Question Description	Four of the following five are related to each other in terms of English alphabet series and thus form a group. Which of the following does not fit to that group?
	A	FUX
	B	PKN
	C	HSV
	D	MNP
	E	None of the above
	Correct Answer	D
	Marks	1

25

Question Description

Which one will replace the question mark ?

**A**

11

B

19

C

15

D

22

E

None of the above

Correct Answer

D

Marks

1

26

Question Description	If RADAR is coded as "*?*?#" and DOOR is coded as "?%>%#" then DAM will be coded as
A	?# ⁰ %
B	*#?
C	*#/ ₂
D	??#
E	None of the above
Correct Answer	C
Marks	1

27

Question Description	How many such pairs of letters are there in the 'CONDITIONAL' each of which has as many letters between them in the word as in the English Alphabet?
A	One
B	Two
C	Three
D	Four
E	None of the above
Correct Answer	E
Marks	1

28

Question Description

There is a certain relationship between two given pair on both side of '::' . One word is given on another side of '::' while another word is to be found from the given options, having the same relation with this word as the words of the given pair . Choose the correct word from the following options.

taxonomy : Classification : : Pedology : ?

A

Nature

B

Farming

C

Soil

D

Mountain

E

None of the above

Correct Answer

C

Marks

1

29

Question Description

If a meaningful English word has to be formed using second, fifth, sixth and ninth letters of the word PREMATURE then which is the third letter of the new word. If no such word can be formed then mark 'X' as your answer and if more than one word can be formed then mark 'Y' as your answer.

A

A

B

X

C

T

D

Y

E

None of the above

Correct Answer

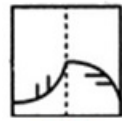
D

Marks

1

Question Description

Find out from amongst the four alternatives as to how the pattern would appear when the transparent sheet is folded at the dotted line in figure (X).



(X)



(1)



(2)



(3)



(4)

A

1

B

2

C

3

D

4

E

None of the above

Correct Answer

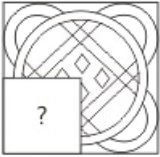




D

Marks

1

31

Question Description	Identify the number on the place of “?” 4, 20, 840, ?, 6720
A	5880
B	5040
C	6720
D	7560
E	None of the above
Correct Answer	C
Marks	1

32	Question Description <p>Which Answer Figure will complete the pattern in the figure?</p> 
A	
B	
C	
D	
E	None of the above
Correct Answer	C
Marks	1

33	Question Description	At 3:40, the hour hand and the minute hand of a clock form an angle of:
	A	120°
	B	125°
	C	130°
	D	135°
	E	None of the above
	Correct Answer	C
	Marks	1

34	Question Description	<p>Study the following Statements carefully and choose which of the assumptions is implicit. Choose your answer accordingly:</p> <p>Statement : “If you are a mechanical engineer, we want you as our supervisor.” – an advertisement by company X</p> <p>Assumptions:</p> <p>I. Mechanical engineers are expected to be better performers by company X</p> <p>II. The company X needs supervisors</p>
	A	if only assumption I is implicit
	B	if only assumption II is implicit
	C	if either I or II is implicit
	D	if neither I nor II is implicit
	E	None of the above
	Correct Answer	B
	Marks	1

35

Question Description

Choose the pair that best represents a similar relationship to the one expressed in the original pair of words.
PASTORAL : RURAL

A

metropolitan : urban

B

harvest : autumn

C

agrarian : benevolent

D

sleepy : nocturnal

E

None of the above

Correct Answer

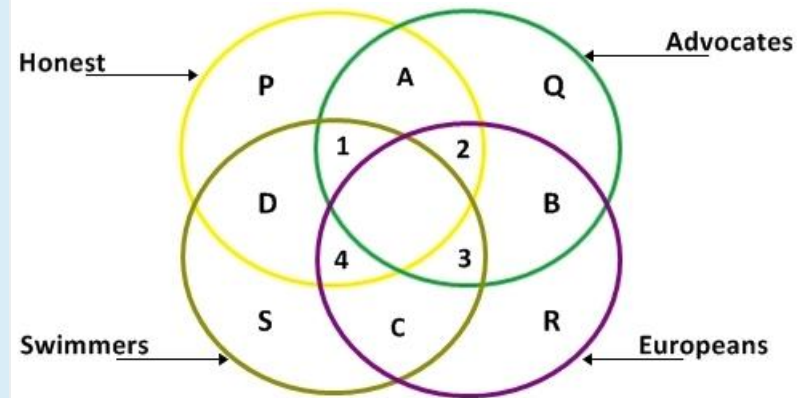
A

Marks

1

Question Description

What does the area marked 1 in the figure given below represent?

**A**

All honest European swimmers

B

All honest advocates who are swimmers

C

All no-European advocates who are honest swimmers

D

All non-Europeans who are honest swimmers

E

None of the above

Correct Answer

C

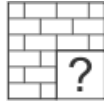
Marks

1

37

Question Description

Which Answer Figure will complete the pattern in the figure?

**A****B****C****D****E**

None of the above

Correct Answer

C

Marks

1

38

Question Description

Select the related word/letters/number from the given alternatives

Burglar : House : : Pirate : ?

A

Sea

B

Ship

C

Sailor

D

Crew

E

None of the above

Correct Answer

B

Marks

1

Question Description

If + stands for division; \times stands for addition; $-$ stands for multiplication; \div stands for subtraction, which of the following is correct?

1. $15 \div 5 \times 2 - 6 + 3 = 28$

2. $15 \times 5 + 2 - 6 \div 3 = 56.5$

3. $15 + 5 - 2 \div 6 \times 3 = 3$

4. $15 - 5 + 2 \times 6 \div 3 = 41$

A

3

B

1

C

2

D

4

E

None of the above

Correct Answer

A

Marks

1

40

Question Description

What will be the last letter of the meaningful 4-letter English word formed using 1st and 5th letter of “Barber” along with 2nd and 6th letter of “Parking” such that each letter to be used once? If more than one such word can be formed then mark ‘X’ as your answer, if no such word can be formed then mark “Y” as your answer.

A

Y

B

E

C

A

D

X

E

None of the above

Correct Answer

D

Marks

1

41

Question Description

Below mentioned is to be answered using the statement I and statement II. You have to determine the statement(s) which is/are sufficient to answer the question. Mark the option accordingly.

If the code for 'pain' is 20 then find the code for "loss pain no gain"?

Statement I : "loss money gain nothing" is coded as 25 78 41 63 and "nothing loss no profit" is coded as 58 41 36 25.

Statement II : "gain weight no health" is coded as 21 78 36 14 and "no exercise health loss" is coded as 57 36 14 25.

A

If the data in statement I alone is sufficient to answer the question

B

If the data in statement II alone is sufficient to answer the question

C

If the data in statements I and II is necessary to answer the question

D

If the data in statements I and II is not sufficient to answer the question

E

None of the above

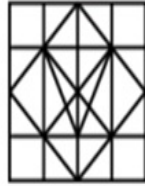
Correct Answer**C****Marks****1**

42	Question Description Select the related word/letters/number from the given alternatives $25 : 175 :: 32 : ?$
A	150
B	170
C	162
D	160
E	None of the above
Correct Answer	D
Marks	1

43	Question Description Select the option figure in which the given figure is embedded (rotation is NOT allowed). <div data-bbox="566 818 730 1005"> </div>
A	<div data-bbox="551 1219 573 1244">A</div> <div data-bbox="593 1139 743 1327"> </div>

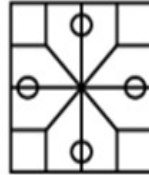
B

B



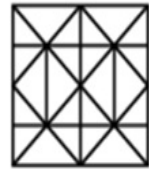
C

C



D

D



E

None of the above

Correct Answer

B

Marks

1

Question Description

Directions: An alphanumeric machine accepts letters as input and delivers output in form of numbers through different steps. Each step is obtained by applying an operation different from the previous step. Each step gives output taking input from the previous step. Below mentioned is an illustration of the same.

Input : upsurge beyond difficulties attribute their findings life shower

Step 1: 9 4 25 16 4 4 4 4

Step 2: 13 8 29 20

Step 3: 16 12

Step 4: 12

Step 4 is the last step of the output.

Find the different steps of output for the following input.

Input : small expectations large results transform normal into abnormal

If '2' is added to the last number from left end in step 2, then what would be its impact on the final output?

A

Final output will increase by 12

B

Final output will increase by 10

C

Final output will increase by 14

D

Final output will increase by 13

E

None of the above

Correct Answer

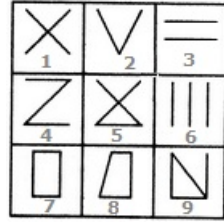
C

Marks

1

Question Description

Group the given figures into three classes using each figure only once.

**A**

1,2,3 ; 4,5,6 ; 7,8,9

B

1,3,5 ; 2,4,6 ; 7,8,9

C

1,5,9 ; 3,6,2 ; 4,7,8

D

1,9,7 ; 2,8,5 ; 3,4,6

E

None of the above

Correct Answer

A

Marks

1

46

Question Description

Find the statement that must be true according to the given information.

Ten new television shows appeared during the month of September. Five of the shows were sitcoms, three were hour-long dramas, and two were news-magazine shows. By January, only seven of these new shows were still on the air. Five of the shows that remained were sitcoms.

A

Only one of the news-magazine shows remained on the air.

B

Only one of the hour-long dramas remained on the air.

C

At least one of the shows that was cancelled was an hour-long drama.

D

Television viewers prefer sitcoms over hour-long dramas.

E

None of the above

Correct Answer

C

Marks

1

Comprehension

Read the passage and answer the questions below:

Americans, I am aware, believe that they will produce Literature and Art, as they produce coal and steel and oil, by the judicious application of intelligence and capital; but here they do themselves injustice. The qualities that are making them masters of the world, unfit them for slighter and less serious pursuits. The future is for them the kingdom of elevators, of telephones, of motor-cars, of flying machines. Let them not idly hark back, misled by the effete traditions, to the old European dream of the kingdom of heaven ...let them say, “for Europe, Letters and Art”, let America rule the world by syndicates and trusts!” For such is her true destiny, and that she conceives it to be such, is evidenced by the determination with which she has suppressed all irrelevant activities. Every kind of disinterested intellectual operation she has severely repudiated.

Question Description

The essence of American character, as suggested in the passage, lies in the phrase

A

disinterested intellectual operation

B

production of coal and steel and oil

C

desire for mastery over the world

D

sane use of intelligence and wealth

E

None of the above

Correct Answer

D

Marks

1

Comprehension

Read the passage and answer the questions below:

Americans, I am aware, believe that they will produce Literature and Art, as they produce coal and steel and oil, by the judicious application of intelligence and capital; but here they do themselves injustice. The qualities that are making them masters of the world, unfit them for slighter and less serious pursuits. The future is for them the kingdom of elevators, of telephones, of motor-cars, of flying machines. Let them not idly hark back, misled by the effete traditions, to the old European dream of the kingdom of heaven ...let them say, “for Europe, Letters and Art”, let America rule the world by syndicates and trusts!” For such is her true destiny, and that she conceives it to be such, is evidenced by the determination with which she has suppressed all irrelevant activities. Every kind of disinterested intellectual operation she has severely repudiated.

Question Description

The statement “For such is her true destiny”, indicates that America is inclined to strive for

A

the kingdom of elevators

B

political power over the world

C

slighter and less serious pursuits

D

the kingdom of heaven

E

None of the above

Correct Answer

B

Marks

1

Comprehension

Read the passage and answer the questions below:

Americans, I am aware, believe that they will produce Literature and Art, as they produce coal and steel and oil, by the judicious application of intelligence and capital; but here they do themselves injustice. The qualities that are making them masters of the world, unfit them for slighter and less serious pursuits. The future is for them the kingdom of elevators, of telephones, of motor-cars, of flying machines. Let them not idly hark back, misled by the effete traditions, to the old European dream of the kingdom of heaven ...let them say, “for Europe, Letters and Art”, let America rule the world by syndicates and trusts!” For such is her true destiny, and that she conceives it to be such, is evidenced by the determination with which she has suppressed all irrelevant activities. Every kind of disinterested intellectual operation she has severely repudiated.

Question Description

The following is not a synonym for “effete”

A

affected

B

effective

C

enfeebled

D

effeminate

E

None of the above

Correct Answer

B

Marks

1

Comprehension

Read the passage and answer the questions below:

Americans, I am aware, believe that they will produce Literature and Art, as they produce coal and steel and oil, by the judicious application of intelligence and capital; but here they do themselves injustice. The qualities that are making them masters of the world, unfit them for slighter and less serious pursuits. The future is for them the kingdom of elevators, of telephones, of motor-cars, of flying machines. Let them not idly hark back, misled by the effete traditions, to the old European dream of the kingdom of heaven ...let them say, “for Europe, Letters and Art”, let America rule the world by syndicates and trusts!” For such is her true destiny, and that she conceives it to be such, is evidenced by the determination with which she has suppressed all irrelevant activities. Every kind of disinterested intellectual operation she has severely repudiated.

Question Description

The statement about “producing Literature and Art as coal, steel and oil” implies

A

a materialistic approach to creative work

B

a realistic view of literature and art

C

a prudent view of cultural activity

D

a keen interest in refinement of spirit

E

None of the above

Correct Answer

A

Marks

1

Comprehension

Read the passage and answer the questions below:

Americans, I am aware, believe that they will produce Literature and Art, as they produce coal and steel and oil, by the judicious application of intelligence and capital; but here they do themselves injustice. The qualities that are making them masters of the world, unfit them for slighter and less serious pursuits. The future is for them the kingdom of elevators, of telephones, of motor-cars, of flying machines. Let them not idly hark back, misled by the effete traditions, to the old European dream of the kingdom of heaven ...let them say, “for Europe, Letters and Art”, let America rule the world by syndicates and trusts!” For such is her true destiny, and that she conceives it to be such, is evidenced by the determination with which she has suppressed all irrelevant activities. Every kind of disinterested intellectual operation she has severely repudiated.

Question Description

Select the option closest in meaning to the phrase “severely repudiated” in the passage

A

refused to fulfil

B

refused to discharge

C

rejected outright

D

refused to accept

E

None of the above

Correct Answer

C

Marks

1

52

Comprehension

Read the passage and answer the questions below:

The entire industrial world, this technological wonder-world, has been built because we have been watching helplessly, hypnotized by its brilliance, unable to turn our eyes away from the life of luxury it promises, or to make the small change in our daily habits which might mitigate its destructiveness. This knowledge without character--extraordinary technical expertise-- without the will or wisdom to use it well. In Gandhi's perspective, it is up to individuals like you and me to reverse this situation. Environmental abuse and exploitation are not necessary evils"—no evil is necessary. In fact, Gandhi went so far as to say that evil in itself is not even real; it exists only as long as we support it.

Question Description

Find a word from the passage which means “alleviate”

A

extraordinary

B

hypnotised

C

support

D

mitigate

E

None of the above

Correct Answer

D

Marks

1

53

Comprehension	<p>Read the passage and answer the questions below:</p> <p>The entire industrial world, this technological wonder-world, has been built because we have been watching helplessly, hypnotized by its brilliance, unable to turn our eyes away from the life of luxury it promises, or to make the small change in our daily habits which might mitigate its destructiveness. This knowledge without character--extraordinary technical expertise-- without the will or wisdom to use it well. In Gandhi's perspective, it is up to individuals like you and me to reverse this situation. Environmental abuse and exploitation are not necessary evils"—no evil is necessary. In fact, Gandhi went so far as to say that evil in itself is not even real; it exists only as long as we support it.</p>
Question Description	“This knowledge without character--extraordinary technical expertise-- without the will or wisdom to use it well”. This statement implies that the extraordinary technological know-how lacks
A	users with good intentions and wisdom
B	technology that is useful to life
C	ordinary use of technology
D	willpower and prudence
E	None of the above
Correct Answer	A
Marks	1

Comprehension

Read the passage and answer the questions below:

The entire industrial world, this technological wonder-world, has been built because we have been watching helplessly, hypnotized by its brilliance, unable to turn our eyes away from the life of luxury it promises, or to make the small change in our daily habits which might mitigate its destructiveness. This knowledge without character--extraordinary technical expertise-- without the will or wisdom to use it well. In Gandhi's perspective, it is up to individuals like you and me to reverse this situation. Environmental abuse and exploitation are not necessary evils"—no evil is necessary. In fact, Gandhi went so far as to say that evil in itself is not even real; it exists only as long as we support it.

Question Description

The phrase “individuals like you and me” refers to

A

everyone who is reading this

B

only the author and his reader

C

ordinary sensitive citizens

D

wise and powerful persons

E

None of the above

Correct Answer

C

Marks

1

Comprehension

Read the passage and answer the questions below:

The entire industrial world, this technological wonder-world, has been built because we have been watching helplessly, hypnotized by its brilliance, unable to turn our eyes away from the life of luxury it promises, or to make the small change in our daily habits which might mitigate its destructiveness. This knowledge without character--extraordinary technical expertise-- without the will or wisdom to use it well. In Gandhi's perspective, it is up to individuals like you and me to reverse this situation. Environmental abuse and exploitation are not necessary evils"—no evil is necessary. In fact, Gandhi went so far as to say that evil in itself is not even real; it exists only as long as we support it.

Question Description

The following phrase or word in the passage best describes the “situation” that needs to be reversed.

A

use of technology for environmental abuse

B

Gandhi's perspective

C

exploitation

D

technological wonder-

E

None of the above

Correct Answer

A

Marks

1

Comprehension

Read the passage and answer the questions below:

The entire industrial world, this technological wonder-world, has been built because we have been watching helplessly, hypnotized by its brilliance, unable to turn our eyes away from the life of luxury it promises, or to make the small change in our daily habits which might mitigate its destructiveness. This knowledge without character--extraordinary technical expertise-- without the will or wisdom to use it well. In Gandhi's perspective, it is up to individuals like you and me to reverse this situation. Environmental abuse and exploitation are not necessary evils"—no evil is necessary. In fact, Gandhi went so far as to say that evil in itself is not even real; it exists only as long as we support it.

Question Description

“ Environmental abuse and exploitation are not necessary evils-no evil is necessary”. This statement contains two premises about “environmental abuse and exploitation”. Select them from the following options

A

they are avoidable; all evils are unavoidable

B

they are unavoidable; all evils are avoidable

C

they are avoidable; all evils are not unavoidable

D

they are unavoidable; all evils are unavoidable

E

None of the above

Correct Answer

C

Marks

1

57

Comprehension

Study the following information carefully and answer the below questions.

A Family of three generation consists of eight members- E, H, I, M, O, T, S, and Y. There are three married couples. S is the only daughter of M who is the mother-in-law of T. O is the daughter of H who is the spouse of T. E is the daughter of I. Y is the father-in-law of I. S is married.

Question Description

Who among the following person is the granddaughter of Y?

A

E

B

O

C

H

D

E and O

E

None of the above

Correct Answer

D

Marks

1

58

Comprehension

Study the following information carefully and answer the below questions.

A Family of three generation consists of eight members- E, H, I, M, O, T, S, and Y. There are three married couples. S is the only daughter of M who is the mother-in-law of T. O is the daughter of H who is the spouse of T. E is the daughter of I. Y is the father-in-law of I. S is married.

Question Description

Four of the following are alike in a certain way. Who among the following one does not belong to the group?

A

M

B

S

C

T

D

I

E

None of the above

Correct Answer

D

Marks

1

Comprehension

Study the following information carefully and answer the questions given beside:

In a certain code language,

'There is Park' is written as 'nup yex ace'

'People in Schools' is written as 'ybx cvu vcl'

'Several Schools Are Present There' is written as 'cal del vuc ybx yex'

'Park is Dark' is written as 'nup cig ace'

'Dark People in Several Park' is written as 'vcl cal nup cig cvu'

Question Description

Which of the following could be the code for 'all present park there'?

A

del yex clu nup

B

cuv aec pun exy

C

clu exy gic pun

D

uvc pun exy led

E

None of the above

Correct Answer

A

Marks

1

Comprehension

Study the following information carefully and answer the questions given beside:

In a certain code language,

'There is Park' is written as 'nup yex ace'

'People in Schools' is written as 'ybx cvu vcl'

'Several Schools Are Present There' is written as 'cal del vuc ybx yex'

'Park is Dark' is written as 'nup cig ace'

'Dark People in Several Park' is written as 'vcl cal nup cig cvu'

Question Description

What could be the code 'cig ybx gkl vcl' stand for in the given code language?

A

Dark In People There Park

B

Near People Dark Schools

C

Schools Present There Park

D

People Set Park Schools

E

None of the above

Correct Answer

B

Marks

1