

Computer Based Examination System

Exported On *	2022/02/20 16:59:57
Title *	Question Paper Answer Key
OES Exam *	GPSC10202110 / Planning Officer / Completed / 2022-02-20

1	Question Description	Which of the following statement is True?
	A	Capital expenditure benefits accrued only in the current period.
	B	Pay-back period method selects a project based on the profitability before the pay-off period.
	C	Internal Rate of Return to take into account time value of money.
	D	Net Present Value method uses Cost of Debt as a Discounting
	E	None of the above
	Correct Answer	C
	Marks	1

2	Question Description	In IRR, the cash inflows are assumed to be reinvested in the project at:
	A	Internal Rate of Return
	B	Marginal Cost of Capital
	C	Cost of Capital
	D	Risk-adjusted Rate.
	E	None of the above
	Correct Answer	A
	Marks	1

3	Question Description	The “Operation Twist” often seen in news is related to which of the following?
	A	Buy and sale of government securities
	B	Foreign trade
	C	Lines of Credit
	D	Buying foreign assets
	E	None of the above
	Correct Answer	A
	Marks	1

4	Question Description	A monopolist sells goods in two clearly separable markets – A and B. Which of the following statements is/are true if the demand is more elastic in market A than in market B and the monopolist is aiming at profit maximization?
	A	Price charged for the good in market A must be less than the price charged in market B.
	B	Monopolist must be selling an output where the marginal cost is at its minimum.
	C	The extra revenue obtained from selling an additional unit in market A must be more than received from selling an additional unit in market B.
	D	Both (a) and (c) above.
	E	None of the above
	Correct Answer	A
	Marks	1
5	Question Description	Suppose the Indian economy is facing a situation of recession and you being a public expenditure expert what would you advice the Government of India to bring the economy back to equilibrium?
	A	Reduce Government spending and increase the taxes
	B	Reduce Government spending and decrease the taxes
	C	Increase Government spending and decrease the taxes
	D	Increase Government spending and increase the taxes
	E	None of the above
	Correct Answer	C
	Marks	1

6

Question Description

With reference to WaterCredit', consider the following statements:

1. It puts microfinance tools to work in the water and sanitation sector.
2. It is a global initiative launched under the aegis of the World Health Organization and the World Bank.
3. It aims to enable the poor people to meet their water needs without depending on subsidies.

Which of the statements given above are correct?

A

1 and 2 Only

B

2 and 3 Only

C

1 and 3 Only

D

1, 2 and 3

E

None of the above

Correct Answer

C

Marks

1

7

Question Description	Which of the following industry was De- reserved in 1993?
A	Atomic Energy
B	Atopic Minerals
C	Mining of Copper and Zinc
D	Railways
E	None of the above
Correct Answer	C
Marks	1

8

Question Description	Which of the following is correct about the Revenue Neutral Rate?
A	Tax policy adopted by the government such that the revenue receipt of the government is equal to the revenue expenditure.
B	Tax policy that allows the government to still receive the same amount of money despite changes in tax laws.
C	Tax policy that allows the government to make income tax more equitable.
D	Tax policy adopted by the government such that capital receipt of government compensates its revenue expenditure
E	None of the above
Correct Answer	B
Marks	1

9	Question Description	For a project, benefit cost ratio is equal to one, then the:
	A	IRR>1
	B	IRR<Discount Rate
	C	IRR > Discount Rate
	D	IRR=Discount Rate.
	E	None of the above
	Correct Answer	D
	Marks	1

10	Question Description	Which of the following statements is false?
	A	Capital expenditure benefits accrue over a long term
	B	Net present value uses cost of capital as the discounting rate
	C	Internal rate of return considers the time value of money
	D	If the benefit-cost ratio is equal to one, the equity shareholders can be said to have earned more than expected return
	E	None of the above
	Correct Answer	D
	Marks	1

11

Question Description

Consider the following statements:

1. The Fiscal Responsibility and Budget Management Act set the target to limit the fiscal deficit upto 3% of the GDP by 2021.
2. The NK Singh committee was formed to create a roadmap for fiscal consolidation for the Center and the States.

Which of the statements given above is/are correct?

A

1 only

B

2 only

C

Both 1 and 2

D

Neither 1 nor 2

E

None of the above

Correct Answer

C

Marks

1

12

Question Description	The government is considering placing a tax on cigarettes to raise revenue to finance health-care projects. The demand for cigarettes is price inelastic. Which of the following statements is TRUE?
A	This is a very good way to raise revenue both in the short term and in the long term because there are no substitutes for cigarettes.
B	The tax on cigarettes will raise substantial revenue in the short term, but may not raise as much revenue as anticipated in the long term because the demand for cigarettes is likely to become more elastic over time.
C	Either this tax will not raise much revenue in the short term or the long term since demand is price inelastic.
D	No tax revenue can be raised in this way because sellers of cigarettes will just lower their price by the amount of the tax and therefore the price of cigarettes to consumers will not change.
E	None of the above
Correct Answer	B
Marks	1

13	Question Description	Unemployment that is caused by a mismatch between the composition of the labour force (in terms of skills, occupation, industries, or geographic location) and the make-up of the demand for labour is called-----.
	A	Real wage unemployment
	B	Deficient-demand unemployment
	C	Frictional unemployment
	D	Structural unemployment
	E	None of the above
	Correct Answer	D
	Marks	1

14	Question Description	Model Grievance Procedure is given in
	A	Industrial Disputes Act
	B	Employee State Insurance Act
	C	Industrial Employment (Standing Orders) Act
	D	Code of Discipline
	E	None of the above
	Correct Answer	D
	Marks	1

15

Question Description	The abolition of Child Labor was introduced first time through
A	Factories Act, 1947
B	Factories Act, 1883
C	Trade Dispute Act, 1929
D	Payment of wages Act, 1936
E	None of the above
Correct Answer	B
Marks	1

16	Question Description	Which of the following is/are type/types of External Benchmark Rates? 1. Repo and Reverse repo rate 2. Government of India 3-Months Treasury bill yield published by the FinancialBenchmarks India Private Ltd (FBIL). 3. Government of India 6-Months Treasury bill yield published by the FinancialBenchmarks India Private Ltd (FBIL). Select the correct answer using the code given below:
	A	1 only
	B	1 and 2 only
	C	2 and 3 only
	D	1, 2 and 3
	E	None of the above
	Correct Answer	C
	Marks	1

17	Question Description	Which of the following projects will you select that will give the maximum advantage to the firm?
	A	Project 'A' which has a positive internal rate of return
	B	Project 'B' which has a Net Benefit Cost Ratio less than one but more than zero
	C	Project 'C' which has a cost of capital higher than the internal rate of return
	D	Project 'D' which has the highest annual capital charge compared to all other projects
	E	None of the above
	Correct Answer	B
	Marks	1

18	Question Description	Open-market purchases of government bonds by Reserve Bank of India will have the tendency to:
	A	Increase interest rates, the money supply, and national income
	B	Increase interest rates and the money supply, but decrease national income.
	C	Increase interest rates, but decrease the money supply and national income
	D	Decrease interest rates, but increase the money supply and national income.
	E	None of the above
	Correct Answer	D
	Marks	1
19	Question Description	Eliminating Government set restrictions or barriers is known as
	A	Trade Protection
	B	Favourable trade
	C	Trade Restriction
	D	Liberalisation
	E	None of the above
	Correct Answer	D
	Marks	1

20

Question Description	Price discrimination is possible when
A	Various sub markets are having same price elasticity of demand
B	A high price is charged in the relatively price elastic sub market and a low price in the relatively inelastic sub market
C	The same price is charged in both the relatively price elastic and the relatively price inelastic sub markets
D	A high price is charged in the relatively price inelastic sub market and a low price in the relatively price elastic sub market
E	None of the above
Correct Answer	D
Marks	1

21

Question Description

In the long-run equilibrium, a perfectly competitive firm produces the output at which price is equal to

- I. Short run average cost.
- II. Long run average cost.
- III. Short run marginal cost.

A

Only (I) above

B

Only (II) above

C

Both (I) and (II) above

D

All (I), (II) and (III) above

E

None of the above

Correct Answer

D

Marks

1

22	Question Description	Which of the following schools of thought advocated that nominal GDP in the short run and prices in the long run are determined by growth of money?
	A	Classical economist
	B	Keynesian
	C	Neo classical economist
	D	Monetarist
	E	None of the above
	Correct Answer	D
	Marks	1
23	Question Description	Which of the following statements is incorrect?
	A	An indifference curve must be downward-sloping to the right.
	B	Convexity of a curve implies that the slope of the curve diminishes as one moves from left to right
	C	The income elasticity for inferior goods to a consumer is negative
	D	The total effect of a change in the price of a good on its quantity demanded is called the price effect.
	E	None of the above
	Correct Answer	C
	Marks	1

24	Question Description	When an oligopolistic individually chooses its level of production to maximize its profits, it charges a price that is -----.
	A	More than the price charged by either monopoly or a competitive market.
	B	Less than the price charged by either monopoly or a competitive market
	C	More than the price charged by a monopoly and less than the price charged by a competitive market.
	D	Less than the price charged by a monopoly and more than the price charged by a competitive market.
	E	None of the above
	Correct Answer	D
	Marks	1

25	Question Description	When one firm in the health drinks market started advertising campaign that stressed the nutritional value of its health drinks, all the remaining ten health drink majors started similar advertising campaigns to withhold their customers. It suggests that the health drinks industry is a/an
	A	Oligopoly
	B	Oligopsony
	C	Monopolistically competitive market
	D	Perfectly competitive market
	E	None of the above
	Correct Answer	A
	Marks	1

26	Question Description	According to the Keynesian theory beyond full employment level of output,
	A	The aggregate supply will increase with increase in aggregate demand and prices remain unchanged
	B	The aggregate supply will decrease with increase in aggregate demand and prices remain unchanged
	C	The aggregate supply will increase with increase in aggregate demand and prices also increase
	D	The aggregate supply will decrease with increase in aggregate demand and prices increase
	E	None of the above
	Correct Answer	C
	Marks	1

27	Question Description	Which one of the following cities has emerged as the 'electronic capital' of India?
	A	Delhi
	B	Ahmedabad
	C	Bangalore
	D	Hyderabad
	E	None of the above
	Correct Answer	C
	Marks	1

28

Question Description	Who is an 'Indentured Laborer'?
A	A slave from Africa
B	A labor bought in a market
C	An unpaid laborer
D	A bonded laborer , working to pay off his passage to a new country
E	None of the above
Correct Answer	A
Marks	1

29

Question Description

Which of the following is/are type (s) of Government Securities (G-Sec)?

1. Treasury Bills (T-bills)
2. Cash Management Bills (CMBs)
3. Dated Government Securities

Select the correct answer using the code given below:

A

1 only

B

1 and 2 only

C

2 and 3 only

D

1, 2 and 3

E

None of the above

Correct Answer

D

Marks

1

30

Question Description	Dumping in international trade means
A	The sale of goods by foreign supplier in another country at price above than the price at which the supplier sells in domestic market.
B	The sale of goods by foreign supplier in another country at price below than the price at which the supplier sells in domestic market.
C	The sale of goods by domestic supplier in another country at price above than the price at which the supplier sells in domestic market.
D	Distributing the goods in international markets without any consideration.
E	None of the above
Correct Answer	B
Marks	1

31

Comprehension

Read the passage below and answer the following:

Direct taxes can be graded, not only by taking into account the size of a person's income, but also considering the use he makes of it and making suitable allowances. The proportion of taxable income may be reduced by allowances for expenses incurred on behalf of children of school age or dependent relatives or for money spent on insurance. Such a system of grading is not possible in case of indirect taxation. When you go to the cinema, the man who takes your money does not ask you how much you earn, calculate the tax incurred and charge you accordingly. So that indirect taxation is the same for all sectors of community, rich and poor alike. A drawback is that the burden of taxation on small incomes is increased, since the obvious things to tax are those for which there is a constant pronounced demand so as to make them almost necessities.

Question Description

The levels of direct tax are decided on the basis of

A

allowances for expenses on children, dependents and insurance

B

differing expenditure of the rich and poor

C

the size of a person's income

D

actual income, its use and appropriate allowances

E

None of the above

Correct Answer

D

Marks

1

32

Comprehension

Read the passage below and answer the following:

Direct taxes can be graded, not only by taking into account the size of a person's income, but also considering the use he makes of it and making suitable allowances. The proportion of taxable income may be reduced by allowances for expenses incurred on behalf of children of school age or dependent relatives or for money spent on insurance. Such a system of grading is not possible in case of indirect taxation. When you go to the cinema, the man who takes your money does not ask you how much you earn, calculate the tax incurred and charge you accordingly. So that indirect taxation is the same for all sectors of community, rich and poor alike. A drawback is that the burden of taxation on small incomes is increased, since the obvious things to tax are those for which there is a constant pronounced demand so as to make them almost necessities.

Question Description

Read the following statements and arrange them in the sequence of the points in the above passage:

(i)A shortcoming of indirect taxation is that it does not permit grading. (ii)This happens in case of direct taxes.(iii)In calculating the tax, the proportion of taxable income may be reduced by allowances for various permissible expenses incurred. (iv) This type of tax is same across the board.

A (iii); (ii); (i); (iv)

B (i); (ii); (iii); (iv)

C (iii); (iv); (ii); (i)

D (i); (iv); (ii); (iii)

E None of the above

Correct Answer A

Marks 1

Comprehension	<p>Read the passage below and answer the following:</p> <p>Direct taxes can be graded, not only by taking into account the size of a person's income, but also considering the use he makes of it and making suitable allowances. The proportion of taxable income may be reduced by allowances for expenses incurred on behalf of children of school age or dependent relatives or for money spent on insurance. Such a system of grading is not possible in case of indirect taxation. When you go to the cinema, the man who takes your money does not ask you how much you earn, calculate the tax incurred and charge you accordingly. So that indirect taxation is the same for all sectors of community, rich and poor alike. A drawback is that the burden of taxation on small incomes is increased, since the obvious things to tax are those for which there is a constant pronounced demand so as to make them almost necessities.</p>
Question Description	<p>Read the following statements and state whether they are true or false:</p> <p>(i) In case of indirect taxation obvious taxable things are most in demand and are necessarily consumed by all, including the small income groups.</p> <p>(ii) The direct outcome of this is that same tax gets charged from every level of taxpayer including those belonging to the small income groups.</p>
A	(i) is true; (ii) is false
B	both (i) and (ii) are true
C	(ii) is true; (i) is false
D	both (i) and (ii) are false
E	None of the above
Correct Answer	B
Marks	1

34 **Comprehension** Read the passage below and answer the following:

Direct taxes can be graded, not only by taking into account the size of a person's income, but also considering the use he makes of it and making suitable allowances. The proportion of taxable income may be reduced by allowances for expenses incurred on behalf of children of school age or dependent relatives or for money spent on insurance. Such a system of grading is not possible in case of indirect taxation. When you go to the cinema, the man who takes your money does not ask you how much you earn, calculate the tax incurred and charge you accordingly. So that indirect taxation is the same for all sectors of community, rich and poor alike. A drawback is that the burden of taxation on small incomes is increased, since the obvious things to tax are those for which there is a constant pronounced demand so as to make them almost necessities.

Question Description From the alternatives provided below, identify the one which best signifies "taking into account" or "consider" in the sense they are used in the passage

A be thoughtful

B pay scant attention

C think carefully about

D look without paying attention

E None of the above

Correct Answer C

Marks 1

35

Comprehension

Read the passage below and answer the following:

Direct taxes can be graded, not only by taking into account the size of a person's income, but also considering the use he makes of it and making suitable allowances. The proportion of taxable income may be reduced by allowances for expenses incurred on behalf of children of school age or dependent relatives or for money spent on insurance. Such a system of grading is not possible in case of indirect taxation. When you go to the cinema, the man who takes your money does not ask you how much you earn, calculate the tax incurred and charge you accordingly. So that indirect taxation is the same for all sectors of community, rich and poor alike. A drawback is that the burden of taxation on small incomes is increased, since the obvious things to tax are those for which there is a constant pronounced demand so as to make them almost necessities.

Question Description

Identify the word or phrase from following options that means 'pronounced', as used in the passage.

A

uttered in words

B

constantly uttered

C

obviously spoken

D

very noticeable

E

None of the above

Correct Answer

D

Marks

1

36

Comprehension

Read the following passage and answer the question below:

Time, as we know it, is a very recent invention. The modern time-sense is hardly older than the United States. It is a by-product of industrialism- a sort of psychological analogue of synthetic perfumes and aniline dyes. Time is our tyrant. We are chronically aware of the moving minute hand, even of the moving second hand. We have to be ... Our consciousness of the smallest units of time is now acute. To us for example, the moment 8.17 a.m. means something – something very important, if it happens to be the starting time of our daily train. To our ancestors, such an odd eccentric instant was without significance- did not even exist. In inventing the locomotive, Watt and Stephen were part inventors of time.

Question Description

In the passage, the phrase, “a very recent invention”, implies that time has been

A

a new phenomenon of our time

B

manufactured in this age

C

perceived in a certain way in this age

D

scientifically studied of late

E

None of the above

Correct Answer

C

Marks

1

37

Comprehension	<p>Read the following passage and answer the question below:</p> <p>Time, as we know it, is a very recent invention. The modern time-sense is hardly older than the United States. It is a by-product of industrialism- a sort of psychological analogue of synthetic perfumes and aniline dyes. Time is our tyrant. We are chronically aware of the moving minute hand, even of the moving second hand. We have to be ... Our consciousness of the smallest units of time is now acute. To us for example, the moment 8.17 a.m. means something – something very important, if it happens to be the starting time of our daily train. To our ancestors, such an odd eccentric instant was without significance- did not even exist. In inventing the locomotive, Watt and Stephen were part inventors of time.</p>
Question Description	<p>Read the following statements and arrange them in a chronological sequence, with the help of the passage:</p> <p>(i) So much so, time has become our task master as it controls our day-to-day activities in life.</p> <p>(ii) Interestingly, the present sense of time has been a fallout of industrialism which, on a mental level, is comparable to the manufacture of synthetic perfumes.</p> <p>(iii) But our own time sense is now chronologically acute and minute.</p> <p>(iv) To our predecessors, time in the sense of a stray, unconventional moment was insignificant, or even non-existent.</p>
A	(iii); (ii); (iv); (i)
B	(iv); (iii); (i); (ii)
C	(i); (ii); (iii); (iv)
D	(iv); (ii); (i); (iii)
E	None of the above
Correct Answer	B
Marks	1

Comprehension

Read the following passage and answer the question below:

Time, as we know it, is a very recent invention. The modern time-sense is hardly older than the United States. It is a by-product of industrialism- a sort of psychological analogue of synthetic perfumes and aniline dyes. Time is our tyrant. We are chronically aware of the moving minute hand, even of the moving second hand. We have to be ... Our consciousness of the smallest units of time is now acute. To us for example, the moment 8.17 a.m. means something – something very important, if it happens to be the starting time of our daily train. To our ancestors, such an odd eccentric instant was without significance- did not even exist. In inventing the locomotive, Watt and Stephen were part inventors of time.

Question Description

From the options provided identify the one that is synonymous to the term a “by-product”

A

incidental or secondary outcome

B

sudden major outcome

C

delayed distilled product

D

direct and intentional consequence

E

None of the above

Correct Answer

A

Marks

1

39

Comprehension

Read the following passage and answer the question below:

Time, as we know it, is a very recent invention. The modern time-sense is hardly older than the United States. It is a by-product of industrialism- a sort of psychological analogue of synthetic perfumes and aniline dyes. Time is our tyrant. We are chronically aware of the moving minute hand, even of the moving second hand. We have to be ... Our consciousness of the smallest units of time is now acute. To us for example, the moment 8.17 a.m. means something – something very important, if it happens to be the starting time of our daily train. To our ancestors, such an odd eccentric instant was without significance- did not even exist. In inventing the locomotive, Watt and Stephenson were part inventors of time.

Question Description

In the passage, the phrase “such an odd eccentric instant” refers to

A

the by-product of industrialism

B

psychological analogue

C

the smallest unit of time

D

the time 8.17 a.m. given as an example

E

None of the above

Correct Answer

D

Marks

1

40

Comprehension

Read the following passage and answer the question below:

Time, as we know it, is a very recent invention. The modern time-sense is hardly older than the United States. It is a by-product of industrialism- a sort of psychological analogue of synthetic perfumes and aniline dyes. Time is our tyrant. We are chronically aware of the moving minute hand, even of the moving second hand. We have to be ... Our consciousness of the smallest units of time is now acute. To us for example, the moment 8.17 a.m. means something – something very important, if it happens to be the starting time of our daily train. To our ancestors, such an odd eccentric instant was without significance- did not even exist. In inventing the locomotive, Watt and Stephenson were part inventors of time.

Question Description

Identify the figures of speech in the following sentence: “Time is our tyrant.”

A

personification; alliteration; antithesis

B

metaphor; alliteration; paradox

C

metaphor; personification; hyperbole

D

alliteration; paradox; antithesis

E

None of the above

Correct Answer

C

Marks

1

41	Question Description	The gas usually filled in the electric bulb is
	A	nitrogen
	B	hydrogen
	C	carbon dioxide
	D	oxygen
	E	None of the above
	Correct Answer	A
	Marks	1

42	Question Description	The Government of India has made it mandatory for the telecom companies to store international calls, satellite phone calls, conference calls and messages for a minimum period of how many years?
	A	2
	B	1
	C	3
	D	5
	E	None of the above
	Correct Answer	A
	Marks	1

43	Question Description	Which state has announced the formation of 13 new districts recently?
	A	Uttar Pradesh
	B	Andhra Pradesh
	C	Rajasthan
	D	Telangana
	E	None of the above
	Correct Answer	B
	Marks	1

44	Question Description	Indian Women's Hockey Team won which position in the Asia Cup 2022?
	A	2 nd
	B	3 rd
	C	1 st
	D	4 th
	E	None of the above
	Correct Answer	B
	Marks	1

45	Question Description	Who among the following was crowned as 'Mrs World 2022'?
	A	Shaylyn Ford
	B	Kate Schneider
	C	DebanjaliKamstra
	D	Navneet Kaur
	E	None of the above
	Correct Answer	A
	Marks	1

46	Question Description	Ashneer Grover is the co-founder of which among the following companies?
	A	BharatPe
	B	Paytm
	C	PayPal
	D	Global66
	E	None of the above
	Correct Answer	A
	Marks	1

47	Question Description	According to NITI Aayog's 1st National Multidimensional Poverty Index (MPI) 2021, which state has lowest poverty?
	A	Tamil Nadu
	B	Assam
	C	Gujarat
	D	Himachal Pradesh
	E	None of the above
	Correct Answer	E
	Marks	1

48	Question Description	Recently Tata Power Renewable Energy Limited (TPREL) has commissioned two Solar Power projects of 100 MW in which state?
	A	Gujarat
	B	Jharkhand
	C	Uttar Pradesh
	D	Andhra Pradesh
	E	None of the above
	Correct Answer	C
	Marks	1

49	Question Description	National Organ Donation Day was recently observed on which date?
	A	November 25
	B	November 26
	C	November 27
	D	November 28
	E	None of the above
	Correct Answer	C
	Marks	1

50	Question Description	Who has been crowned the Formula One World Champion 2021?
	A	Lewis Hamilton
	B	C. Sainz Jr.
	C	Max Verstappen
	D	Fernando Alonso
	E	None of the above
	Correct Answer	C
	Marks	1

51

Question Description	The age of Sitamma 10 years ago was thrice the age of Radha. 10 years hence, Sitamma's age will be twice that of Radha. What is the ratio of their present age?
A	7:3
B	3:1
C	2:1
D	1:5
E	None of the above
Correct Answer	A
Marks	1

Question Description

Directions: Read the information carefully and answer the questions given below.

In a certain code language,

'speak nicely to all' is coded as "ka cu ma he"

'all are like us' is coded as " sifo he to"

'teach us lesson nicely' is coded as " po ma fo re"

'lesson like all humans' is coded as "he re gusi"

What would be the code for 'speak to me'?

A

ma ka go

B

lo ma fo

C

re ma ku

D

ka cu lo

E

None of the above

Correct Answer

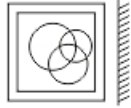
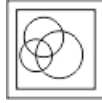
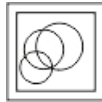
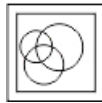
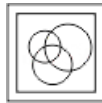
D

Marks

1

Question Description

Directions: A mirror is placed on the line MN, and then which of the Answer Figures is the right image of the given Question Figure?

**A****B****C****D****E**

None of the above

Correct Answer

C

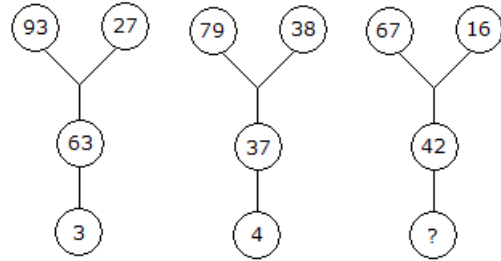
Marks

1

54

Question Description

Which one will replace the question mark ?

**A**

5

B

6

C

8

D

9

E

None of the above

Correct Answer

D

Marks

1

55

Question Description	Annihilation : Fire : : Cataclysm : ?
A	Earthquake
B	Flood
C	Emergency
D	Steam
E	None of the above
Correct Answer	B
Marks	1

56

Question Description

Rani, Supriya and Amita work on a project. If each of them is of a different efficiency. Who is the fastest worker among them?
Statement I : Rani and Supriya take 5 days to complete the project while Supriya and Amita take 10 days to complete the same project.
Statement II : Rani and Amita take $30/7$ days to complete the project.

A

If the data in statement I alone is sufficient to answer the question, while the data in statement II alone is not sufficient to answer the question

B

If the data in statement II alone is sufficient to answer the question, while the data in statement I alone is not sufficient to answer the question

C

If the data either in statement I alone or in statement II alone is sufficient to answer the question

D

If the data in both statements I and II together are necessary to answer the question

E

None of the above

Correct Answer

A


Marks

1

57

Question Description

Select a suitable figure from the four alternatives that would complete the figure matrix.



(1) (2) (3) (4)

A	1
B	2
C	3
D	4
E	None of the above
Correct Answer	B
Marks	1

58

Question Description

Study the following questions carefully and choose the right answer:

Statement: A part from the entertainment value of television, its educational value cannot be ignored.

Assumptions:

- I. People take television to be a means of entertainment only.
- II. The educational value of television is not realised properly

A if only assumption I is implicit

B if only assumption II is implicit

C if either I or II is implicit

D if both I and II are implicit

E None of the above

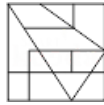
Correct Answer D

Marks 1

59

Question Description

From the given options, select a figure in which the Question Figure is hidden/embedded.

**A****B****C****D****E**

None of the above

Correct Answer

C

Marks

1

Question Description

In each question below is given a statement followed by courses of action numbered I and II. You have to assume everything in the statement to be true, then decide which of the three given suggested courses of action logically follows for pursuing.

Statement: Due to substantial reduction in fares by different airline services, large number of passengers so far travelling by upper classes in trains have switched over to airline services.

Courses of action:

I. The railways should immediately reduce the fare structure of the upper classes substantially to retain its passengers.

II. The railways should reduce the capacity of upper classes in all the trains to avoid loss.

A Only I follows

B Only II follows

C Either I or II follows

D Neither I nor II follows

E None of the above

Correct Answer A

Marks 1

61

Question Description

Two trains are moving in the opposite direction and their speeds are in the ratio of 2 : 1. If the first train crosses a standing man in 5 sec and another train crosses the same man in 8 sec, then determine the time taken by trains to cross each other.

A

6 sec

B

3 sec

C

5 sec

D

9 sec

E

None of the above

Correct Answer

A

Marks

1

62

Question Description

Study the following numbers carefully and answer the questions given below:

5836 7469 8251 6293 4172

If the digits of all the numbers are to be arranged in ascending order within the number from right to left then the numbers thus formed are to be arranged in descending order from left to right then what would be the sum of second digit of third number from left end and third digit of fourth number from right end?

A

12

B

10

C

7

D

9

E

None of the above

Correct Answer

D

Marks

1

63

Question Description

Choose the correct alternative from the given ones that will complete the series.
AD EI IN OS ?

A

UX

B

XY

C

WY

D

UY

E

None of the above

Correct Answer

A

Marks

1

Question Description

In question below given two statements followed by two conclusions numbered I and II. You have to take the given two statements to be true even if they seem to be at variance from commonly known facts. Read the conclusion and then decide which of the given conclusions logically follows from the two given statements, disregarding commonly known facts.

Statements: Some books are tables. Some tables are mirrors.

Conclusions:

- I. Some mirrors are books.
- II. No book is mirror.

A Only conclusion I follows

B Only conclusion II follows

C Either I or II follows

D Neither I nor II follows

E None of the above

Correct Answer C

Marks 1

65

Question Description

Find the odd man out.
396, 462, 572, 427, 671, 264

A

396

B

427

C

671

D

264

E

None of the above

Correct Answer

B

Marks

1

Question Description

In each question below is given a statement followed by courses of action numbered I and II. You have to assume everything in the statement to be true, then decide which of the three given suggested courses of action logically follows for pursuing.

Statement: It is necessary to adopt suitable measures to prevent repetition of bad debts by learning from the past experiences of mounting non-performing assets of banks.

Courses of action:

I. Before granting loan to customers their eligibility for loan should be evaluated strictly.

II. To ensure the payment of instalments of loan, the work, for which loan was granted, should be supervised minutely on regular basis.

A

Only I follows

B

Only II follows

C

Either I or II follows

D

Both I and II follow

E

None of the above

Correct Answer

D

Marks

1

67

Question Description

In a city, Fruit lane was to the north-west of Jewellery lane. Grocery lane was in the east of fruit lane which was towards the south of vegetable lane. Toy lane was towards the south-west of grocery lane such that it was situated towards the east of Jewellery lane. Clothes lane was 20 km towards the north of Jewellery lane, which was 4 times the distance between Jewellery lane and Toy lane. Inner circle was the mid point between Fruit lane and Grocery lane and also Jewellery lane and Clothes lane. The distance between Vegetable lane and fruit lane was half of the distance between Clothes lane and Inner circle.

Vegetable lane is in which direction with respect to the Clothes lane?

A

West

B

East

C

South-west

D

Noth-east

E

None of the above

Correct Answer

C

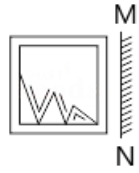
Marks

1

68

Question Description

Directions: A mirror is placed on the line MN, and then which of the Answer Figures is the right image of the given Question Figure

**A****B****C****D****E**

None of the above

Correct Answer

D

Marks

1

69

Question Description

Kindly study the following information carefully and answer the question that follows:

'B + A' means 'A is son of B'

'B x A' means 'A is father of B'

'A % B' means 'A is son-in-law of B'

'B - A' means 'A is wife of B'

'A * B' means 'B is brother of A'

'A # B' means 'B is the only sister of A'

Which two symbols will come in place of question marks in the following equation to show that E is wife of X?

$X \% P - C ? D ? E$

A

x and +

B

+ and -

C

+ and #

D

Either A or C

E

None of the above

Correct Answer

C

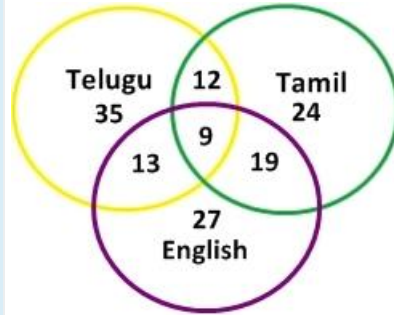
Marks

1

70

Question Description

Find out the number of all those people who can speak Tamil and Telugu?



A	3
B	59
C	21
D	112
E	None of the above
Correct Answer	C
Marks	1

71	Question Description	Today is Monday. After 61 days, it will be:
	A	Wednesday
	B	Saturday
	C	Tuesday
	D	Thursday
	E	None of the above
	Correct Answer	B
	Marks	1

72	Question Description	<p>Micky is brother in law of Akku, who has two daughters but no son. Rinku is cousin of Quki and brother of Riku. Vicky has two daughters and one son. Unni has only one son and one daughter. Micky is the only sibling of Wiku. Tinu and Sanu are daughters of Xoxo. Donu is also the member of this family. Riku is granddaughter of Akku, who is married to Wiku. Unni and Vicky are sons in law of Wiku.</p> <p>How is Wiku related to Donu?</p>
	A	Father
	B	Mother
	C	Grandfather
	D	Can't be determined
	E	None of the above
	Correct Answer	D
	Marks	1

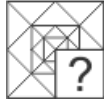
73

Question Description	Which Pair does NOT belong with the others?
A	117 : 13
B	162 : 18
C	171 : 19
D	304 : 16
E	None of the above
Correct Answer	D
Marks	1

74

Question Description

Figure will complete the pattern in the figure?

**A****B****C****D****E**

None of the above

Correct Answer

C

Marks

1

75

Question Description

Study the following questions carefully and choose the right answer:

Statement: Postal rates have been increased to meet the deficit.

Assumptions:

- I. The present rates are very low.
- II. If the rates are not increased, the deficit cannot be met.

A if only assumption I is implicit

B if only assumption II is implicit

C if either I or II is implicit

D if neither I nor II is implicit

E None of the above

Correct Answer B

Marks 1