

Computer Based Examination System

Exported On *	2023/02/20 16:03:29
Title *	Question Paper Answer Key
OES Exam *	GPSC11202201 / Mamlatdar/Jt. Mamlatdar/Vigilance Officer / Completed / 2023-02-19

1	<b>Question Description</b>	Under Sec.4 of Cigarette and Tobacco products ( prohibition of advertisement, and regulation of trade and commerce, production, supply and distribution) Act 2003, “ in a hotel having -----rooms or a restaurant having seating capacity of -----persons or more and in the airports , a separate provision of smoking area or a space may be made
	<b>A</b>	20 rooms and 30 persons
	<b>B</b>	30 rooms and 30 persons
	<b>C</b>	30 rooms and 20 persons
	<b>D</b>	20 rooms and 25 persons
	<b>E</b>	None of the above
	<b>Correct Answer</b>	B
	<b>Marks</b>	1

2

<b>Question Description</b>	Which of the following Day is called “Tillers Day” under Sec.2(23A) of the Goa Daman and Diu Agricultural Tenancy Act
<b>A</b>	20 <sup>th</sup> April 1976
<b>B</b>	30 <sup>th</sup> April 1976
<b>C</b>	20 <sup>th</sup> April 1975
<b>D</b>	30 <sup>th</sup> April 1975
<b>E</b>	None of the above
<b>Correct Answer</b>	A
<b>Marks</b>	1

3	<b>Question Description</b>	Under Sec.12 of the The Goa, Daman, and Diu Mundkars ( Protection from Eviction) Act 1975, If neither the mundkar nor any member of his family has been residing in the dwelling house for a continuous period of ----- , mundkar can be evicted from his dwelling house .
A	Six months	
B	One year	
C	Two years	
D	Three years	
E	None of the above	
<b>Correct Answer</b>	C	
<b>Marks</b>	1	
4	<b>Question Description</b>	Magistrate may dispense with personal attendance of accused under Section _____ of Cr.P.C
A	201	
B	204	
C	205	
D	200	
E	None of the above	
<b>Correct Answer</b>	C	
<b>Marks</b>	1	

5	<b>Question Description</b>	Which of the following statement is not correct with regard to the nature of liability of the landlords and tenants
	<b>A</b>	Liability to pay land revenue in respect of the land is that of the landlord
	<b>B</b>	Liability to pay irrigation cess is that of the landlord
	<b>C</b>	Liability to pay any other rate, tax, fee, cess or other charge levelled as per law is that of the tenant
	<b>D</b>	In case of Khajan and Kher lands, duties and responsibilities of carrying out maintenance, repair and conservancy of banks, bunds, rivers or other sources of irrigation are that of the tenant.
	<b>E</b>	None of the above
	<b>Correct Answer</b>	B
	<b>Marks</b>	1
6	<b>Question Description</b>	The Board of film certification under the Cinematograph Act 1952 shall consist of a chairman and ----- other members appointed by the Central Government.
	<b>A</b>	Not less than ten and not more than twenty
	<b>B</b>	Not less than twelve and not more than twenty five
	<b>C</b>	Not less than fifteen and not more than twenty five
	<b>D</b>	Not less than fifteen and not more than twenty
	<b>E</b>	None of the above
	<b>Correct Answer</b>	B
	<b>Marks</b>	1

7	<b>Question Description</b>	The affairs of each comunidade shall be managed by an managing committee chosen every ----- in the manner prescribed in the Code of Comunidade.
	<b>A</b>	One year
	<b>B</b>	Two years
	<b>C</b>	Three years
	<b>D</b>	Five years
	<b>E</b>	None of the above
	<b>Correct Answer</b>	C
	<b>Marks</b>	1

8	<b>Question Description</b>	Which of the following chapter of the Land Revenue Code deals with the powers and duties of survey officers
	<b>A</b>	Chapter II
	<b>B</b>	Chapter III
	<b>C</b>	Chapter IV
	<b>D</b>	Chapter V
	<b>E</b>	None of the above
	<b>Correct Answer</b>	D
	<b>Marks</b>	1

9	<b>Question Description</b>	What is the limitation period prescribed to hold a formal inquiry, to decide any dispute with respect to any property or right in the property which is claimed by the Government or claimed by any person against the Government, by collector or authorised officer under Goa Land Revenue Code.
	<b>A</b>	Six months
	<b>B</b>	One year
	<b>C</b>	Three years
	<b>D</b>	No time limit
	<b>E</b>	None of the above
	<b>Correct Answer</b>	D
	<b>Marks</b>	1
10	<b>Question Description</b>	The right to private property was dropped from the list of fundamental rights in the year
	<b>A</b>	1976
	<b>B</b>	1977
	<b>C</b>	1978
	<b>D</b>	1979
	<b>E</b>	None of the above
	<b>Correct Answer</b>	C
	<b>Marks</b>	1

11	<b>Question Description</b>	With regard to Disposal of Intestate Occupancies under Sec.23 of the Goa Land Revenue Code, if no claimant appears within ----- ----- , the collector may sell the right of the deceased occupant in the occupancy by an auction .
	<b>A</b>	Two years
	<b>B</b>	Three years
	<b>C</b>	One year
	<b>D</b>	Six months
	<b>E</b>	None of the above
	<b>Correct Answer</b>	B
	<b>Marks</b>	1

12	<b>Question Description</b>	Which Article of the Constitution starts with "Subject to public order, morality & health...",
	<b>A</b>	Article 14
	<b>B</b>	Article 15
	<b>C</b>	Article 25
	<b>D</b>	Article 28
	<b>E</b>	None of the above
	<b>Correct Answer</b>	C
	<b>Marks</b>	1

13	<b>Question Description</b>	The offences under the Prohibition of Child Marriage Act, 2006 are
	<b>A</b>	Cognizable and Bailable
	<b>B</b>	Non-Cognizable and non-Bailable
	<b>C</b>	Cognizable and non- Bailable
	<b>D</b>	Non-Cognizable and Bailable
	<b>E</b>	None of the above
	<b>Correct Answer</b>	C
	<b>Marks</b>	1

14	<b>Question Description</b>	The Goa Daman and Diu Mundkars( Protection from Eviction) 1975 came into force
	<b>A</b>	12 <sup>th</sup> March 1976
	<b>B</b>	24 <sup>th</sup> December 1976
	<b>C</b>	4 <sup>th</sup> September 1976
	<b>D</b>	22 <sup>nd</sup> February 1976
	<b>E</b>	None of the above
	<b>Correct Answer</b>	A
	<b>Marks</b>	1



15

**Question Description**

Under Sec.78 of the Goa Land Revenue Code 1968 A settlement of land revenue of agricultural land shall remain in force for a period of -----and on the expiry of such period, the settlement shall continue to remain in force until the commencement of the term of a fresh settlement.

**A**

Twelve years

**B**

Fifteen Years

**C**

Twenty years

**D**

Thirty years

**E**

None of the above

**Correct Answer**

D

**Marks**

1

16

<b>Question Description</b>	When a writ is issued to an inferior court or tribunal on grounds of exceeding its jurisdiction or acting contrary to the rules of natural justice it is called a writ of :
<b>A</b>	Certiorary
<b>B</b>	Mandamus
<b>C</b>	Quo Warranto
<b>D</b>	Habeas Corpus
<b>E</b>	None of the above
<b>Correct Answer</b>	A
<b>Marks</b>	1

17

<b>Question Description</b>	In Case the landlord wishes to terminate the tenancy on any of the grounds mentioned in Sec.11 of the Goa Daman and Diu Agricultural Tenancy Act , he should give a ----- notice in writing to then tenant intimating his decision to terminate the tenancy.
<b>A</b>	Six Months
<b>B</b>	90 days
<b>C</b>	60 days
<b>D</b>	30 days
<b>E</b>	None of the above
<b>Correct Answer</b>	B
<b>Marks</b>	1

18	<b>Question Description</b>	In case the tenant opts to pay purchase price in instalments under Sec.18C of the Goa Damn and Diu Agricultural Tenancy Act, the first instalment should be paid within six months from the date of the order. The Next instalments are to be paid within a period of -----from the previous instalments.
	<b>A</b>	Four Months
	<b>B</b>	Six Months
	<b>C</b>	One year
	<b>D</b>	Three years
	<b>E</b>	None of the above
	<b>Correct Answer</b>	C
	<b>Marks</b>	1
19	<b>Question Description</b>	Under Section 21 of the Cr. P. C., 1973, a Special Executive Magistrate may be appointed by the
	<b>A</b>	Central Government
	<b>B</b>	High Court
	<b>C</b>	Supreme Court
	<b>D</b>	State Government.
	<b>E</b>	None of the above
	<b>Correct Answer</b>	D
	<b>Marks</b>	1

20	<b>Question Description</b>	Which of the following section defines Mundkar under The Goa, Daman, and Diu Mundkars ( Protection from Eviction) Act 1975
	<b>A</b>	Sec.2 (m)
	<b>B</b>	Sec.2(n)
	<b>C</b>	Sec.2(o)
	<b>D</b>	Sec.2(q)
	<b>E</b>	None of the above
	<b>Correct Answer</b>	D
	<b>Marks</b>	1

21	<b>Question Description</b>	Which of the following section of the Goa, Daman and Diu Mundkars ( Protection from Eviction) Act 1975 deals with Bar to attachment, seizure or sale of the interest of Mundkar in his dwelling house in execution of a decree or order of a Civil Court
	<b>A</b>	Sec.17
	<b>B</b>	Sec.18
	<b>C</b>	Sec.19
	<b>D</b>	Sec.20
	<b>E</b>	None of the above
	<b>Correct Answer</b>	C
	<b>Marks</b>	1

22	<b>Question Description</b>	Article 31 C was inserted in the Constitution of India by way of the -----Amendment.
	<b>A</b>	24 <sup>th</sup> Amendment
	<b>B</b>	25 <sup>th</sup> Amendment
	<b>C</b>	26 <sup>th</sup> Amendment
	<b>D</b>	27 <sup>th</sup> Amendment
	<b>E</b>	None of the above
	<b>Correct Answer</b>	B
	<b>Marks</b>	1

23	<b>Question Description</b>	Art.31 B of Constitution of India deals with validation of Acts and Regulation specified under ninth schedule, which was inserted by
	<b>A</b>	First Amendment
	<b>B</b>	Second Amendment
	<b>C</b>	Third Amendment
	<b>D</b>	Fourth Amendment
	<b>E</b>	None of the above
	<b>Correct Answer</b>	A
	<b>Marks</b>	1

24

<b>Question Description</b>	Which of the following lands are exempted from the scope of Goa, Diu and Daman Agricultural Tenancy Act
<b>A</b>	Lands held by the Government
<b>B</b>	Lands which are given to individuals who are rendering service to any religious/ Charitable/ educational institutions
<b>C</b>	Land vested in the custodian of Evacuee property
<b>D</b>	All of the above
<b>E</b>	None of the above
<b>Correct Answer</b>	D
<b>Marks</b>	1

25	<b>Question Description</b>	In case any mundkar had been in occupation is a dwelling house on 4 <sup>th</sup> February 1971 and was evicted on or after the date but before the appointed date i.e on 12 <sup>th</sup> March 1976 , he is entitled to restoration of the possession of the dwelling house if he makes an application to the Mamlatdar within ----- under The Goa, Daman, and Diu Mundkars ( Protection from Eviction) Act 1975
	<b>A</b>	Six Months
	<b>B</b>	One year
	<b>C</b>	Two years
	<b>D</b>	Three years
	<b>E</b>	None of the above
	<b>Correct Answer</b>	B
	<b>Marks</b>	1
26	<b>Question Description</b>	Which of the following part of the Indian Constitution deals with Administrative Tribunals and Tribunals for other matters
	<b>A</b>	Part XII
	<b>B</b>	Part XIII
	<b>C</b>	Part XIV
	<b>D</b>	Part XIV A
	<b>E</b>	None of the above
	<b>Correct Answer</b>	D
	<b>Marks</b>	1



27	<b>Question Description</b>	Mamlatdar , under the Goa Daman and Diu Mamlatdar's Court Act, cannot adjourn a case ordinarily for a period exceeding -----
	<b>A</b>	Ten days
	<b>B</b>	Fifteen days
	<b>C</b>	One month
	<b>D</b>	Three months
	<b>E</b>	None of the above
	<b>Correct Answer</b>	A
	<b>Marks</b>	1

28	<b>Question Description</b>	The Supreme Court of India in S.P.Gupta v. Union of India, AIR 1982 SC 149 , decided about
	<b>A</b>	Free Legal Aid.
	<b>B</b>	Bonded Labourers.
	<b>C</b>	Judges Transfer.
	<b>D</b>	Illegal Detention.
	<b>E</b>	None of the above
	<b>Correct Answer</b>	C
	<b>Marks</b>	1

29

<b>Question Description</b>	Which of the following authority is empowered to inquire into the question of tenancy and nature and purpose of use of land under Sec. 7 of the Goa, Daman, and Diu Agricultural Tenancy Act 1964
<b>A</b>	District Magistrate
<b>B</b>	Court of Civil Judge Junior Division
<b>C</b>	Court of Civil Judge Senior Division
<b>D</b>	District Court
<b>E</b>	None of the above
<b>Correct Answer</b>	C
<b>Marks</b>	1

30

<b>Question Description</b>	Under Goa, Daman, and Diu Land Revenue Code Record of rights is to be maintained in
<b>A</b>	Form No. II
<b>B</b>	Form No .III
<b>C</b>	Form No I
<b>D</b>	Form No.X
<b>E</b>	None of the above
<b>Correct Answer</b>	C
<b>Marks</b>	1

31

**Comprehension**

Total depravity of human nature! Here is a woman whose husband has been lost at sea; the news comes that he has been devoured by the ever-hungry waves, and she waits. There is something in her heart that tells her that he is alive. And she waits. And years afterwards, as she looks down towards the little gate, she sees him; he has been given back by the sea, and she rushes to his arms, and covers his face with kisses and with tears. And if that infamous doctrine is true, every tear is a crime and every kiss is blasphemy. It will not do. According to that doctrine, if a man steals and repents, and takes back the property, the repentance and taking back of the property are two crimes. It is an infamy.

**Question Description**

Identify the word or phrase from the above passage which means moral corruption or wickedness

**A**

infamy

**B**

depravity

**C**

blasphemy

**D**

crime

**E**

None of the above

**Correct Answer**

B

**Marks**

1

**Comprehension**

Total depravity of human nature! Here is a woman whose husband has been lost at sea; the news comes that he has been devoured by the ever-hungry waves, and she waits. There is something in her heart that tells her that he is alive. And she waits. And years afterwards, as she looks down towards the little gate, she sees him; he has been given back by the sea, and she rushes to his arms, and covers his face with kisses and with tears. And if that infamous doctrine is true, every tear is a crime and every kiss is blasphemy. It will not do. According to that doctrine, if a man steals and repents, and takes back the property, the repentance and taking back of the property are two crimes. It is an infamy.

**Question Description**

As per “that infamous doctrine”, the woman would be committing the following wrongs as result of her response to the return of her long-lost husband

**A** weeping and kissing her husband

**B** a crime and a blasphemy

**C** non-repentance for wrong-doing

**D** crime for weeping and blasphemy on kissing

**E** None of the above

**Correct Answer**

D

**Marks**

1

33

**Comprehension**

Total depravity of human nature! Here is a woman whose husband has been lost at sea; the news comes that he has been devoured by the ever-hungry waves, and she waits. There is something in her heart that tells her that he is alive. And she waits. And years afterwards, as she looks down towards the little gate, she sees him; he has been given back by the sea, and she rushes to his arms, and covers his face with kisses and with tears. And if that infamous doctrine is true, every tear is a crime and every kiss is blasphemy. It will not do. According to that doctrine, if a man steals and repents, and takes back the property, the repentance and taking back of the property are two crimes. It is an infamy.

**Question Description**

From the options provided below, identify the overall tone of the narrator in the above passage

**A**

comic

**B**

sarcastic

**C**

ironical

**D**

ridiculous

**E**

None of the above

**Correct Answer**

B

**Marks**

1

34

**Comprehension**

Total depravity of human nature! Here is a woman whose husband has been lost at sea; the news comes that he has been devoured by the ever-hungry waves, and she waits. There is something in her heart that tells her that he is alive. And she waits. And years afterwards, as she looks down towards the little gate, she sees him; he has been given back by the sea, and she rushes to his arms, and covers his face with kisses and with tears. And if that infamous doctrine is true, every tear is a crime and every kiss is blasphemy. It will not do. According to that doctrine, if a man steals and repents, and takes back the property, the repentance and taking back of the property are two crimes. It is an infamy.

**Question Description**

Identify the antonym of “blasphemy” from the following options

**A**

penance

**B**

profanity

**C**

divinity

**D**

reverence

**E**

None of the above

**Correct Answer**

D

**Marks**

1

35

**Comprehension**

Total depravity of human nature! Here is a woman whose husband has been lost at sea; the news comes that he has been devoured by the ever-hungry waves, and she waits. There is something in her heart that tells her that he is alive. And she waits. And years afterwards, as she looks down towards the little gate, she sees him; he has been given back by the sea, and she rushes to his arms, and covers his face with kisses and with tears. And if that infamous doctrine is true, every tear is a crime and every kiss is blasphemy. It will not do. According to that doctrine, if a man steals and repents, and takes back the property, the repentance and taking back of the property are two crimes. It is an infamy.

**Question Description**

The reaction of the woman to the sudden return of her husband years after he was believed to be lost at sea and probably dead, shows that she was

**A**

overwrought with pain and relief of reunion

**B**

overshadowed with surprise, shock and happiness

**C**

overwhelmed with surprise, joy and a sense of relief

**D**

overcome with shock, sorrow and happiness

**E**

None of the above

**Correct Answer**

C

**Marks**

1



36

**Comprehension**

All should be taught that man must protect himself, that there is no power superior to Nature that cares for man, that nature has neither pity nor hatred, that her forces act without the slightest regard for man, that she produces without intentions and destroys without regret... The triumphs of science are our miracles. The books filled with the facts of Nature are our sacred scriptures, and the force that is in every atom and in every star. In everything that lives and grows and thinks, that hopes and suffers is the only possible god. The absolute we cannot know; beyond the horizon of Nature, we cannot go. All our duties are within our reach; all obligations must be discharged here, in this world. ... Let us love and labour. Let us wait and work. Let us cultivate courage and cheerfulness, open our hearts to the gods, our minds to the true. Let us live free lives. Let us hope that future will bring peace and joy to all children of men, and above all, let us preserve the veracity of our souls.

**Question Description**

In the above passage, opening our minds “to the true” refers to respecting or revering

**A**

the intentions of Nature

**B**

the pity or hatred of Nature

**C**

the facts and force of Nature

**D**

miracles of science

**E**

None of the above

**Correct Answer**

C

**Marks**

1

37

**Comprehension**

All should be taught that man must protect himself, that there is no power superior to Nature that cares for man, that nature has neither pity nor hatred, that her forces act without the slightest regard for man, that she produces without intentions and destroys without regret... The triumphs of science are our miracles. The books filled with the facts of Nature are our sacred scriptures, and the force that is in every atom and in every star. In everything that lives and grows and thinks, that hopes and suffers is the only possible god. The absolute we cannot know; beyond the horizon of Nature, we cannot go. All our duties are within our reach; all obligations must be discharged here, in this world. ... Let us love and labour. Let us wait and work. Let us cultivate courage and cheerfulness, open our hearts to the gods, our minds to the true. Let us live free lives. Let us hope that future will bring peace and joy to all children of men, and above all, let us preserve the veracity of our souls.

**Question Description**

The statement or phrase in the passage that squarely underscores the limitation of humankind is

**A**

The books filled

**B**

the facts of Nature are our sacred scriptures

**C**

The absolute we cannot know

**D**

beyond the horizon of Nature, we cannot go

**E**

None of the above

**Correct Answer**

D

**Marks**

1

38

<b>Comprehension</b>	All should be taught that man must protect himself, that there is no power superior to Nature that cares for man, that nature has neither pity nor hatred, that her forces act without the slightest regard for man, that she produces without intensions and destroys without regret... The triumphs of science are our miracles. The books filled with the facts of Nature are our sacred scriptures, and the force that is in every atom and in every star. In everything that lives and grows and thinks, that hopes and suffers is the only possible god. The absolute we cannot know; beyond the horizon of Nature, we cannot go. All our duties are within our reach; all obligations must be discharged here, in this world. ... Let us love and labour. Let us wait and work. Let us cultivate courage and cheerfulness, open our hearts to the gods, our minds to the true. Let us live free lives. Let us hope that future will bring peace and joy to all children of men, and above all, let us preserve the veracity of our souls.
<b>Question Description</b>	Read the following statements and organize them in their logical sequence: (i) We must open our minds to Nature and fulfil our obligations to her. (ii) Nature produces without intensions and destroys without regret (iii) All our duties towards Nature's creation are within our reach (iv) There is no power superior to Nature.
<b>A</b>	(iv); (ii); (iii); (i)
<b>B</b>	(i); (ii); (iv); (iii)
<b>C</b>	(ii); (i); (iii); (iv)
<b>D</b>	(iii); (i); (ii); (iv)
<b>E</b>	None of the above
<b>Correct Answer</b>	A
<b>Marks</b>	1

39

**Comprehension**

All should be taught that man must protect himself, that there is no power superior to Nature that cares for man, that nature has neither pity nor hatred, that her forces act without the slightest regard for man, that she produces without intentions and destroys without regret... The triumphs of science are our miracles. The books filled with the facts of Nature are our sacred scriptures, and the force that is in every atom and in every star. In everything that lives and grows and thinks, that hopes and suffers is the only possible god. The absolute we cannot know; beyond the horizon of Nature, we cannot go. All our duties are within our reach; all obligations must be discharged here, in this world. ... Let us love and labour. Let us wait and work. Let us cultivate courage and cheerfulness, open our hearts to the gods, our minds to the true. Let us live free lives. Let us hope that future will bring peace and joy to all children of men, and above all, let us preserve the veracity of our souls.

**Question Description**

From the options provided below, find the synonym of the word “triumph”

**A**

defeat

**B**

miracle

**C**

obligation

**D**

victory

**E**

None of the above

**Correct Answer**

D

**Marks**

1

40

**Comprehension**

All should be taught that man must protect himself, that there is no power superior to Nature that cares for man, that nature has neither pity nor hatred, that her forces act without the slightest regard for man, that she produces without intentions and destroys without regret... The triumphs of science are our miracles. The books filled with the facts of Nature are our sacred scriptures, and the force that is in every atom and in every star. In everything that lives and grows and thinks, that hopes and suffers is the only possible god. The absolute we cannot know; beyond the horizon of Nature, we cannot go. All our duties are within our reach; all obligations must be discharged here, in this world. ... Let us love and labour. Let us wait and work. Let us cultivate courage and cheerfulness, open our hearts to the gods, our minds to the true. Let us live free lives. Let us hope that future will bring peace and joy to all children of men, and above all, let us preserve the veracity of our souls.

**Question Description**

“In everything that lives and grows and thinks, that hopes and suffers is the only possible god.”  
The above quoted statement implies that

**A**

we should try to find the divine everywhere

**B**

god is above or beyond nature

**C**

god is likely to exist among the living human beings

**D**

we must overcome our desire to seek god

**E**

None of the above

**Correct Answer**

C

**Marks**

1

41	<b>Question Description</b>	In which state will BioAsia 2023, the global event, be hosted?
	<b>A</b>	Assam
	<b>B</b>	Jharkhand
	<b>C</b>	Telangana
	<b>D</b>	Meghalaya
	<b>E</b>	None of the above
	<b>Correct Answer</b>	C
	<b>Marks</b>	1

42	<b>Question Description</b>	Which railway station received the 'Green Railway Station Certification'?
	<b>A</b>	Thiruvananthapuram
	<b>B</b>	Amritsar
	<b>C</b>	Visakhapatnam
	<b>D</b>	Faridabad
	<b>E</b>	None of the above
	<b>Correct Answer</b>	C
	<b>Marks</b>	1

43	<b>Question Description</b>	In which city will India's deepest metro station be built?
	<b>A</b>	Pune
	<b>B</b>	Jaipur
	<b>C</b>	Amritsar
	<b>D</b>	Chennai
	<b>E</b>	None of the above
	<b>Correct Answer</b>	A
	<b>Marks</b>	1

44	<b>Question Description</b>	On what date is National Voter Day celebrated in 2023?
	<b>A</b>	January 25
	<b>B</b>	January 10
	<b>C</b>	January 15
	<b>D</b>	January 21
	<b>E</b>	None of the above
	<b>Correct Answer</b>	A
	<b>Marks</b>	1

45	<b>Question Description</b>	In which state did the first Indo-Egypt joint military exercise "CYCLONE -I" begin?
	<b>A</b>	Andhra Pradesh
	<b>B</b>	Rajasthan
	<b>C</b>	Gujrat
	<b>D</b>	Maharashtra
	<b>E</b>	None of the above
	<b>Correct Answer</b>	B
	<b>Marks</b>	1

46	<b>Question Description</b>	The Paithan (Jayakwadi) Hydro-electric project, completed with the help of Japan, is on the river
	<b>A</b>	Ganga
	<b>B</b>	Cauvery
	<b>C</b>	Narmada
	<b>D</b>	Godavari
	<b>E</b>	None of the above
	<b>Correct Answer</b>	D
	<b>Marks</b>	1



47	<b>Question Description</b>	Which city is set to host the Formula E World Championship race for the first time?
	<b>A</b>	Shimla
	<b>B</b>	Hyderabad
	<b>C</b>	Chennai
	<b>D</b>	Mumbai
	<b>E</b>	None of the above
	<b>Correct Answer</b>	B
	<b>Marks</b>	1

48	<b>Question Description</b>	In which city was the Aravalli Biodiversity Park designated by IUCN?
	<b>A</b>	Rohtak
	<b>B</b>	Gurugram
	<b>C</b>	Agra
	<b>D</b>	Noida
	<b>E</b>	None of the above
	<b>Correct Answer</b>	B
	<b>Marks</b>	1

49	<b>Question Description</b>	Wadia Institute of Himalayan Geology is located at
	<b>A</b>	Darjeling
	<b>B</b>	Shimla
	<b>C</b>	Dehradun
	<b>D</b>	Kulu
	<b>E</b>	None of the above
	<b>Correct Answer</b>	C
	<b>Marks</b>	1

50	<b>Question Description</b>	Who broke MS Dhoni's record of most sixes in ODIs in India?
	<b>A</b>	KL Rahul
	<b>B</b>	Hardik Pandya
	<b>C</b>	Rohit Sharma
	<b>D</b>	Virat kohli
	<b>E</b>	None of the above
	<b>Correct Answer</b>	C
	<b>Marks</b>	1

51

**Question Description****Select the one which is different from the other three responses.****A**

108

**B**

72

**C**

96

**D**

36

**E**

None of the above

**Correct Answer**

D

**Marks**

1

52

**Question Description**

Find the missing value

<b>3</b>	<b>P</b>	<b>7</b>
<b>V</b>	<b>36</b>	<b>R</b>
<b>15</b>	<b>T</b>	<b>11</b>

<b>4</b>	<b>D</b>	<b>8</b>
<b>J</b>	<b>?</b>	<b>F</b>
<b>16</b>	<b>H</b>	<b>12</b>

<b>2</b>	<b>L</b>	<b>6</b>
<b>R</b>	<b>32</b>	<b>?</b>
<b>14</b>	<b>P</b>	<b>10</b>

**A**

40, M

**B**

32, M

**C**

40, N

**D**

32, N

**E**

None of the above

**Correct Answer**

C

**Marks**

1

53

**Question Description**

Find the missing number from the given responses.

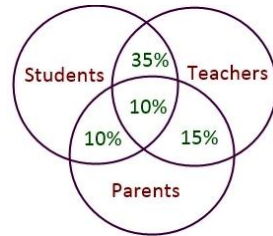
38	54	61	79
21	?	12	24
19	09	14	?

**A** 18, 46**B** 28, 51**C** 42, 62**D** 18, 44**E** None of the above**Correct Answer** D**Marks** 1

54

**Question Description**

In the given figure 10% are students and parents another 10% are students and teachers and parents 15% are teachers and parents. 35% are students and teachers. How many percentage are only teachers, parents and students?



<b>A</b>	45, 40, 65
<b>B</b>	40, 45, 65
<b>C</b>	40, 65, 45
<b>D</b>	65, 40, 45
<b>E</b>	None of the above
<b>Correct Answer</b>	C
<b>Marks</b>	1

55

<b>Question Description</b>	In a class, there are 36 very tall boys. If these constitute three-fourths of the boys and the total number of boys is two-thirds of the total number of students in the class, what is the total number of girls in the class?
<b>A</b>	36
<b>B</b>	72
<b>C</b>	24
<b>D</b>	48
<b>E</b>	None of the above
<b>Correct Answer</b>	C
<b>Marks</b>	1

56

**Question Description**

Anand starts from point P and walks 15m towards north and reaches point Q. He then takes a right turn and walks 10m and reaches point R. He again takes a right turn and walks 25m and reaches point S. He takes a left turn and walks for 5m and reaches point T. He again takes a left turn and walks for 30m to reach point U. From here he takes a left turn and walks 15m and stops at point V.

If Anand stands at point T, then in which direction is he with respect to the starting point?

**A**

Southeast

**B**

Northeast

**C**

Southwest

**D**

South

**E**

None of the above

**Correct Answer**

A

**Marks**

1



57

**Question Description**

**Directions: Read the following information carefully and answer the questions given beside.**

Seven persons from A to G were born on 14th April of different years among 1984, 1987, 1991, 1995, 1998, 2003 and 2004. B was born after two persons. Only one person was born between A and D. B was born after D. C was born before but not immediately before E. G was younger than E but older than F.

**How many persons were born after D?**

**A**

3

**B**

1

**C**

4

**D**

5

**E**

None of the above

**Correct Answer**

D

**Marks**

1

58

<b>Question Description</b>	Find out the wrong number in the given sequence of numbers. 582, 605, 588, 611, 634, 617, 600
<b>A</b>	634
<b>B</b>	611
<b>C</b>	605
<b>D</b>	600
<b>E</b>	None of the above
<b>Correct Answer</b>	A
<b>Marks</b>	1

59

<b>Question Description</b>	How many such pairs of letters are there in the 'ENTHUSIASTIC' each of which has as many letters between them in the word as in the English Alphabet?
<b>A</b>	None
<b>B</b>	One
<b>C</b>	Two
<b>D</b>	Three
<b>E</b>	None of the above
<b>Correct Answer</b>	D
<b>Marks</b>	1

<b>Question Description</b>	<b>Directions: Study the following questions carefully and put them in proper sequence and choose the right answer</b>  1. Windows    2. Walls    3. Floor    4.Foundation    5. Roof    6. Room
<b>A</b>	4, 1, 5, 6, 2, 3
<b>B</b>	4, 2, 1, 5, 3, 6
<b>C</b>	4, 3, 5, 6, 2, 1
<b>D</b>	4, 5, 3, 2, 1, 6
<b>E</b>	None of the above
<b>Correct Answer</b>	B
<b>Marks</b>	1

61

**Question Description**

Find the missing Number

<b>11</b>	<b>24</b>	<b>13</b>	<b>?</b>
<b>8</b>	<b>12</b>	<b>10</b>	<b>10</b>
<b>16</b>	<b>9</b>	<b>?</b>	<b>13</b>

**A**

11, 13

**B**

12, 20

**C**

22, 12

**D**

9, 13

**E**

None of the above

**Correct Answer**

C

**Marks**

1

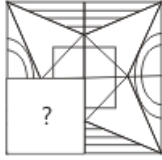
62

<b>Question Description</b>	<p><b>In each question below are given some statements followed by two conclusions numbered I and II. You have to take the given statements to be true even if they seem to be at variance with commonly known facts. Read all the conclusions and then decide which of the given conclusions logically follows/follow from the given statements, disregarding commonly known facts.</b></p> <p><b>Statements:</b> Some frooti are Maaza. No Maaza is slice. All slice are fanta.</p> <p><b>Conclusions:</b> I. Some frooti are definitely not slice. II. Some fanta are definitely not Maaza.</p>
<b>A</b>	If only conclusion I follow
<b>B</b>	If only conclusion II follow
<b>C</b>	If neither conclusion I nor conclusion II follows
<b>D</b>	If both the conclusions follow
<b>E</b>	None of the above
<b>Correct Answer</b>	D
<b>Marks</b>	1

63

Question Description

Which Answer Figure will complete the pattern in the figure?



A



B



C



D



E

None of the above

Correct Answer

D

Marks

1

64

**Question Description**

**Directions:** In this type of questions, certain pairs/groups of numbers are given out of which all except one are similar in some manner while one is different. The numbers in these similar pairs/groups may have the same property or may be related to each other according to the same rule. The candidate is required to choose the odd pair/group.

**Which Pair does NOT belong with the others?**

**A**

12 – 42

**B**

14 – 82

**C**

23 – 64

**D**

36 – 72

**E**

None of the above

**Correct Answer**

D

**Marks**

1



65

**Question Description****Find the odd one out from the given alternatives:****A**

45 -27

**B**

20 -13

**C**

15 -12

**D**

30 - 18

**E**

None of the above

**Correct Answer**

B

**Marks**

1

66

**Question Description****Choose the correct alternative from the given ones that will complete the series.**

IN , KL , MJ , OH , ?

**A**

OF

**B**

QF

**C**

QE

**D**

IQ

**E**

None of the above

**Correct Answer**

B

**Marks**

1

67

**Question Description**

**Directions: Read the following information carefully and answer the questions given beside.**

Point B is 7 km to the west of Point A. Point C is 12 km to the south of Point E. Point A is 5km to the east of Point C. Point D is 8 km to the north of Point C. Point G is 6km to the west of Point D. Point H is 14 km to the south of Point G.

**If SIya is standing 6km to the east of Point H and takes 1 hour to complete 9km distance then in what possible time she would reach Point E, if taken the shortest route?**

**A** 35 Minutes

**B** 60 minutes

**C** 180 minutes

**D** 120 minutes

**E** None of the above


**Correct Answer** D

**Marks** 1


68

Question Description

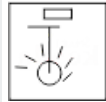
A mirror is placed on the line MN, and then which of the Answer Figures is the right image of the given Question Figure?



A




B



C



D



E

None of the above

Correct Answer

C

Marks

1

**Question Description**

**Directions: Read the given information carefully and answer the questions given beside:**

Ten persons from J to S are sitting around a rectangular table such that 2 of them sit at each longer sides while one of them sits at each shorter side and remaining persons sit at each of the corners. Only the persons sitting at the corner face away from centre. Each one of them has different number of boxes that increases in anti-clockwise direction from the position of K in consecutive integral multiples of 5.

J sits second to the left of M, who has 45 boxes. K has 30 boxes and sits on the immediate left of N. P sits adjacent to the one who has the highest number of boxes. Only three persons sit between P and S when counted from left of P. L who is not sitting at any corner sits second to the right of S, who is not adjacent to O. The number of boxes with O is just less than that of Q. R does not have the highest number of boxes.

**What is the sum of the number of boxes of the immediate neighbors of R?**

- |          |                   |
|----------|-------------------|
| <b>A</b> | 80                |
| <b>B</b> | 110               |
| <b>C</b> | 120               |
| <b>D</b> | 140               |
| <b>E</b> | None of the above |

**Correct Answer**

B

**Marks**

1

70

**Question Description**

Roop is father of Geet and Meet is mother of Roop. Tony is sister of Tanu whose daughter is Soni. Kanu, the husband of Meet is the grandfather of Soni. Moni is father of Tony and brother of Preet. Kanu has only two children, both of opposite gender. If Sona is the sister in law of Tanu then how is Tony related to Geet?

**A**

Sister

**B**

Aunt

**C**

Daughter

**D**

Mother

**E**

None of the above

**Correct Answer**

B

**Marks**

1

71

**Question Description**

Choose the correct alternative from the given ones that will complete the series.  
6, 13, 28, 59, ?

**A**

108

**B**

159

**C**

122

**D**

118

**E**

None of the above

**Correct Answer**

C

**Marks**

1

72

**Question Description**

**Directions:** Read the following information carefully and answer the questions given beside.

O	M	I	Y	S	U	Q	N	D	A	B	E	T	R	L
5	@	9	%	&	*	7	/	!	3	9	0	#	=	8

**Conditions:**

I. If the word starts with a vowel and ends with a consonant then interchange the codes of first and second last letter.

II. If third and sixth letter of a word is a vowel, then change the codes of letters at such position with the letters just next to them in the given table.

III. If the word has not less than three vowels, then replace the codes of all the vowels with 5.

Note- If more than one condition is applicable to a single word then apply the conditions as per their ascending order of their serial number.

**Find the code for "Quarrel"?**

A 7\*9==#8

B 755==58

C 7\*9==08

D 5\*7=8#8



<b>E</b>	None of the above
----------	-------------------

<b>Correct Answer</b>	B
-----------------------	---

<b>Marks</b>	1
--------------	---

**Question Description**

**Each of the following consists of a question and two statements numbered I and II given below it. You have to decide whether the data provided in the statements are sufficient to answer the question:**

Eight persons are standing in two parallel rows, such that four persons stand in row-X facing north and four stand in another row i.e. row-Y facing south. In this way, person in one row faces the person of other row.

**Who faces C?**

**Statement I :** A is second to the right of B, who is an immediate neighbor of D. E stands in row-Y and faces G, who is immediate left of H. C is on the immediate right of the one who faces A.

**Statement II :** F stands at the left end in row-Y. A is facing I, who is second to the left of E. A stands in row-X. C and F are the immediate neighbors of I.

<b>A</b>	If the data in statement I alone is sufficient to answer the question, while the data in statement II alone is not sufficient to answer the question.
<b>B</b>	If the data in statement II alone is sufficient to answer the question, while the data in statement I alone is not sufficient to answer the question.
<b>C</b>	if the data either in statement I alone or in statement II alone is sufficient to answer the question.
<b>D</b>	If the data in both statement I and II together are not sufficient to answer the question.
<b>E</b>	None of the above
<b>Correct Answer</b>	A
<b>Marks</b>	1

74

**Question Description**

**Each of the following consists of a question and two statements numbered I and II given below it. You have to decide whether the data provided in the statements are sufficient to answer the question:**

Find the code for "drive"?

**Statement I :** 'slow move road' is coded as 'ge hu ba' and 'traffic rules drive' is coded as 'to la se'.

**Statement II :** 'road rules follow' is coded as 'hu ve la' and 'slow traffic change' is coded as 'to ba nu'.

**A**

If the data in statement I alone is sufficient to answer the question, while the data in statement II alone is not sufficient to answer the question.

**B**

If the data in statement II alone is sufficient to answer the question, while the data in statement I alone is not sufficient to answer the question.

**C**

If the data either in statement I alone or in statement II alone is sufficient to answer the question.

**D**

If the data in both statement I and II together are necessary to answer the question.

**E**

None of the above

**Correct Answer**

D

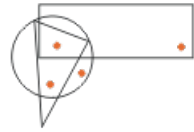
**Marks**

1

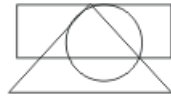
75

Question Description

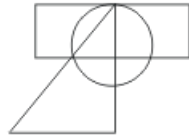
Which of the following answer figures marked as option (A), (B), (C) and (D) satisfies the same condition of placement of dots as in the Question Figure?



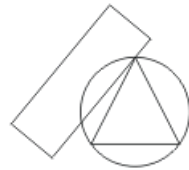
A



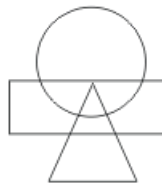
B



C



D



E

None of the above

Correct Answer

B

Marks

1