

Computer Based Examination System

Exported On *	2023/04/03 11:35:28
Title *	Question Paper Answer Key
OES Exam *	GPSC11202204 / Planning Officer / Completed / 2023-04-01

1	Question Description	<p>Company A</p> <table border="1" style="margin-left: auto; margin-right: auto;"> <tr> <td></td> <td style="text-align: center;">Expand</td> <td style="text-align: center;">Don't Expand</td> </tr> <tr> <td style="text-align: center;">Expand</td> <td style="text-align: center;">200 / 300</td> <td style="text-align: center;">100 / 800</td> </tr> <tr> <td style="text-align: center;">Don't Expand</td> <td style="text-align: center;">800 / 100</td> <td style="text-align: center;">200 / 200</td> </tr> </table>		Expand	Don't Expand	Expand	200 / 300	100 / 800	Don't Expand	800 / 100	200 / 200
			Expand	Don't Expand							
Expand	200 / 300	100 / 800									
Don't Expand	800 / 100	200 / 200									
<p>Company A and Company B are competing firms that are deciding whether or not to expand their operations. The payoff matrix provided shows the profit to be earned (expressed in thousands) from any decision that is made. Based on the data provided</p>											
A	Company A has a dominant strategy and Company B does not										
B	Company B has a dominant strategy and Company A does not										
C	Neither company has a dominant strategy and a Nash equilibrium exists.										
D	Both companies have a dominant strategy and a Nash equilibrium exists.										
E	None of the above										
Correct Answer		D									
Marks		1									

2

Question Description	When one firm in the health drinks market started advertising campaign that stressed the nutritional value of its health drinks, all the remaining 10 health drink majors started similar advertising campaigns to withhold their customers. It suggests that the health drinks industry is a/an
A	Oligopoly
B	Oligopsony
C	Monopolistically competitive market
D	Perfectly competitive market
E	None of the above
Correct Answer	A
Marks	1

3

Question Description	Suppose an economy is in long-run equilibrium at the full-employment level of output. If government spending then increases ----- -
A	an inflationary gap is created because the aggregate demand curve shifts to the right
B	an inflationary gap is created because the aggregate supply curve shifts to the right
C	an inflationary gap is created because potential GDP shifts to the left
D	a recessionary gap is created because the aggregate supply curve shifts to the left
E	None of the above
Correct Answer	A
Marks	1

4

Question Description

Consider the following statements in regard to Zero Base Budgeting (ZBB) :

1.)Existing Government programs can be discarded under ZBB if they are found to be outdated.

2.)ZBB is difficult to be applied to Human Development programmes as the outcome of such programme is intangible in nature.

Which of the statements given above is/are correct?

A

1 only

B

2 only

C

Both 1 and 2

D

Neither 1 nor 2

E

None of the above

Correct Answer

C

Marks

1

5

Question Description

Look at the following statements about real exchange rate

1.It is taken as a measure of a country's international competitiveness

2.It refers to the relative price of goods

3.It has bearing on export and imports of the country

Which of the statements given above are correct?

A

Only 1 and 2

B

Only 2 and 3

C

Only 1 and 3

D

All of the above

E

None of the above

Correct Answer

D

Marks

1

6

Question Description

With reference to '_Consumer Confidence Survey', consider the following statements:

1.It is released by the Central Statistics Office (CSO)

2.This Survey is being used by the Reserve Bank as one of the important inputs for monetary Policy formulation.

Which of the statements given above is/are correct?

A

1 only

B

2 only

C

Both 1 and 2

D

Neither 1 nor 2

E

None of the above

Correct Answer

B

Marks

1

7	Question Description	Which is the main point on the basis of which public finance can be separated from private finance:
	A	Price policy
	B	Borrowings
	C	Secrecy
	D	Elasticity in income
	E	None of the above
	Correct Answer	C
	Marks	1

8	Question Description	Which of the following statements is false ?
	A	There will be no consumer surplus under first degree price discrimination.
	B	Dead weight loss is high under first degree price discrimination.
	C	Third degree price discrimination involves separating consumers or markets in terms of their price elasticity of demand.
	D	Under third degree price discrimination a firm charges a lower price in a market with more elastic demand than in the market with less elastic demand.
	E	None of the above
	Correct Answer	B
	Marks	1

9

Question Description

What would be the sequence of events when RBI increases money supply by reducing CRR?

- i) Interest rates fall.
- ii) Increase in investment expenditure.
- iii) Portfolio disequilibrium.
- iv) Increase in price of financial assets.

A

(i), (ii), (iii), (iv).

B

(iii), (iv), (i), (ii).

C

(ii), (iii), (iv), (i).

D

(iv), (iii), (ii), (i).

E

None of the above

Correct Answer

B

Marks

1

10

Question Description	If the government increases its expenditure and simultaneously adjusts the tax rate such that the budget deficit remains at the original level, then which of the following is true ?
A	The equilibrium income remains unchanged.
B	The equilibrium income increases by the amount of increase in government expenditure.
C	The equilibrium income will increase by the amount of increase in government expenditure if marginal propensity to consume is greater than the investment- income ratio in the investment function.
D	The equilibrium income will increase by the amount of increase in government expenditure if marginal propensity to consume is equal to the investment-income ratio in the investment function.
E	None of the above
Correct Answer	D
Marks	1

11	Question Description	The deficit on current account implies
	A	Exports of merchandize goods, invisibles is less than imports of merchandize goods, invisibles
	B	Foreign direct investment in the country is more than exports
	C	Domestic industries are financed more by the international financial institutes than local financial institutions
	D	Exports of merchandize goods are less than merchandize imports
	E	None of the above
	Correct Answer	A
	Marks	1

12	Question Description	The Keynesian remedy for unemployment is to
	A	Decrease aggregate demand.
	B	Reduce tax rates or lower interest rates.
	C	Decrease government spending.
	D	Decrease private consumption and investment.
	E	None of the above
	Correct Answer	B
	Marks	1

13	Question Description	If the marginal benefit from another computer exceeds the marginal cost of the computer, then to use resources efficiently,
	A	If the marginal benefit exceeds the marginal cost by as much as possible, the efficient amount of resources are being used to produce computers.
	B	Fewer resources should be used to produce computers.
	C	More resources should be used to produce computers.
	D	None of the above is correct because marginal benefit and marginal cost have nothing to do with using resources efficiently.
	E	None of the above
	Correct Answer	C
Marks	1	
14	Question Description	If RBI wants to 'sterilize' an inflow of foreign exchange, it should
	A	Lower the bank rate
	B	Lower the CRR
	C	Sell government securities in the open market
	D	Increase the repo rate
	E	None of the above
	Correct Answer	C
Marks	1	

15	Question Description	Which of the following best describes 'venture capital'?
	A	Venture capital is a type of financing provided by large, established companies to small, early-stage startups.
	B	Venture capital is a type of financing provided by banks and financial institutions to small, early-stage startups.
	C	Venture capital is a type of financing provided by wealthy individuals or firms to small, early-stage startups in exchange for an ownership stake in the company.
	D	Venture capital is a type of financing provided by the government to small, early-stage startups.
	E	None of the above
	Correct Answer	C
	Marks	1
16	Question Description	If the government subsidizes producers in a perfectly competitive market, then
	A	The demand for the product will increase
	B	The demand for the product will decrease
	C	The consumer surplus will increase
	D	The consumer surplus will decrease
	E	None of the above
	Correct Answer	C
	Marks	1

17

Question Description

Consider the following liquid assets:

- 1.Demand deposits with the banks
- 2.Time deposits with the banks
- 3.Savings deposits with the banks
- 4.Currency

The correct sequence of these decreasing orders of Liquidity is:

A

1-4-3-2

B

4-3-2-1

C

2-3-1-4

D

4-1-3-2

E

None of the above

Correct Answer

D

Marks

1

18

Question Description	Which of the following statements is correct?
A	If the NPV of a project is greater than 0, its PI will equal 0.
B	If the IRR of a project is 0%, its NPV, using a discount rate, k , greater than 0, will be 0.
C	If the PI of a project is less than 1, its NPV should be less than 0.
D	If the IRR of a project is greater than the discount rate, k , its PI will be less than 1 and its NPV will be greater than 0.
E	None of the above
Correct Answer	C
Marks	1

19

Question Description

Recently, European Union (EU) members have agreed to implement a minimum tax rate. Consider the following statements regarding Global Minimum Tax:

1.)It aims to apply a standard minimum tax rate to a defined corporate income base worldwide.

2.)This framework encourages nations to have tax competition through lower tax rates.

3.)It aims to promote tax competition between governments to attract foreign investment.

Which of the statements given above is/are correct?

A

1 only

B

1 and 2 only

C

2 and 3 only

D

1, 2 and 3

E

None of the above

Correct Answer

A

Marks

1

20

Question Description	Which of the following best describes a cartel?
A	An organization of independent firms producing similar products that work together to raise prices and restrict output.
B	An organization of independent firms producing different products that work together to raise prices and restrict output.
C	An organization of interdependent firms producing different products that work together to raise prices and restrict output.
D	An independent body set up by the government against oligopolistic firms.
E	None of the above
Correct Answer	A
Marks	1

21

Question Description

Consider the following statements:

1.) Capital Receipts indicate the receipts which lead to a decrease in assets or an increase in liabilities of the government.

2.) Capital expenditure is used to create assets or to reduce liabilities.

Which of the statements given above is/are correct?

A

1 only

B

2 only

C

Both 1 and 2

D

Neither 1 nor 2

E

None of the above

Correct Answer

C

Marks

1

22

Question Description

Which of the following best explains the cascading effect of taxation?

- (1) When tax imposition leads to a disproportionate increase in prices by an extent more than the rise in the tax.
- (2) When tax imposition leads to a disproportionate decrease in prices by an extent more than the rise in the tax.
- (3) When tax imposition leads to a disproportionate decrease in imports.
- (4) When tax imposition leads to a disproportionate decrease in exports.

A

1 only

B

2 and 3 only

C

4 only

D

3 and 1 only

E

None of the above

Correct Answer

A

Marks

1

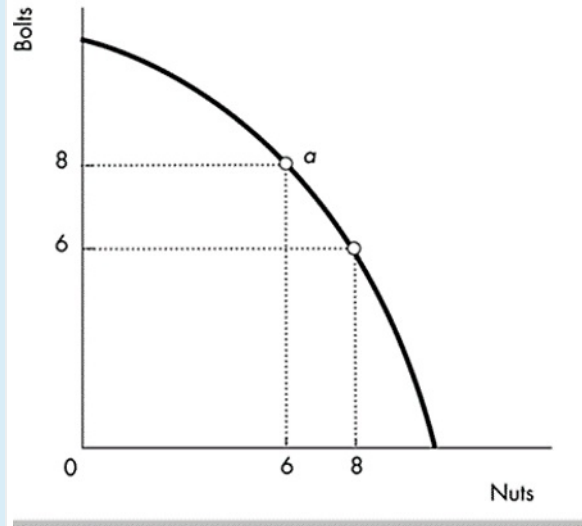
23

Question Description	In Stock Market parlance, the term “Automatic stabilizers” refer to
A	Inherent mechanisms in the stock market that automatically cause stock market gains to be cancelled out by losses, which make expected long-run returns equal to zero
B	The invisible hand mechanisms which automatically bring the economy out of a recession
C	Government revenue and expenditure items that change automatically in response to changes in economic activity
D	Discretionary monetary policy manoeuvres designed to keep inflation under control automatically
E	None of the above
Correct Answer	C
Marks	1

24

Question Description	Pareto efficiency occurs when
A	There is no way to reorganize production so that it will increase the satisfaction of one person without reducing the satisfaction of another person
B	There is no way to reorganize consumption so that it will increase the satisfaction of one person without reducing the satisfaction of another person
C	No reorganization of production and consumption is possible by which some individuals are made better off without making someone else worse off
D	There is no way to reorganize production or consumption so that it will increase the satisfaction of one person by reducing the satisfaction of another person
E	None of the above
Correct Answer	C
Marks	1

Question Description



Victor currently produces nuts and bolts at point *a* in the figure. Victor's marginal cost of producing an additional nut is _____.

- A 8/6 bolts
- B 1/2 bolt
- C 1 bolt
- D 8 bolts
- E None of the above

Correct Answer C

Marks 1

26	Question Description	Which of the following statements is/are true about the impact of inflation in the economy?
	A	Unanticipated inflation hurts the fixed income earners most.
	B	Higher than expected inflation hurts creditors but benefits debtors.
	C	Inflation creates inefficiency in the economy because it forces people to search for prices when they could be doing something else.
	D	All of the above.
	E	None of the above
	Correct Answer	D
	Marks	1

27	Question Description	According to the supply side of the vicious circle theory of development, a country is poor because
	A	Technology levels do not allow for self-sufficiency.
	B	It was previously too poor to save and invest.
	C	Underemployment is too widespread.
	D	Resource allocation is poor.
	E	None of the above
	Correct Answer	B
	Marks	1

28

Question Description	Which among the following is NOT an assumption of Pareto optimality?
A	Every consumer wishes to maximize his level of satisfaction.
B	All the factors of production are used in the production of every commodity.
C	Conditions of perfect competition exist making all the factors of production perfectly mobile
D	The concept of utility is cardinal and cardinal utility function of every consumer is given.
E	None of the above
Correct Answer	D
Marks	1

29

Question Description

Recently, RBI launched India's first pilot project of Central Bank Digital Currency (CBDC), consider the following statements regarding CBDC.

1.)CBDCs are a digital form of paper currency and like crypto currencies, they work on a decentralised network.

2.)It is the same as a fiat currency and is exchangeable one-to-one with the fiat currency.

3.)CBDC can be transacted using wallets backed by block chain.

4.)Bahamas is the first economy to launch its nationwide CBDC named Sand Dollar.

Which of the statements given above is/are correct?

A

1 and 2 only

B

2 and 4 only

C

1 and 3 only

D

2, 3 and 4 only

E

None of the above

Correct Answer

D

Marks

1

30

Question Description	Wiseman-Peacock hypotheses supports in a much stronger manner the possibility of
A	An upward trend in public expenditure
B	A downward trend in public expenditure
C	A constancy of public expenditure
D	A mixed trend in public expenditure
E	None of the above
Correct Answer	A
Marks	1

31 **Comprehension** Read the passage and answer the questions below:

Stereotyping is a type of generalization which attributes traits or characteristics to everyone in a large group. People who stereotype tend to have fixed and unbending opinions. They respond to challenges by distorting reality, rather than consider their assumptions and conclusions, which they have labelled as the truth. What happens is that the facts are compared to the stereotype and then rejected, because they do not fit the stereotype. Stereotyping is often caused by ethno-centrism. The ramifications of stereotyping are that it:

- Forces us to choose ideas
- Causes destructive competition
- Alienates us from others
- Leads to narrow thinking

We end up denying dignity to others, whom we stereotype, and generate unhappiness all around us.

Question Description Those who tend to stereotype are not likely to

A have rigid views about others

B revisit their assumptions about others

C believe their opinions as the truth

D distort reality rather than face truth

E None of the above

Correct Answer B

Marks 1

Comprehension

Read the passage and answer the questions below:

Stereotyping is a type of generalization which attributes traits or characteristics to everyone in a large group. People who stereotype tend to have fixed and unbending opinions. They respond to challenges by distorting reality, rather than consider their assumptions and conclusions, which they have labelled as the truth. What happens is that the facts are compared to the stereotype and then rejected, because they do not fit the stereotype. Stereotyping is often caused by ethno-centrism. The ramifications of stereotyping are that it:

- Forces us to choose ideas
- Causes destructive competition
- Alienates us from others
- Leads to narrow thinking

We end up denying dignity to others, whom we stereotype, and generate unhappiness all around us.

Question Description

Identify the phrase from the following options, which means ‘alienates’

A encourages estrangement

B generates friendliness

C connects to others

D turns towards strangers

E None of the above

Correct Answer

A

Marks

1

33 **Comprehension** Read the passage and answer the questions below:

Stereotyping is a type of generalization which attributes traits or characteristics to everyone in a large group. People who stereotype tend to have fixed and unbending opinions. They respond to challenges by distorting reality, rather than consider their assumptions and conclusions, which they have labelled as the truth. What happens is that the facts are compared to the stereotype and then rejected, because they do not fit the stereotype. Stereotyping is often caused by ethno-centrism. The ramifications of stereotyping are that it:

- Forces us to choose ideas
- Causes destructive competition
- Alienates us from others
- Leads to narrow thinking

We end up denying dignity to others, whom we stereotype, and generate unhappiness all around us.

Question Description Select the synonym for 'ramification' from the options provided below

A cause

B aftermath

C juncture

D source

E None of the above

Correct Answer B

Marks 1

Comprehension

Read the passage and answer the questions below:

Stereotyping is a type of generalization which attributes traits or characteristics to everyone in a large group. People who stereotype tend to have fixed and unbending opinions. They respond to challenges by distorting reality, rather than consider their assumptions and conclusions, which they have labelled as the truth. What happens is that the facts are compared to the stereotype and then rejected, because they do not fit the stereotype. Stereotyping is often caused by ethno-centrism. The ramifications of stereotyping are that it:

- Forces us to choose ideas
- Causes destructive competition
- Alienates us from others
- Leads to narrow thinking

We end up denying dignity to others, whom we stereotype, and generate unhappiness all around us.

Question Description

Read the following statements carefully and state whether they are true or false:

- (i) The ground reality does not match the assumptions behind the stereotype.
- (ii) The stereotype is thus rejected because it does not fit the perception.

A

Both the statements (i) and (ii) are false

B

Statement (i) is false but statement (ii) is true

C

Statement (i) is true but statement (ii) is false

D

Both the statements (i) and (ii) are true

E

None of the above

Correct Answer

C

Marks

1

Comprehension

Read the passage and answer the questions below:

Stereotyping is a type of generalization which attributes traits or characteristics to everyone in a large group. People who stereotype tend to have fixed and unbending opinions. They respond to challenges by distorting reality, rather than consider their assumptions and conclusions, which they have labelled as the truth. What happens is that the facts are compared to the stereotype and then rejected, because they do not fit the stereotype. Stereotyping is often caused by ethno-centrism. The ramifications of stereotyping are that it:

- Forces us to choose ideas
- Causes destructive competition
- Alienates us from others
- Leads to narrow thinking

We end up denying dignity to others, whom we stereotype, and generate unhappiness all around us.

Question Description

Stereotyping is undesirable because it tends to

A

deny dignity to others

B

have several negative ramifications

C

generate ethno-centric hostility

D

all these

E

None of the above

Correct Answer

D

Marks

1

Comprehension

Read the passage and answer the questions below:

Most malnutrition is invisible. Consistent undernutrition, together with bouts of infection and diarrhoea, can retard growth so gradually as to go unnoticed by the mother. Unless a child is seriously underweight or shows obvious signs of malnutrition (listlessness, discoloured hair, irritability, frequent crying, distended stomach) his condition of undernutrition may not be visible to the mother. For timely prevention of malnutrition, the UNICEF has been using the simple inexpensive method of growth monitoring charts which helps mothers whether or not their children are growing and gaining weight correctly and thus can be an effective aid to sound child health and nutrition. The first requirement for children and adults who are undernourished and living at subsistence level is adequate quantity of food. The next is nutritious food, containing all the elements necessary to support life and maintain good health.

Question Description

Select from the options given below, the original full form of UNICEF as

A

United Nations International Cultural Economic Forum

B

United National Cultural Economic Federation

C

United Nations International Children's Emergency Fund

D

United Nations Intellectual Cultural Economic Foundation

E

None of the above

Correct Answer

C

Marks

1

37

Comprehension

Read the passage and answer the questions below:

Most malnutrition is invisible. Consistent undernutrition, together with bouts of infection and diarrhoea, can retard growth so gradually as to go unnoticed by the mother. Unless a child is seriously underweight or shows obvious signs of malnutrition (listlessness, discoloured hair, irritability, frequent crying, distended stomach) his condition of undernutrition may not be visible to the mother. For timely prevention of malnutrition, the UNICEF has been using the simple inexpensive method of growth monitoring charts which helps mothers whether or not their children are growing and gaining weight correctly and thus can be an effective aid to sound child health and nutrition. The first requirement for children and adults who are undernourished and living at subsistence level is adequate quantity of food. The next is nutritious food, containing all the elements necessary to support life and maintain good health.

Question Description

As per the passage, when early signs of malnutrition go unnoticed, the immediate fallout is that this

A

hinders the prevention of malnutrition

B

conceals the condition of undernutrition

C

leads to the onset of infection and diarrhoea

D

leads to undernutrition in the long run

E

None of the above

Correct Answer

B

Marks

1

Comprehension

Read the passage and answer the questions below:

Most malnutrition is invisible. Consistent undernutrition, together with bouts of infection and diarrhoea, can retard growth so gradually as to go unnoticed by the mother. Unless a child is seriously underweight or shows obvious signs of malnutrition (listlessness, discoloured hair, irritability, frequent crying, distended stomach) his condition of undernutrition may not be visible to the mother. For timely prevention of malnutrition, the UNICEF has been using the simple inexpensive method of growth monitoring charts which helps mothers whether or not their children are growing and gaining weight correctly and thus can be an effective aid to sound child health and nutrition. The first requirement for children and adults who are undernourished and living at subsistence level is adequate quantity of food. The next is nutritious food, containing all the elements necessary to support life and maintain good health.

Question Description

The symptoms of listlessness, discoloured hair, irritability, frequent crying, distended stomach with underweight in a child indicate that s/he is suffering from

A undernutrition

B underweight

C diarrhoea

D malnourishment

E None of the above

Correct Answer A

Marks 1

39

Comprehension

Read the passage and answer the questions below:

Most malnutrition is invisible. Consistent undernutrition, together with bouts of infection and diarrhoea, can retard growth so gradually as to go unnoticed by the mother. Unless a child is seriously underweight or shows obvious signs of malnutrition (listlessness, discoloured hair, irritability, frequent crying, distended stomach) his condition of undernutrition may not be visible to the mother. For timely prevention of malnutrition, the UNICEF has been using the simple inexpensive method of growth monitoring charts which helps mothers whether or not their children are growing and gaining weight correctly and thus can be an effective aid to sound child health and nutrition. The first requirement for children and adults who are undernourished and living at subsistence level is adequate quantity of food. The next is nutritious food, containing all the elements necessary to support life and maintain good health.

Question Description

From the options provided below, identify the word or phrase from the passage that means to delay or slow down the development of something.

A

distended

B

listlessness

C

malnutrition

D

retard

E

None of the above

Correct Answer

D

Marks

1

40

Comprehension

Read the passage and answer the questions below:

Most malnutrition is invisible. Consistent undernutrition, together with bouts of infection and diarrhoea, can retard growth so gradually as to go unnoticed by the mother. Unless a child is seriously underweight or shows obvious signs of malnutrition (listlessness, discoloured hair, irritability, frequent crying, distended stomach) his condition of undernutrition may not be visible to the mother. For timely prevention of malnutrition, the UNICEF has been using the simple inexpensive method of growth monitoring charts which helps mothers whether or not their children are growing and gaining weight correctly and thus can be an effective aid to sound child health and nutrition. The first requirement for children and adults who are undernourished and living at subsistence level is adequate quantity of food. The next is nutritious food, containing all the elements necessary to support life and maintain good health.

Question Description

Select the suitable option that explains the term 'subsistence'.

A

a particular kind of matter having uniform properties

B

minimal resources required to survive

C

to continue to live or exist

D

food or drink regarded as nourishment

E

None of the above

Correct Answer

B

Marks

1

41	Question Description	India's first ocean wave's energy project was launched in
	A	1981
	B	1991
	C	1995
	D	2000
	E	None of the above
	Correct Answer	B
	Marks	1
42	Question Description	Which state government launched the 'Gaj Mitra' initiative to prevent human-elephant conflict?
	A	Gujarat
	B	West Bengal
	C	Tamil Nadu
	D	Uttarakhand
	E	None of the above
	Correct Answer	B
	Marks	1

43	Question Description	Who laid the foundation stone of the world's largest and most unique Divyang Park?
	A	Virendra Kumar
	B	Narayan Tatu Rane
	C	Nitin Gadkari
	D	Amit Shah
	E	None of the above
	Correct Answer	C
	Marks	1

44	Question Description	Which Australian player announced his retirement from first-class cricket?
	A	Steve Smith
	B	Shaun Marsh
	C	Todd Murphy
	D	Nathan Lyon
	E	None of the above
	Correct Answer	B
	Marks	1

45	Question Description	Photosynthesis takes place faster in
	A	yellow light
	B	white light
	C	red light
	D	darkness
	E	None of the above
	Correct Answer	B
	Marks	1

46	Question Description	Which country developed the first DNA vaccine for dengue?
	A	Australia
	B	India
	C	Netherlands
	D	Denmark
	E	None of the above
	Correct Answer	B
	Marks	1

47	Question Description	On which date is World Peace and Understanding Day celebrated?
	A	February 23
	B	February 21
	C	February 20
	D	February 22
	E	None of the above
	Correct Answer	A
	Marks	1

48	Question Description	Venturi tube is used for
	A	measuring intensity of earthquakes
	B	measuring specific gravity
	C	measuring density
	D	measuring flow of a fluid
	E	None of the above
	Correct Answer	D
	Marks	1

49	Question Description	Which state has pyramid-like structures known as moidams that have met all the technical requirements of UNESCO's World Heritage Centre?
	A	Assam
	B	Sikkim
	C	Kerala
	D	Gujarat
	E	None of the above
	Correct Answer	A
	Marks	1

50	Question Description	ICAO stands for
	A	International Civil Aviation Organization
	B	Indian Corporation of Agriculture Organization
	C	Institute of Company of Accounts Organization
	D	Institute of Company of Auditor Organization
	E	None of the above
	Correct Answer	A
	Marks	1

51

Question Description

Choose the pair that best represents a similar relationship to the one expressed in the original pair of words.

DOMINANCE : HEGEMONY

A

romance : sympathy

B

furtherance : melancholy

C

independence : autonomy

D

tolerance : philanthropy

E

None of the above

Correct Answer

C

Marks

1

52

Question Description	On what dates of April, 2001 did Wednesday fall?
A	1st, 8th, 15th, 22nd, 29th
B	2nd, 9th, 16th, 23rd, 30th
C	3rd, 10th, 17th, 24th
D	4th, 11th, 18th, 25th
E	None of the above
Correct Answer	D
Marks	1

53

Question Description

Directions: Study the following questions carefully and choose the right answer:

Statement :

Postal rates have been increased to meet the deficit.

Assumptions :

I. The present rates are very low.

II. If the rates are not increased, the deficit cannot be met.

A

if only assumption I is implicit

B

if only assumption II is implicit

C

if either I or II is implicit

D

if neither I nor II is implicit

E

None of the above

Correct Answer

B

Marks

1

54

Question Description

Directions: Each of the following consists of a question and some statements given below it. You have to decide whether the data provided in the statements are sufficient to answer the question.

What is the code for 'win like never'?

Statement I: "record inning win" is coded as "fe gu pu" and "party like win" is coded as "ho sa fe".

Statement II: "never steal money" is coded as "ca mo pi" and "gamble money winner" is coded as "be pi ta".

Statement III: "never forget inning" is coded as "mo gu je" and "steal party tonight" is coded as "sa de ca".

A

If the data in statement I and II together is sufficient.

B

If the data in statement II and III together is sufficient.

C

If the data in all the statements together is necessary.

D

If the data in all the statements together is not sufficient.

E

None of the above

Correct Answer**C****Marks****1**

55

Question Description

Direction: In each of the following question, there is a certain relationship between two given pair on both side of '::' . One part is given on another side of '::' while another part is to be found from the given options, having the same relation with this part as the parts of the given pair . Choose the correct part from the following options.

$$\frac{2}{3} : \frac{19}{29} :: \frac{8}{7} : ?$$

A **C**
 $\frac{89}{79}$ $\frac{79}{69}$

B **D**
 $\frac{79}{79}$ $\frac{80}{70}$

A

A

B

B

C

C

D

D

E

None of the above

Correct Answer

C

Marks

1

Question Description

Directions : Study the following information carefully and answer the questions given below :

The first step has been obtained by multiplying the digits in input. The next steps are not obtained the same way. They are obtained by applying certain logic. Numbers of step II have been obtained by using at least 1 digit of each number in step 1. Each step is a resultant of previous step.

Input:

2	4
---	---

3	2
---	---

8	3
---	---

1	3
---	---

5	2
---	---

1	2
---	---

Step I:

6	8
---	---

8	9
---	---

5	4
---	---

Step II:

1	9
---	---

2	1
---	---

Step III:

9

2

Step IV:

4.5

Input:

1	3
---	---

5	2
---	---

6	2
---	---

1	4
---	---

3	7
---	---

2	1
---	---

What is the sum of the numbers of step III?

A 9

B 12

C 18

D	26
E	None of the above
Correct Answer	A
Marks	1

57

Question Description	The price of a television was first decreased by 10 percent and then increased by 20 percent. The final price was what percent of the initial price?
A	90%
B	98%
C	108%
D	110%
E	None of the above
Correct Answer	C
Marks	1

58

Question Description

Directions: Following questions are based upon the word series given below.

DEN, RAT, EAR, OWL, CUB

If E is added in the end of the words that start with consonants and B is added in the beginning of the words that start with vowel then how many meaningful English words can be formed so?

A

2

B

5

C

3

D

4

E

None of the above

Correct Answer

D

Marks

1

59

Question Description

Directions: In each question below there are given some statements followed by some conclusions. You have to take the given statements to be true even if they seem to be at variance with commonly known facts. Read all the conclusions and then decide which of the given conclusions logically follows/follow from the given statements, disregarding commonly known facts.

Statements:

No curtain is an element.

All elements are pillows.

Conclusions:

I. All pillows being curtains is a possibility.

II. Some elements are definitely not curtains.

A

Only conclusion I follows

B

Only conclusion II follows

C

Either conclusion I or II follows

D

Both conclusions I and II follows

E

None of the above

Correct Answer

B

Marks

1

60

Question Description	At 3:40, the hour hand and the minute hand of a clock form an angle of:
A	120°
B	125°
C	130°
D	135°
E	None of the above
Correct Answer	C
Marks	1

61

Question Description

Directions: Read the following information carefully and answer the question given beside.

In a code language,

start walk stop diet is coded as 8% #21 3\$7 *6

walk rest start bite is coded as #9 *6 2@9 #21

stop work diet rest is coded as ^78 8% 3\$7 #9

bite rest start diet is coded as 2@9 #9 *6 3\$7

Find the code for 'work diet'?

A 3\$7 #9

B ^78 3\$7

C ^78 #9

D 3\$7 *6

E None of the above

Correct Answer B

Marks 1

62

Question Description

Each of the questions given below consists of a question followed by three statements. You have to study the question and the statements and decide which of the statement(s) is/are necessary to answer the question.

What is the speed of the train?

I. The train crosses a tree in 13 seconds.

II. The train crosses a platform of length 250 metres in 27 seconds.

III. The train crosses another train running in the same direction in 32 seconds.

A

I and II only

B

II and III only

C

I and III only

D

Any two of the three

E

None of the above

Correct Answer

A

Marks

1

63

Question Description	<p>The following questions are based on five words given below:</p> <p>MET</p> <p>ARK</p> <p>MOB</p> <p>SKI</p> <p>URN</p> <p>(The new words formed after performing the mentioned operations may or may not necessarily be meaningful English word)</p> <p>If in each of the words, all the alphabets are arranged in English alphabetical order within the word, how many words will be begin with a vowel?</p>
A	None
B	One
C	Two
D	Three
E	None of the above
Correct Answer	D
Marks	1

64

Question Description

Direction: In each of the following question, there is a certain relationship between two given pair on both side of '::'. One word is given on another side of '::' while another word is to be found from the given options, having the same relation with this word as the words of the given pair . Choose the correct word from the following options.

Hair : Bald :: Crop : ?

A

Field

B

Farmer

C

Rain

D

Barren

E

None of the above

Correct Answer

D

Marks

1

65

Question Description

Direction: In each of the following question, there is a certain relationship between two given pair on both side of ':' . One word is given on another side of ':' while another word is to be found from the given options, having the same relation with this word as the words of the given pair . Choose the correct word from the following options..

MAD : JXA :: RUN : ?

A

OSQ

B

PRJ

C

UXQ

D

ORK

E

None of the above

Correct Answer

D

Marks

1

66

Question Description	Which is the odd one out?
A	optimize
B	retrograde
C	ameliorate
D	regenerate
E	None of the above
Correct Answer	B
Marks	1

67

Question Description

Directions: Read the following information carefully and answer the questions given beside.

Ten guards from A to J are standing on ten gates of a pentagon shaped park. The gates are built such that the gates at the corners of the park are large and the gates at the edges of the park are small. The guards at the large gate are facing towards the center while the guards at the small gate are facing outside the center.

B is standing third to the right of E, who is standing at one of the large gates. C is on the immediate left of D. I is an immediate neighbor of B and stands third to the right of F. C is not adjacent to both F and B. A is facing towards the center. G faces outside and is not an immediate neighbor of I and C. Only 4 guards stand between A and H.

Four of the following five are alike in a certain way and thus form a group. Which of the following does not belong to the same group?

A

D

B

I

C

E

D

B

E

None of the above

Correct Answer

D

Marks

1

68

Question Description

Directions: Study the following information carefully and answer the questions given beside:

Garv is the son of Sashi. Heer is the father of Manu. Garv is married to Devi. Garv and Manu are siblings. Prem is the brother of Devi. Sashi has only one son. Riya is the son of Garv. Prem is the father of Kaka. Joshi is the daughter of Manu. Prem has no daughters.

How is Manu related to prem?

A

Daughter

B

Sister-in-law

C

Wife of brother-in-law

D

Sister

E

None of the above

Correct Answer

B

Marks

1

69

Question Description	How many pairs of letters are there in the word NURSING which have as many letters between them as in the alphabet?
A	One
B	Three
C	Five
D	Six
E	None of the above
Correct Answer	B
Marks	1

70

Question Description

Find missing numbers?

5	3	6
7	20	?
9	21	17
38	?	47

A

43, 32

B

55 , 65

C

43, 48

D

43, 55

E

None of the above

Correct Answer

D

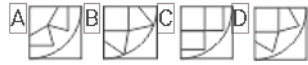
Marks

1

71

Question Description

Which Answer Figure will complete the pattern in the figure?



A

A

B

B

C

C

D

D

E

None of the above

Correct Answer

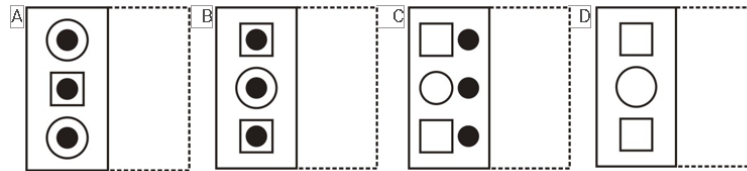
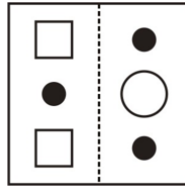
D

Marks

1

Question Description

A square transparent sheet with a pattern is given in Figure. Find out from amongst the alternatives as to how the pattern would appear when the transparent sheet is folded at the dotted line.



A

A

B

B

C

C

D

D

E

None of the above

Correct Answer

B

Marks

1

73

Question Description

Study the following questions carefully and choose the right answer:

Statement: The cinema halls are incurring heavy losses these days as people prefer to watch movies in home on TV than to visit cinema halls.

Courses of action:

I. The cinema halls should be demolished and residential multi-storey buildings should be constructed there.

II. The cinema halls should be converted into shopping malls.

A

Only I follows

B

Only II follows

C

Either I or II follows

D

Neither I nor II follows

E

None of the above

Correct Answer

D

Marks

1

74

Question Description

Directions : Read the given instructions carefully and answer the questions beside-

A + B (5) = A is 10 m to the NORTH of B

A - B (7) = A is 12 m to the SOUTH of B

A * B (12) = A is 17 m to the EAST of B

A / B (11) = A is 16 m to the West of B.

R / P (13), P / Q (19) , S + Q (5), U / S (19), U – T (5)

What is the shortest distance between S and P?

A 26m

B 25m

C 28m

D 23m

E None of the above

Correct Answer A

Marks 1

75

Question Description	A motorboat, whose speed in 15 km/hr in still water goes 30 km downstream and comes back in a total of 4 hours 30 minutes. The speed of the stream (in km/hr) is:
A	4
B	5
C	6
D	10
E	None of the above
Correct Answer	B
Marks	1