

Computer Based Examination System

Exported On *	2023/04/03 12:23:22
Title *	Question Paper Answer Key
OES Exam *	GPSC08202227 / Child Development Project Officer or Social Welfare Officer/ Completed / 2023-04-02

1	<b>Question Description</b>	Classical conditioning effects are an example of:
	<b>A</b>	eidetic memory
	<b>B</b>	primary memory
	<b>C</b>	retroactive interference
	<b>D</b>	implicit memory
	<b>E</b>	None of the above
	<b>Correct Answer</b>	D
	<b>Marks</b>	1

2	<b>Question Description</b>	Who among the following has proposed a model to explain the differentiation of social system, based on an analysis of the way in which a particular system responds to forces for change?
	<b>A</b>	N J Smelser
	<b>B</b>	Talcott Parsons
	<b>C</b>	G H Mead
	<b>D</b>	Daniel Bell
	<b>E</b>	None of the above
	<b>Correct Answer</b>	B
	<b>Marks</b>	1

3	<b>Question Description</b>	..... was a Swiss psychologist known for his work on child development.
	<b>A</b>	Jean William Fritz Piaget
	<b>B</b>	Lev Vygotsky
	<b>C</b>	Erik Erikson
	<b>D</b>	Albert Bandura
	<b>E</b>	None of the above
	<b>Correct Answer</b>	A
	<b>Marks</b>	1

4

<b>Question Description</b>	Which of the following is not the objective of special education?
-----------------------------	---

<b>A</b>	Help in adjustment in environment
----------	-----------------------------------

<b>B</b>	Separation from mainstream education
----------	--------------------------------------

<b>C</b>	Bring educational opportunities at doorstep
----------	---

<b>D</b>	To make familiars with their capacities
----------	---

<b>E</b>	None of the above
----------	-------------------

<b>Correct Answer</b>	B
-----------------------	---

<b>Marks</b>	1
--------------	---

5

<b>Question Description</b>	Radha's teacher observed that Radha is finding difficult in reading blackboard. The doctor suggests that she needs to increase the food rich in which of the following nutrients.
<b>A</b>	Vitamin K
<b>B</b>	Vitamin A
<b>C</b>	Vitamin C
<b>D</b>	Vitamin D
<b>E</b>	None of the above
<b>Correct Answer</b>	B
<b>Marks</b>	1

6

<b>Question Description</b>	In October 2021, the National Commission for Protection of Child Rights launched a pilot project for financial help to vulnerable children who lost their single or both parents to Covid-19. Mention the amount.
<b>A</b>	Rs 1000
<b>B</b>	Rs 1500
<b>C</b>	Rs 2000
<b>D</b>	Rs 2500
<b>E</b>	None of the above
<b>Correct Answer</b>	C
<b>Marks</b>	1

7

<b>Question Description</b>	Pavlov is famous for his work in:
<b>A</b>	contingent conditioning
<b>B</b>	operant conditioning
<b>C</b>	classical conditioning
<b>D</b>	oppositional conditioning
<b>E</b>	None of the above
<b>Correct Answer</b>	C
<b>Marks</b>	1

8	<b>Question Description</b>	Taking away a child's toys after she has hit her brother (to stop her hitting him again) is an example of:
	<b>A</b>	positive punishment
	<b>B</b>	negative punishment
	<b>C</b>	vindictive conditioning
	<b>D</b>	observational learning
	<b>E</b>	None of the above
	<b>Correct Answer</b>	B
	<b>Marks</b>	1

9	<b>Question Description</b>	What is the Piaget's theory focusses on children developing?
	<b>A</b>	mental representations
	<b>B</b>	language
	<b>C</b>	cognitive schemas
	<b>D</b>	theory of mind
	<b>E</b>	None of the above
	<b>Correct Answer</b>	C
	<b>Marks</b>	1

10	<b>Question Description</b>	Under Maslow's need hierarchy: Air, Food, Shelter comes under which need level?
	<b>A</b>	Self- actualization
	<b>B</b>	Social
	<b>C</b>	Safety and Security
	<b>D</b>	Physiological
	<b>E</b>	None of the above
	<b>Correct Answer</b>	D
	<b>Marks</b>	1

11	<b>Question Description</b>	A method of drying in which the moisture in the food is frozen and then sublimed to vapour under vaccum is called as
	<b>A</b>	sun drying
	<b>B</b>	freeze drying
	<b>C</b>	spray drying
	<b>D</b>	drum drying
	<b>E</b>	None of the above
	<b>Correct Answer</b>	B
	<b>Marks</b>	1

12	<b>Question Description</b>	Our tendency to focus on information that is consistent with our beliefs and to ignore contradictory information is called:
	<b>A</b>	contradiction avoidance
	<b>B</b>	confirmation bias
	<b>C</b>	counterfactual thinking
	<b>D</b>	functional fixedness
	<b>E</b>	None of the above
	<b>Correct Answer</b>	B
	<b>Marks</b>	1

13	<b>Question Description</b>	What type of evaluation identifies children with special needs?
	<b>A</b>	Placement
	<b>B</b>	Summative
	<b>C</b>	Continuous
	<b>D</b>	Diagnostic
	<b>E</b>	None of the above
	<b>Correct Answer</b>	D
	<b>Marks</b>	1



14	<b>Question Description</b>	Which institution released the 'Prospects for children in the polycrisis' Report?
	<b>A</b>	NITI Aayog
	<b>B</b>	World Bank
	<b>C</b>	UNICEF
	<b>D</b>	World Economic Forum
	<b>E</b>	None of the above
	<b>Correct Answer</b>	C
	<b>Marks</b>	1

15	<b>Question Description</b>	Amnesty International Organization volunteers campaign for
	<b>A</b>	Human values worldwide
	<b>B</b>	Human evolution studies
	<b>C</b>	Human free education rights
	<b>D</b>	Human rights all over the world.
	<b>E</b>	None of the above
	<b>Correct Answer</b>	D
	<b>Marks</b>	1

16	<b>Question Description</b>	World leaders made a historic commitment to the worlds children by adopting the United Nations Convention on the Rights of the Child – an international agreement on childhood in..... ,
A		1995
B		2003
C		1989
D		2006
E		None of the above
<b>Correct Answer</b>		C
<b>Marks</b>		1
17	<b>Question Description</b>	Which one of the following is the most important characteristic of social stratification?
A		Differential ranking
B		Social differentiation
C		Cultural diversification
D		Geographical segregation
E		None of the above
<b>Correct Answer</b>		A
<b>Marks</b>		1

18	<b>Question Description</b>	..... are Standards that recognise and protect the dignity of all human beings
	<b>A</b>	Human Rights
	<b>B</b>	Child rights
	<b>C</b>	Women rights
	<b>D</b>	Rights of person with disabilities
	<b>E</b>	None of the above
	<b>Correct Answer</b>	A
	<b>Marks</b>	1

19	<b>Question Description</b>	If a child is egocentric, which of the following behaviour would he/she exhibit?
	<b>A</b>	they are focussed on the actions of others
	<b>B</b>	they are focussed on themselves
	<b>C</b>	they want to understand others' reactions
	<b>D</b>	they are only interested in their primary caregiver
	<b>E</b>	None of the above
	<b>Correct Answer</b>	B
	<b>Marks</b>	1

20	<b>Question Description</b>	Which article of the universal declaration of human rights tells that the right of nationality depends on one's wish?
	<b>A</b>	Article 10
	<b>B</b>	Article 16
	<b>C</b>	Article 30
	<b>D</b>	Article 15
	<b>E</b>	None of the above
	<b>Correct Answer</b>	D
	<b>Marks</b>	1
21	<b>Question Description</b>	What is the most common food preservation method?
	<b>A</b>	freezing
	<b>B</b>	fermentation
	<b>C</b>	heating
	<b>D</b>	freeze dying
	<b>E</b>	None of the above
	<b>Correct Answer</b>	C
	<b>Marks</b>	1

22	<b>Question Description</b>	..... is the idea that humans learn from observing and imitating the behavior modelled by others
	<b>A</b>	Personality development theory
	<b>B</b>	Psychoanalytic theory
	<b>C</b>	Psychosocial Developmental Theory
	<b>D</b>	Social Learning Theory
	<b>E</b>	None of the above
	<b>Correct Answer</b>	D
	<b>Marks</b>	1

23	<b>Question Description</b>	Which type of society has more possibility for individual social mobility?
	<b>A</b>	Class based society
	<b>B</b>	Feudal lord based society
	<b>C</b>	Age-grade based society
	<b>D</b>	Caste based society
	<b>E</b>	None of the above
	<b>Correct Answer</b>	A
	<b>Marks</b>	1

24	<b>Question Description</b>	Which of the following diseases is caused by the deficiency of haemoglobin?
	<b>A</b>	Malaria
	<b>B</b>	Anemia
	<b>C</b>	Rabies
	<b>D</b>	Cholera
	<b>E</b>	None of the above
	<b>Correct Answer</b>	B
	<b>Marks</b>	1

25	<b>Question Description</b>	Which of the following is characteristic of a dissociative disorder?
	<b>A</b>	phobic disorder
	<b>B</b>	amnesia
	<b>C</b>	paranoia
	<b>D</b>	depression
	<b>E</b>	None of the above
	<b>Correct Answer</b>	B
	<b>Marks</b>	1

26	<b>Question Description</b>	The caste becomes dominant when it preponderates over the other numerically as well as with
	<b>A</b>	Economic and political power
	<b>B</b>	Social and religious power
	<b>C</b>	Religious and economic power
	<b>D</b>	Political and social power
	<b>E</b>	None of the above
	<b>Correct Answer</b>	A
	<b>Marks</b>	1
27	<b>Question Description</b>	'Mission Indradhanush' launched by the Government of India pertains to
	<b>A</b>	Immunization of children and pregnant women
	<b>B</b>	Construction of smart cities across the country
	<b>C</b>	India's own search for the Earth-like planets in outer space
	<b>D</b>	New Educational policy
	<b>E</b>	None of the above
	<b>Correct Answer</b>	A
	<b>Marks</b>	1

28

<b>Question Description</b>	..... means an undesirable kind of nutrition leading to ill-health. Which results from a lack,excess or imbalance of nutrients in the diet.
<b>A</b>	Malnutrition,
<b>B</b>	Nutrition,
<b>C</b>	Anaemia,
<b>D</b>	overnutrition
<b>E</b>	None of the above
<b>Correct Answer</b>	A
<b>Marks</b>	1



29	<b>Question Description</b>	Disparity in income levels of different economic entities are measured on
	<b>A</b>	Supply curve
	<b>B</b>	Demand curve
	<b>C</b>	Cost curve
	<b>D</b>	Lorenz curve
	<b>E</b>	None of the above
	<b>Correct Answer</b>	D
	<b>Marks</b>	1

30	<b>Question Description</b>	'SWAYAM', an initiative of the Government of India, aims at
	<b>A</b>	Promoting the Self-Help Groups in rural areas
	<b>B</b>	Providing financial and technical assistance to young start-up entrepreneurs
	<b>C</b>	Promoting the education and health of adolescent girls
	<b>D</b>	Providing affordable and quality education to the citizens for free
	<b>E</b>	None of the above
	<b>Correct Answer</b>	D
	<b>Marks</b>	1

31

**Comprehension**

Read the passage and answer the questions below:

When talking about overeating, obesity and other conditions arising from affluence and plenty, we may tend to overlook the fact that ours is a country where a large percentage of the population subsists on too little food and hardly gets a square meal a day. Even if meals are available, they lack the essential nutrients such as protein, fats, vitamins and minerals. Millions of Indian children are living in poverty. An estimated three million die every year owing to certain preventable conditions, including malnutrition. Carelessness of parents, unhygienic environment and poor health conditions and malnutrition make children more susceptible to disease. It will shock you to know that a major cause of blindness in India is the lack of vitamin A, which is found in abundance in carrots, leaves of drum stick trees, milk and green leafy vegetables.

**Question Description**

“It will shock you to know that a major cause of blindness in India is the lack of vitamin A, which is found in abundance in carrots, leaves of drum stick trees, milk and green leafy vegetables.”

This statement indirectly reveals that a large segment of Indian population lacks

**A**

access to vitamins altogether

**B**

carrots, drumsticks, milk and leafy vegetables contain vitamin A

**C**

affordability to have even ordinary diet containing vitamin A

**D**

interest in eating diet containing Vitamin A

**E**

None of the above

**Correct Answer**

C

**Marks**

1

**Comprehension**

Read the passage and answer the questions below:

When talking about overeating, obesity and other conditions arising from affluence and plenty, we may tend to overlook the fact that ours is a country where a large percentage of the population subsists on too little food and hardly gets a square meal a day. Even if meals are available, they lack the essential nutrients such as protein, fats, vitamins and minerals. Millions of Indian children are living in poverty. An estimated three million die every year owing to certain preventable conditions, including malnutrition. Carelessness of parents, unhygienic environment and poor health conditions and malnutrition make children more susceptible to disease. It will shock you to know that a major cause of blindness in India is the lack of vitamin A, which is found in abundance in carrots, leaves of drum stick trees, milk and green leafy vegetables.

**Question Description**

Most of the population manages to have meals and yet they

**A** suffer from blindness

**B** remain undernourished

**C** die of starvation

**D** die of malnutrition

**E** None of the above

**Correct Answer** B

**Marks** 1

**Comprehension**

Read the passage and answer the questions below:

When talking about overeating, obesity and other conditions arising from affluence and plenty, we may tend to overlook the fact that ours is a country where a large percentage of the population subsists on too little food and hardly gets a square meal a day. Even if meals are available, they lack the essential nutrients such as protein, fats, vitamins and minerals. Millions of Indian children are living in poverty. An estimated three million die every year owing to certain preventable conditions, including malnutrition. Carelessness of parents, unhygienic environment and poor health conditions and malnutrition make children more susceptible to disease. It will shock you to know that a major cause of blindness in India is the lack of vitamin A, which is found in abundance in carrots, leaves of drum stick trees, milk and green leafy vegetables.

**Question Description**

Besides parental neglect and lack of clean surroundings, other major cause of disease in children are

**A**

poor health condition and malnutrition

**B**

unhygienic condition and malnutrition

**C**

unhygienic conditions

**D**

carelessness of parents

**E**

None of the above

**Correct Answer**

A

**Marks**

1

34

**Comprehension**

Read the passage and answer the questions below:

When talking about overeating, obesity and other conditions arising from affluence and plenty, we may tend to overlook the fact that ours is a country where a large percentage of the population subsists on too little food and hardly gets a square meal a day. Even if meals are available, they lack the essential nutrients such as protein, fats, vitamins and minerals. Millions of Indian children are living in poverty. An estimated three million die every year owing to certain preventable conditions, including malnutrition. Carelessness of parents, unhygienic environment and poor health conditions and malnutrition make children more susceptible to disease. It will shock you to know that a major cause of blindness in India is the lack of vitamin A, which is found in abundance in carrots, leaves of drum stick trees, milk and green leafy vegetables.

**Question Description**

Identify from the options given below, the one which indicates the opposite of poverty and scarcity

**A**

overeating, obesity

**B**

affluence and plenty

**C**

square meal a day

**D**

abundance

**E**

None of the above

**Correct Answer**

B

**Marks**

1

35

**Comprehension**

Read the passage and answer the questions below:

When talking about overeating, obesity and other conditions arising from affluence and plenty, we may tend to overlook the fact that ours is a country where a large percentage of the population subsists on too little food and hardly gets a square meal a day. Even if meals are available, they lack the essential nutrients such as protein, fats, vitamins and minerals. Millions of Indian children are living in poverty. An estimated three million die every year owing to certain preventable conditions, including malnutrition. Carelessness of parents, unhygienic environment and poor health conditions and malnutrition make children more susceptible to disease. It will shock you to know that a major cause of blindness in India is the lack of vitamin A, which is found in abundance in carrots, leaves of drum stick trees, milk and green leafy vegetables.

**Question Description**

From the options provided below, find the synonym of “susceptible” as it is used in the above passage

**A**

inclined against

**B**

responsive

**C**

deceptive

**D**

prone

**E**

None of the above

**Correct Answer**

D

**Marks**

1

**Comprehension**

Read the passage and answer the questions below:

A rich top-soil, nourished by centuries of village agriculture; one hundred inches of rain each year; a dense forest and plentiful coconut groves; a fresh, pure supply of water, which we drank straight from our wells—these were free and they formed the material resources of our prosperity. The real foundation of our prosperity, though, was the deep and enduring sense of community that enabled us to make the best of those resources. On this foundation, an excellent tradition of craftsmanship had grown up. Generation after generation of potters, carpenters, blacksmiths, goldsmiths, and weavers learned their trades from their families. They took great pride in the beauty, utility and enduring quality of their work. So, we had all the things we needed—well-crafted, beautiful things that lasted a long time –but we did not do much “consuming”.

**Question Description**

The true basis of our prosperity according to the above passage was

**A**

rich top-soil, heavy rain, rich crop and fresh water

**B**

centuries of agriculture and free material resources

**C**

an excellent tradition of craftsmanship and home training in trades

**D**

sense of community and best utilization of resources

**E**

None of the above

**Correct Answer**

D

**Marks**

1

**Comprehension**

Read the passage and answer the questions below:

A rich top-soil, nourished by centuries of village agriculture; one hundred inches of rain each year; a dense forest and plentiful coconut groves; a fresh, pure supply of water, which we drank straight from our wells—these were free and they formed the material resources of our prosperity. The real foundation of our prosperity, though, was the deep and enduring sense of community that enabled us to make the best of those resources. On this foundation, an excellent tradition of craftsmanship had grown up. Generation after generation of potters, carpenters, blacksmiths, goldsmiths, and weavers learned their trades from their families. They took great pride in the beauty, utility and enduring quality of their work. So, we had all the things we needed—well-crafted, beautiful things that lasted a long time –but we did not do much “consuming”.

**Question Description**

The following trait is at variance with other qualities of the community mentioned in the passage

**A**

pride in beauty, utility and enduring quality of work

**B**

failure to be consumers

**C**

tendency to take material resources for granted

**D**

learning the trade from their families

**E**

None of the above

**Correct Answer**

B

**Marks**

1



38

**Comprehension**

Read the passage and answer the questions below:

A rich top-soil, nourished by centuries of village agriculture; one hundred inches of rain each year; a dense forest and plentiful coconut groves; a fresh, pure supply of water, which we drank straight from our wells—these were free and they formed the material resources of our prosperity. The real foundation of our prosperity, though, was the deep and enduring sense of community that enabled us to make the best of those resources. On this foundation, an excellent tradition of craftsmanship had grown up. Generation after generation of potters, carpenters, blacksmiths, goldsmiths, and weavers learned their trades from their families. They took great pride in the beauty, utility and enduring quality of their work. So, we had all the things we needed—well-crafted, beautiful things that lasted a long time –but we did not do much “consuming”.

**Question Description**

The term “enduring” is used in the passage more than once. From the options provided below, select the synonym that is unsuitable in both the contexts

**A**

long-lasting

**B**

abiding

**C**

constant

**D**

persisting

**E**

None of the above

**Correct Answer**

D

**Marks**

1

39

**Comprehension**

Read the passage and answer the questions below:

A rich top-soil, nourished by centuries of village agriculture; one hundred inches of rain each year; a dense forest and plentiful coconut groves; a fresh, pure supply of water, which we drank straight from our wells—these were free and they formed the material resources of our prosperity. The real foundation of our prosperity, though, was the deep and enduring sense of community that enabled us to make the best of those resources. On this foundation, an excellent tradition of craftsmanship had grown up. Generation after generation of potters, carpenters, blacksmiths, goldsmiths, and weavers learned their trades from their families. They took great pride in the beauty, utility and enduring quality of their work. So, we had all the things we needed—well-crafted, beautiful things that lasted a long time –but we did not do much “consuming”.

**Question Description**

According to the passage, an tradition of craftsmanship could evolve and thrive mainly due to

**A**

the demand for the products

**B**

the products being of good quality

**C**

a deep sense of community

**D**

Both A and B

**E**

None of the above

**Correct Answer**

C

**Marks**

1

**Comprehension**

Read the passage and answer the questions below:

A rich top-soil, nourished by centuries of village agriculture; one hundred inches of rain each year; a dense forest and plentiful coconut groves; a fresh, pure supply of water, which we drank straight from our wells—these were free and they formed the material resources of our prosperity. The real foundation of our prosperity, though, was the deep and enduring sense of community that enabled us to make the best of those resources. On this foundation, an excellent tradition of craftsmanship had grown up. Generation after generation of potters, carpenters, blacksmiths, goldsmiths, and weavers learned their trades from their families. They took great pride in the beauty, utility and enduring quality of their work. So, we had all the things we needed—well-crafted, beautiful things that lasted a long time –but we did not do much “consuming”.

**Question Description**

Of the craftsmen mentioned in the passage, blacksmiths deal with

**A**

iron

**B**

terracotta

**C**

copper

**D**

wool

**E**

None of the above

**Correct Answer**

A

**Marks**

1

41	<b>Question Description</b>	Where did PM Modi address the 'One World TB Summit'?
	<b>A</b>	Varanasi
	<b>B</b>	Dehradun
	<b>C</b>	Pune
	<b>D</b>	Noida
	<b>E</b>	None of the above
	<b>Correct Answer</b>	A
	<b>Marks</b>	1

42	<b>Question Description</b>	Which International Yoga Day will the Yoga Mahotsav 2023 mark the beginning of the 100-day countdown for?
	<b>A</b>	5th
	<b>B</b>	6th
	<b>C</b>	9th
	<b>D</b>	11th
	<b>E</b>	None of the above
	<b>Correct Answer</b>	C
	<b>Marks</b>	1

43	<b>Question Description</b>	On which date is 'Martyr's Day' (Shaheed Diwas) observed?
	<b>A</b>	March 23
	<b>B</b>	March 21
	<b>C</b>	March 20
	<b>D</b>	March 19
	<b>E</b>	None of the above
	<b>Correct Answer</b>	A
	<b>Marks</b>	1

44	<b>Question Description</b>	MPG' extension refers usually to what kind of file?
	<b>A</b>	WordPerfect Document file
	<b>B</b>	MS Office document
	<b>C</b>	Animation/movie file
	<b>D</b>	Image file
	<b>E</b>	None of the above
	<b>Correct Answer</b>	C
	<b>Marks</b>	1

45	<b>Question Description</b>	The Great Victoria Desert is located in
	<b>A</b>	Canada
	<b>B</b>	West Africa
	<b>C</b>	Australia
	<b>D</b>	North America
	<b>E</b>	None of the above
	<b>Correct Answer</b>	C
	<b>Marks</b>	1

46	<b>Question Description</b>	In which city will India host the 2023 SAFF Championship?
	<b>A</b>	Chennai
	<b>B</b>	Mumbai
	<b>C</b>	Bengaluru
	<b>D</b>	Lucknow
	<b>E</b>	None of the above
	<b>Correct Answer</b>	C
	<b>Marks</b>	1

47	<b>Question Description</b>	Which state is organizing the Taj Mahotsav 2023?
	<b>A</b>	Uttar Pradesh
	<b>B</b>	Madhya Pradesh
	<b>C</b>	Himachal Pradesh
	<b>D</b>	Arunachal Pradesh
	<b>E</b>	None of the above
	<b>Correct Answer</b>	A
	<b>Marks</b>	1

48	<b>Question Description</b>	Where will the G20 Research and Innovation Initiative Gathering under India's Presidency begin?
	<b>A</b>	Silchar
	<b>B</b>	Tezpur
	<b>C</b>	Dispur
	<b>D</b>	Dibrugarh
	<b>E</b>	None of the above
	<b>Correct Answer</b>	D
	<b>Marks</b>	1

49

<b>Question Description</b>	Which state government is launching the five-year Millet Mission?
<b>A</b>	Tamil Nadu
<b>B</b>	Maharashtra
<b>C</b>	Uttarakhand
<b>D</b>	Meghalaya
<b>E</b>	None of the above
<b>Correct Answer</b>	A
<b>Marks</b>	1

50

<b>Question Description</b>	Which game did Sarabjot Singh belong to?
<b>A</b>	Hockey
<b>B</b>	Cricket
<b>C</b>	Shooting
<b>D</b>	Golf
<b>E</b>	None of the above
<b>Correct Answer</b>	C
<b>Marks</b>	1



51

**Question Description**

Direction: In each of the following question, there is a certain relationship between two given pair on both side of ':' . One word is given on another side of ':' while another word is to be found from the given options, having the same relation with this word as the words of the given pair . Choose the correct word from the following options..

BJCI : JBIC :: CXDW : ?

**A**

JCDU

**B**

BCJU

**C**

EVFU

**D**

XCWD

**E**

None of the above

**Correct Answer**

D

**Marks**

1

52

<b>Question Description</b>	If all the consonants starting from B are given sequentially the value of even numbers such as B=2, C=4, and all the vowels are given the value of 5 each then what will be the value of the letters of the word CUSTOM ?
<b>A</b>	92
<b>B</b>	86
<b>C</b>	82
<b>D</b>	96
<b>E</b>	None of the above
<b>Correct Answer</b>	D
<b>Marks</b>	1

53

**Question Description** What number continues the sequence?

25, 50, 27, 46, 31, 38, 39, ?

**A** 55**B** 22**C** 30**D** 24**E** None of the above**Correct Answer** B**Marks** 1

54

**Question Description**

Study the following questions carefully and choose the right answer:

Statement: If the retired Professors of the same Institutes are also invited to deliberate on restructuring of the organisation, their contribution may be beneficial to the Institute.

Courses of action:

I. Management may seek opinion of the employees before calling retired professors.

II. Management should involve experienced people for the systematic restructuring of the organisation.

**A** Only I follows

**B** Only II follows

**C** Either I or II follows

**D** Neither I nor II follows

**E** None of the above

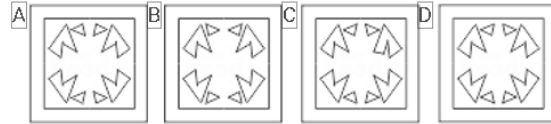
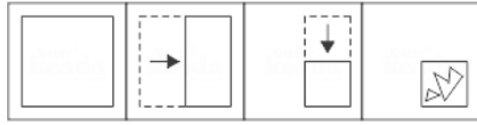
**Correct Answer** B

**Marks** 1

55

## Question Description

Directions: A piece of a paper is folded and cut as shown below in the Question Figures. Indicate how it will appear when opened.



A

A

B

B

C

C

D

D

E

None of the above

Correct Answer

D

Marks

1

56

**Question Description**

Find missing numbers

11	24	13	?
8	12	10	10
16	9	?	13

**A**

11, 13

**B**

12, 20

**C**

22, 12

**D**

9, 13

**E**

None of the above

**Correct Answer**

C

**Marks**

1

57

<b>Question Description</b>	If 6th March, 2005 is Monday, what was the day of the week on 6th March, 2004?
<b>A</b>	Sunday
<b>B</b>	Saturday
<b>C</b>	Tuesday
<b>D</b>	Wednesday
<b>E</b>	None of the above
<b>Correct Answer</b>	A
<b>Marks</b>	1

58

**Question Description**

Directions: Study the following questions carefully and choose the right answer:

Statement :

“Buy pure butter of company A.” - an advertisement in a magazine.

Assumptions :

I. No other company supplies pure butter.

II. People read advertisement.

**A**

if only assumption I is implicit

**B**

if only assumption II is implicit

**C**

if either I or II is implicit

**D**

if neither I nor II is implicit

**E**

None of the above

**Correct Answer**

B

**Marks**

1



59

**Question Description**

Direction: In each of the following question, there is a certain relationship between two given pair on both side of ':' . One word is given on another side of ':' while another word is to be found from the given options, having the same relation with this word as the words of the given pair . Choose the correct word from the following options.

72 : 18 :: 56 : ?

**A**

24

**B**

22

**C**

20

**D**

16

**E**

None of the above

**Correct Answer**

B

**Marks**

1

**Question Description**

Directions: Read the following information carefully and answer the questions given beside.

In a certain code language,

'lavish lifestyle high desires' is coded as "@16f \$36i @9d \$16g"

'humanity seldom exhibit mercy' is coded as "@25h #16f @16g \$16e"

'opinion matters heart felt' is coded as "#9g \$25g %9e \$9d"

'push yourself achieve goals' is coded as "&9d \$25h \$9g %9e"

Code – '\$25i %16f' stands for which of the following phrases?

**A**

adventure island

**B**

horrible nightmare

**C**

witness digitally

**D**

showcase quality

**E**

None of the above

**Correct Answer**

A

**Marks**

1

61

**Question Description**

Directions: Study the following information carefully and answer the questions given beside.

In a tech exhibition, seven mobiles of seven different companies viz. Motorola, Sony, HTC, Oppo, Micromax, Lenovo and Apple were displayed in a row, facing north such that;

(I) Motorola was immediate right of Apple.

(II) Apple was fourth to the right of HTC.

(III) Oppo was between Sony and Lenovo

(IV) HTC, which was third to the left of Sony, was at one of the ends.

Which mobiles are on the immediate either side of Motorola?

**A**

Sony and Oppo

**B**

Oppo and HTC

**C**

HTC and Micromax

**D**

Sony and Apple

**E**

None of the above

**Correct Answer**

E

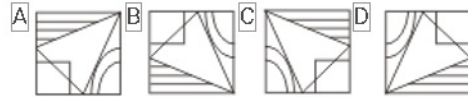
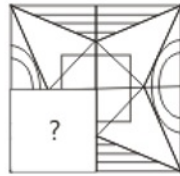
**Marks**

1

62

**Question Description**

Which Answer Figure will complete the pattern in the figure?



**A**

A

**B**

B

**C**

C

**D**

D

**E**

None of the above

**Correct Answer**

D

**Marks**

1

63

**Question Description**

Direction: In each of the following question, there is a certain relationship between two given pair on both side of '::'. One word is given on another side of '::' while another word is to be found from the given options, having the same relation with this word as the words of the given pair . Choose the correct word from the following options.

Monotony : Variety : : Crudeness : ?

**A**

Refinement

**B**

Raw

**C**

Sobriety

**D**

Simplicity

**E**

None of the above

**Correct Answer**

A

**Marks**

1

64

<b>Question Description</b>	How many times are the hands of a clock at right angle in a day?
-----------------------------	--

<b>A</b>	22
----------	----

<b>B</b>	24
----------	----

<b>C</b>	44
----------	----

<b>D</b>	48
----------	----

<b>E</b>	None of the above
----------	-------------------

<b>Correct Answer</b>	C
-----------------------	---

<b>Marks</b>	1
--------------	---

65

**Question Description**

Directions: In each question below are given some statements followed by some conclusions. You have to take the given statements to be true even if they seem to be at variance with commonly known facts. Read all the conclusions and then decide which of the given conclusions logically follows/follow from the given statements, disregarding commonly known facts.

Statements:

Some boys are girls.

Some girls are women.

All women are men.

Conclusions:

I. Some men are girls.

II. All boys being men is a possibility.

**A**

Neither I nor II follows

**B**

Only I follows

**C**

Either I or II follows

**D**

Both I and II follow

**E**

None of the above

**Correct Answer**

D

**Marks**

1

66

**Question Description**

Directions: A word and number arrangement machine, when given an input line of words and numbers, rearranges them following a particular rule in each step. The following is an illustration of input and rearrangement.

Input: Fable 76 Quibble 24 Terrible 54 Able 82 Gamble 65

Step1:82 Fable 76 Quibble 24 Terrible 54 Gamble 65 Able

Step2:Fable 82 76 Quibble 24 Terrible 54 Gamble Able 65

Step3:76 Fable 82 Quibble 24 Terrible 54 Able 65 Gamble

Step4:Quibble 76 Fable 82 Terrible 54 Able 65 Gamble 24

Step5:54 Quibble 76 Fable 82 Able 65 Gamble 24 Terrible

Step 5 is the final output.

Find the different steps of output using the above mentioned logic for the following input.

Input: Scientific 29 Majaestic 34 Fantastic 58 Hectic 77 Genetic 84

in the final output, how many elements are there between the greatest and the smallest numbers of the given arrangement?

**A** Four

**B** Two

**C** Three

**D** Five

**E** None of the above

**Correct Answer** E

**Marks** 1



67

**Question Description**

Each of the questions given below consists of a question followed by three statements. You have to study the question and the statements and decide which of the statement(s) is/are necessary to answer the question.

What is the speed of the boat in still water?

I. It takes 2 hours to cover the distance between A and B downstream.

II. It takes 4 hours to cover the distance between A and B upstream.

**A**

I alone sufficient while II alone not sufficient to answer

**B**

II alone sufficient while I alone not sufficient to answer

**C**

Either I or II alone sufficient to answer

**D**

Both I and II are not sufficient to answer

**E**

None of the above

**Correct Answer**

D

**Marks**

1

68

**Question Description**

Directions: Read the following information carefully and answer the questions given beside.

Seven players viz. L,M,N,O,P,Q, and R of Volleyball were standing on a ground such that L was 10m to the north of R, who was 5m west of Q. M was 6m south of N, who was 8m east of R. P was 13m north of N and 4m east of O.

After sometime few of them changed their position, which will be denoted by adding ` to their names. For example - new position of L will be denoted as L`.

O moved 5m towards south and then turned left and moved 2m and stopped.

L moved 5m towards north-east and then moved 1m in north and stopped.

If Q moved 1m towards west then what is the straight distance between L` and Q`?

A 12m

B 15m

C 14m

D 17m

E None of the above

**Correct Answer** C

**Marks** 1

69

**Question Description**

Choose the pair that best represents a similar relationship to the one expressed in the original pair of words.

AERIE : EAGLE

**A**

bridge : architect

**B**

unit : apartment

**C**

kennel : veterinarian

**D**

house : person

**E**

None of the above

**Correct Answer**

D

**Marks**

1

70

**Question Description**

Directions: Read the following alphanumeric symbol series carefully and answer the question based on it.

T \$ 6 U K 7 % \* 4 J O @ 2 3 L P 9 8 A # Y ^ 5 W &

If all the even digits are skipped from the sequence then which of the following elements is fifth to the right of '@'?

**A**

A

**B**

U

**C**

W

**D**

Y

**E**

None of the above

**Correct Answer**

A

**Marks**

1

71

**Question Description**

The following questions are based on five words given below:

MET

ARK

MOB

SKI

URN

(The new words formed after performing the mentioned operations may or may not necessarily be meaningful English word)  
If the second alphabet in each of the word is changed to the previous alphabet in the English alphabetical order, how many words having no vowel will be formed?

**A**

Four

**B**

One

**C**

Two

**D**

Three

**E**

None of the above

**Correct Answer**

C

**Marks**

1

**Question Description**

Directions: Study the following information carefully and answer the questions given beside:

Cheenu has a family of eight members. Bablu is the eldest male member of the family. Haryali is the daughter-in-law of Neelu and sister-in-law of Sonu and Anku. Apart from Cheenu and Bablu, only Sonu is a male member of the family. Anku is the aunt of Cheenu's two daughters Saba and Daya.

Who is the husband of Haryali?

**A**

Bablu

**B**

Sonu

**C**

Cheenu

**D**

Cannot be determined

**E**

None of the above

**Correct Answer**

C

**Marks**

1

73

**Question Description**

A train passes a station platform in 36 seconds and a man standing on the platform in 20 seconds. If the speed of the train is 54 km/hr, what is the length of the platform?

**A**

120 m

**B**

240 m

**C**

300 m

**D**

600 m

**E**

None of the above

**Correct Answer**

B

**Marks**

1

74

**Question Description**

Directions : Each of the following consists of a question and two statements numbered I and II given below it. You have to decide whether the data provided in the statements are sufficient to answer the question.

7 books namely Book 1, Book 2, Book 3, Book 4, Book 5, Book 6 and Book 7 are of different weights. Find the second lightest book?

Statement I : Book 1 is heavier than Book 4, which is just lighter than Book 3. Book 2 is not the lightest. Book 5 is just heavier than Book 3.

Statement II : Book 3 is heavier than only two books. Book 7 is just heavier than Book 1, which is heavier than Book 4. Book 4 is lighter than Book 3.

**A**

If the data in statement I is sufficient to answer the question.

**B**

If the data in statement II is sufficient to answer the question.

**C**

If the data in either statement I or statement II is sufficient to answer the question.

**D**

If the data in both statement I and statement II is necessary to answer the question.

**E**

None of the above

**Correct Answer**

D

**Marks**

1



75

**Question Description**

What number should replace the question mark?

AVIATOR = 6

FIXTURE = 9

WIZARDS = 1

DIVERSE = ?

**A**

2

**B**

3

**C**

4

**D**

5

**E**

None of the above

**Correct Answer**

C

**Marks**

1